





Используйте матрицу для решения задачи.

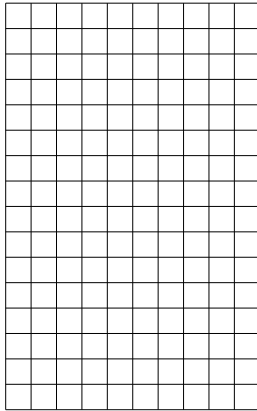
1) $20 \times 16 =$




2) $20 \times 13 =$




3) $16 \times 10 =$




4) $11 \times 10 =$



5) $19 \times 10 =$



6) $10 \times 14 =$



Ответы

1. _____

2. _____

3. _____

4. _____

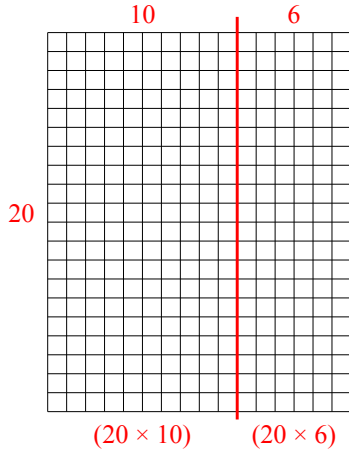
5. _____

6. _____

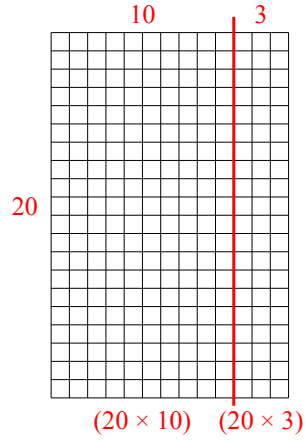


Используйте матрицу для решения задачи.

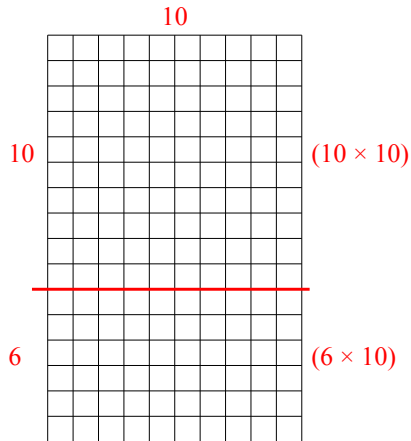
1) $20 \times 16 =$



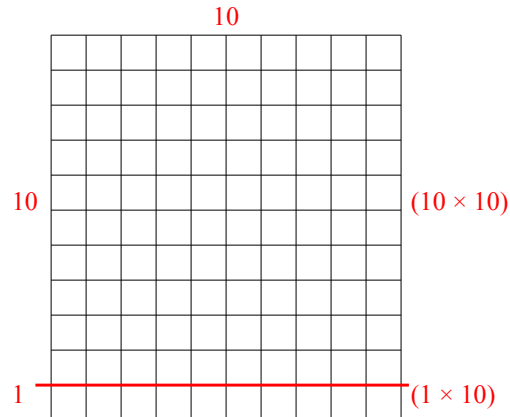
2) $20 \times 13 =$



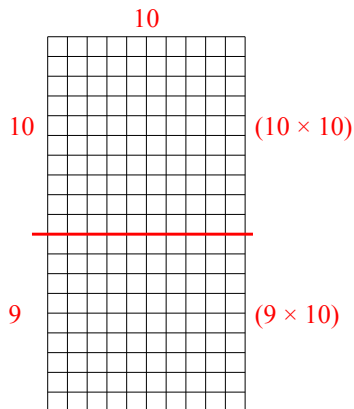
3) $16 \times 10 =$



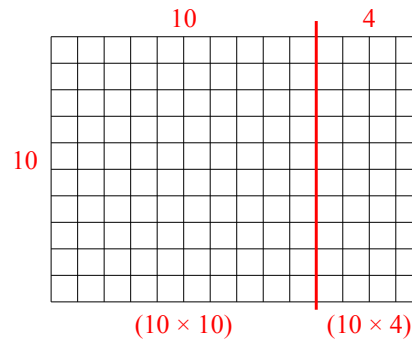
4) $11 \times 10 =$



5) $19 \times 10 =$



6) $10 \times 14 =$



Ответы

1. 320
2. 260
3. 160
4. 110
5. 190
6. 140