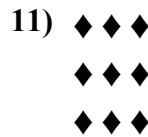



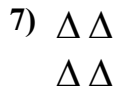


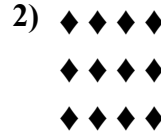






Напишите уравнение для выражения таблицы и затем найдите количество фигур.



Ответы

обр. $5+5+5 = 15$

1. $2+2+2+2 = 8$

2. $4+4+4 = 12$

3. $3+3 = 6$

4. $4+4+4+4 = 16$

5. $5+5+5+5+5 = 25$

6. $3+3+3+3 = 12$

7. $2+2 = 4$

8. $2+2+2 = 6$

9. $5+5 = 10$

10. $3+3+3+3+3 = 15$

11. $3+3+3 = 9$