

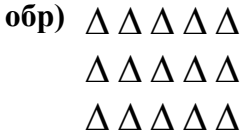




Напишите уравнение для выражения таблицы и затем найдите количество фигур.



Ответы

обр. $5+5+5 = 15$

1. _____

2. _____

3. _____

4. _____

5. _____

6. _____



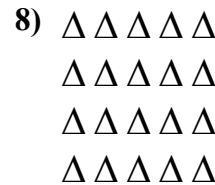


7. _____

8. _____

9. _____



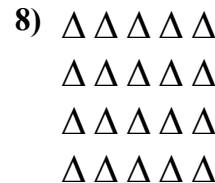
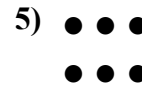



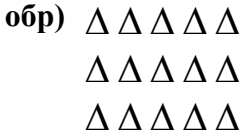
10. _____

11. _____





Напишите уравнение для выражения таблицы и затем найдите количество фигур.



Ответы

обр. $5+5+5 = 15$

1. $5+5+5+5+5 = 25$

2. $4+4 = 8$

3. $2+2+2+2+2 = 10$

4. $3+3+3+3 = 12$

5. $3+3 = 6$

6. $2+2+2 = 6$

7. $2+2+2+2 = 8$

8. $5+5+5+5 = 20$

9. $4+4+4+4+4 = 20$

10. $3+3+3 = 9$

11. $5+5 = 10$