

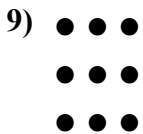
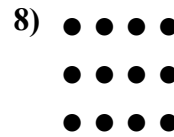


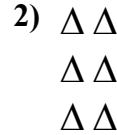








Напишите уравнение для выражения таблицы и затем найдите количество фигур.



Ответы

обр.  $5+5+5 = 15$

1.  $4+4+4+4 = 16$

2.  $2+2+2 = 6$

3.  $5+5+5+5+5 = 25$

4.  $5+5 = 10$

5.  $2+2+2+2+2 = 10$

6.  $3+3 = 6$

7.  $5+5+5+5 = 20$

8.  $4+4+4 = 12$

9.  $3+3+3 = 9$

10.  $4+4+4+4+4 = 20$

11.  $3+3+3+3+3 = 15$