
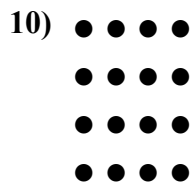

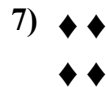

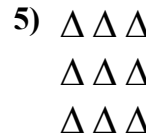










Напишите уравнение для выражения таблицы и затем найдите количество фигур.



Ответы

обр.  $5+5+5 = 15$

1.  $3+3 = 6$

2.  $3+3+3+3 = 12$

3.  $5+5 = 10$

4.  $5+5+5+5+5 = 25$

5.  $3+3+3 = 9$

6.  $4+4 = 8$

7.  $2+2 = 4$

8.  $3+3+3+3+3 = 15$

9.  $4+4+4 = 12$

10.  $4+4+4+4 = 16$

11.  $4+4+4+4+4 = 20$