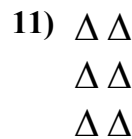


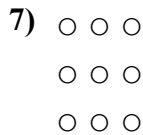

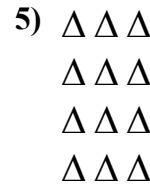










Напишите уравнение для выражения таблицы и затем найдите количество фигур.



Ответы

обр. 5+5+5 = 15

1. 4+4+4 = 12

2. 3+3+3+3+3 = 15

3. 3+3 = 6

4. 5+5 = 10

5. 3+3+3+3 = 12

6. 5+5+5+5 = 20

7. 3+3+3 = 9

8. 4+4 = 8

9. 2+2+2+2+2 = 10

10. 4+4+4+4+4 = 20

11. 2+2+2 = 6