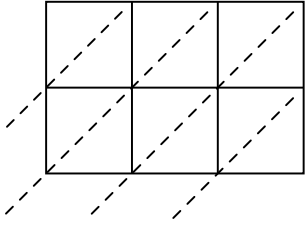




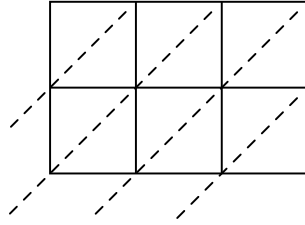
Используйте пространственную решетку для умножения, чтобы решить задачу.

Отвeты

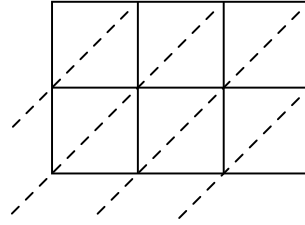
1) $555 \times 89 =$



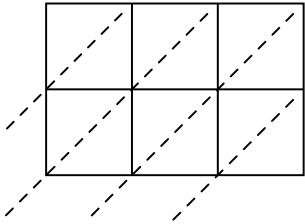
2) $759 \times 44 =$



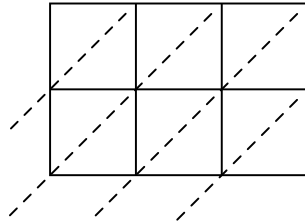
3) $118 \times 27 =$



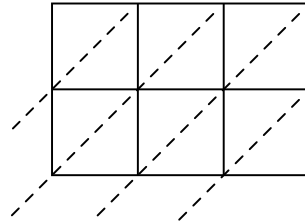
4) $779 \times 10 =$



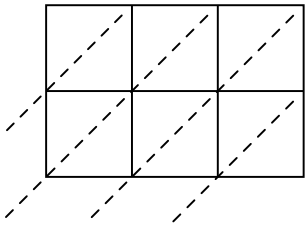
5) $956 \times 15 =$



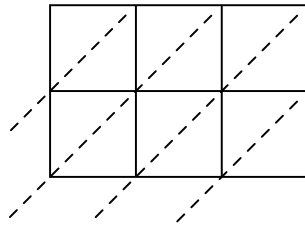
6) $219 \times 64 =$



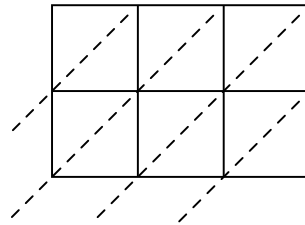
7) $208 \times 14 =$



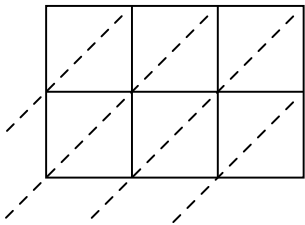
8) $804 \times 72 =$



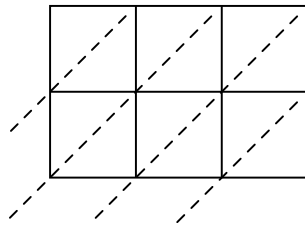
9) $955 \times 15 =$



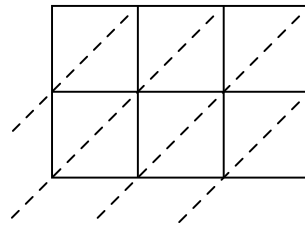
10) $217 \times 90 =$



11) $236 \times 67 =$



12) $377 \times 27 =$

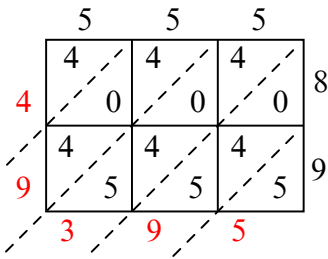


- 1. _____
- 2. _____
- 3. _____
- 4. _____
- 5. _____
- 6. _____
- 7. _____
- 8. _____
- 9. _____
- 10. _____
- 11. _____
- 12. _____

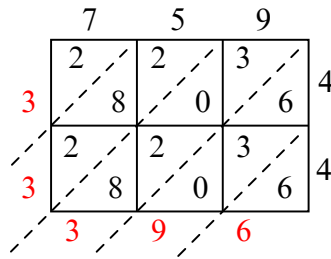


Используйте пространственную решетку для умножения, чтобы решить задачу.

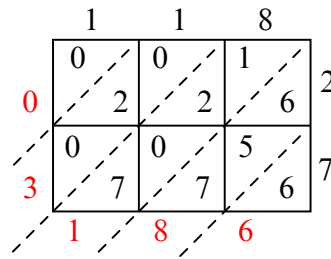
1) $555 \times 89 =$



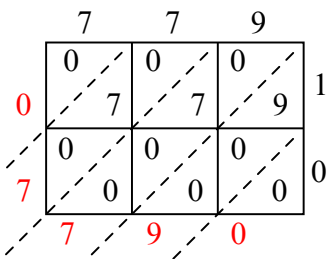
2) $759 \times 44 =$



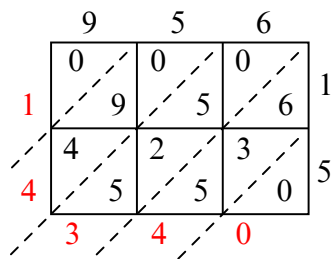
3) $118 \times 27 =$



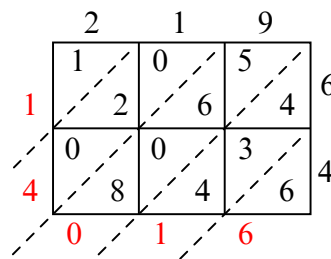
4) $779 \times 10 =$



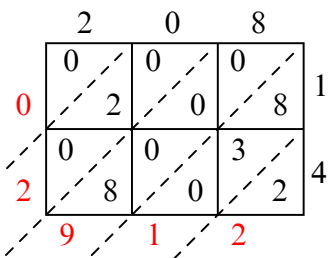
5) $956 \times 15 =$



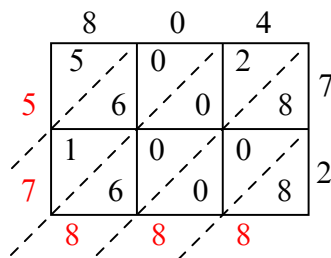
6) $219 \times 64 =$



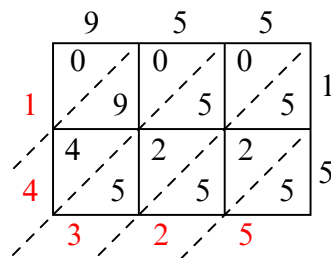
7) $208 \times 14 =$



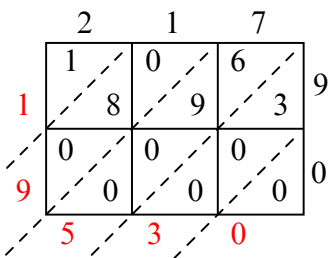
8) $804 \times 72 =$



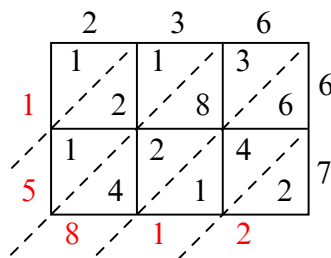
9) $955 \times 15 =$



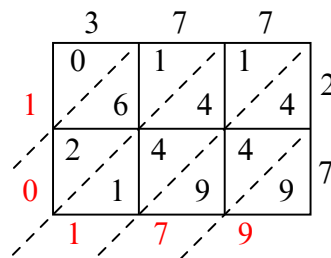
10) $217 \times 90 =$



11) $236 \times 67 =$



12) $377 \times 27 =$



Отвeты

1. 49 395

2. 33 396

3. 3 186

4. 7 790

5. 14 340

6. 14 016

7. 2 912

8. 57 888

9. 14 325

10. 19 530

11. 15 812

12. 10 179