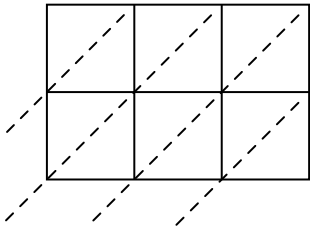


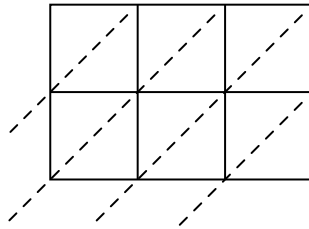


Используйте пространственную решетку для умножения, чтобы решить задачу.

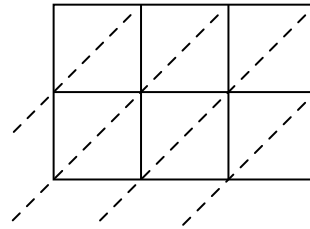
1) $432 \times 91 =$



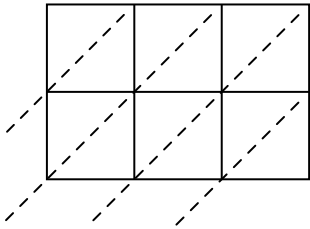
2) $441 \times 50 =$



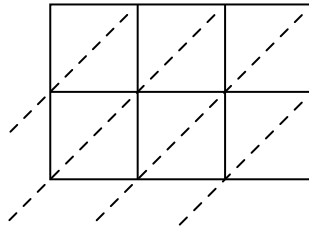
3) $949 \times 68 =$



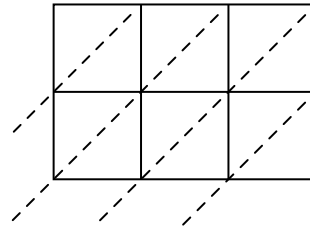
4) $504 \times 69 =$



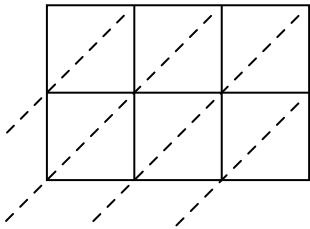
5) $551 \times 52 =$



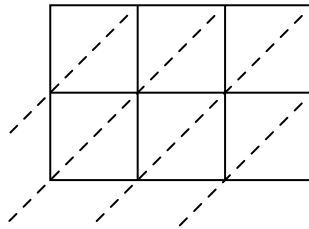
6) $707 \times 72 =$



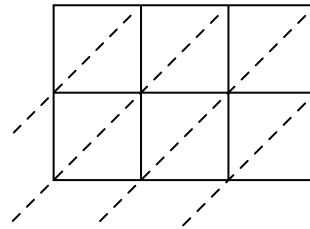
7) $334 \times 31 =$



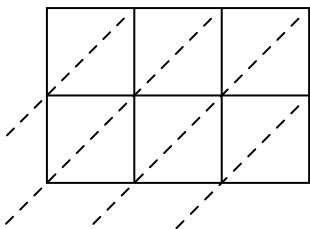
8) $119 \times 22 =$



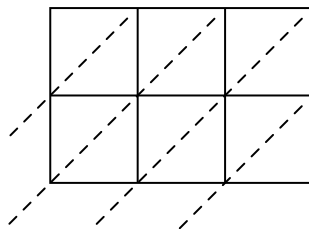
9) $945 \times 33 =$



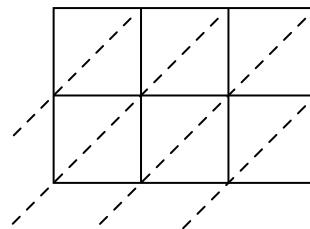
10) $965 \times 17 =$



11) $780 \times 46 =$



12) $515 \times 21 =$



Ответы

1. _____

2. _____

3. _____

4. _____

5. _____

6. _____

7. _____

8. _____

9. _____

10. _____

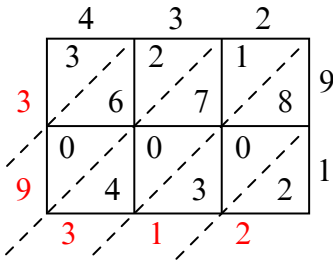
11. _____

12. _____

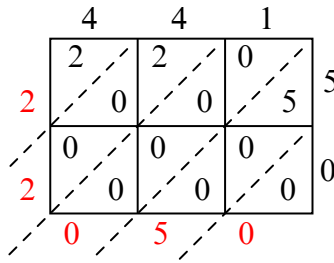


Используйте пространственную решетку для умножения, чтобы решить задачу.

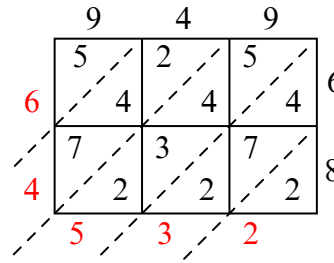
1) $432 \times 91 =$



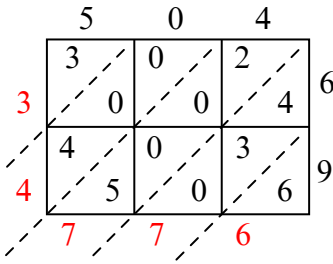
2) $441 \times 50 =$



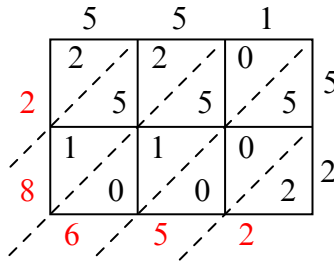
3) $949 \times 68 =$



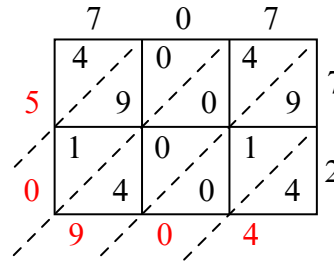
4) $504 \times 69 =$



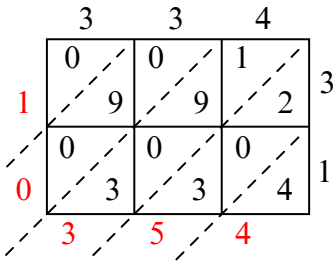
5) $551 \times 52 =$



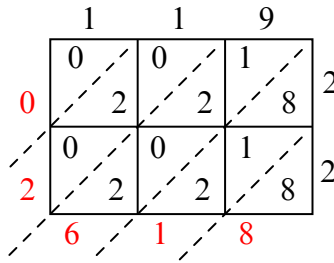
6) $707 \times 72 =$



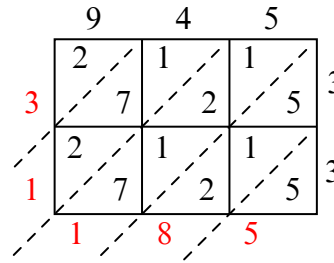
7) $334 \times 31 =$



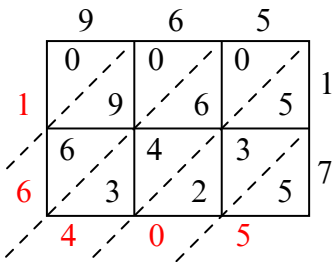
8) $119 \times 22 =$



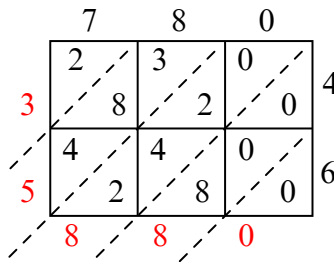
9) $945 \times 33 =$



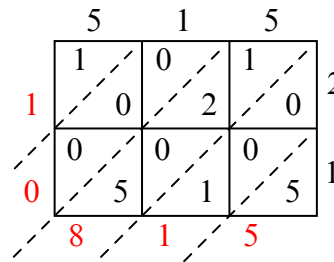
10) $965 \times 17 =$



11) $780 \times 46 =$



12) $515 \times 21 =$



Ответы

1. 39 312

2. 22 050

3. 64 532

4. 34 776

5. 28 652

6. 50 904

7. 10 354

8. 2 618

9. 31 185

10. 16 405

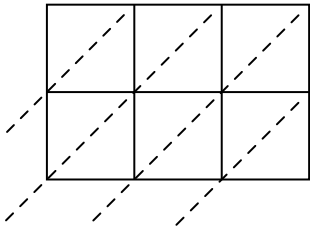
11. 35 880

12. 10 815

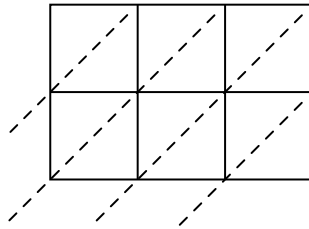


Используйте пространственную решетку для умножения, чтобы решить задачу.

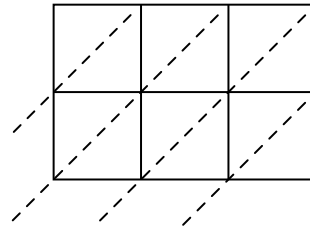
1) $376 \times 20 =$



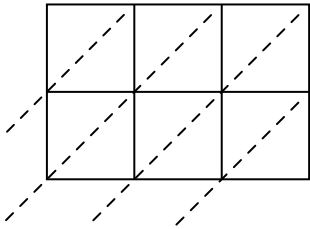
2) $578 \times 70 =$



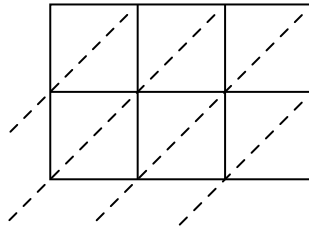
3) $775 \times 99 =$



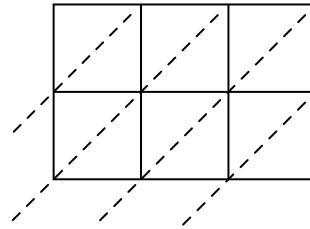
4) $332 \times 11 =$



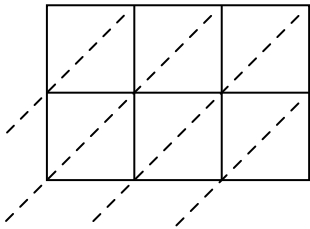
5) $835 \times 80 =$



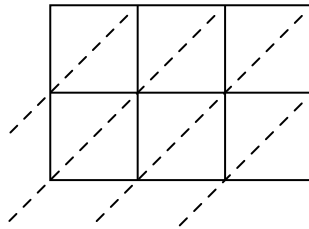
6) $465 \times 22 =$



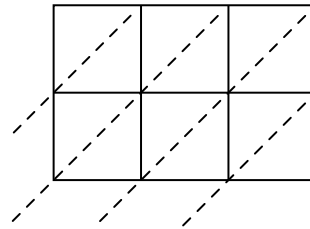
7) $977 \times 61 =$



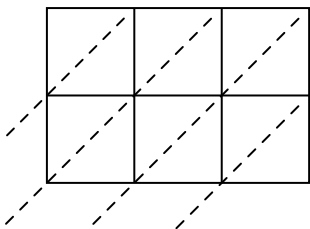
8) $272 \times 89 =$



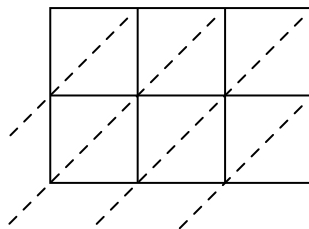
9) $274 \times 97 =$



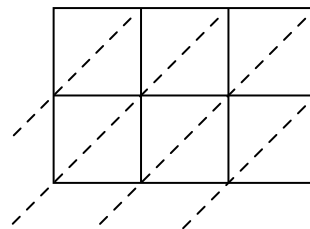
10) $401 \times 62 =$



11) $947 \times 14 =$



12) $149 \times 16 =$



Ответы

1. _____

2. _____

3. _____

4. _____

5. _____

6. _____

7. _____

8. _____

9. _____

10. _____

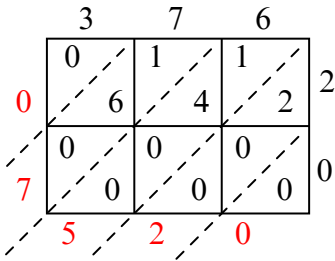
11. _____

12. _____

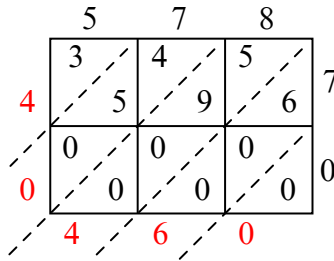


Используйте пространственную решетку для умножения, чтобы решить задачу.

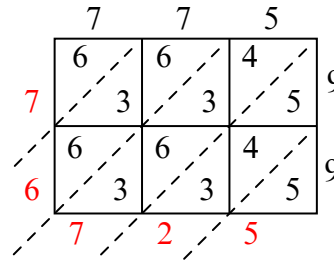
1) $376 \times 20 =$



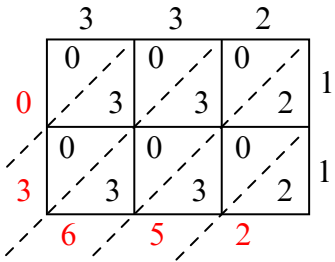
2) $578 \times 70 =$



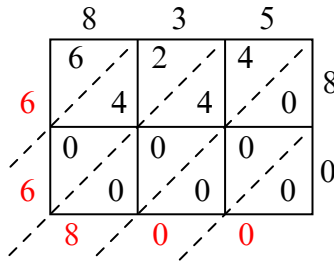
3) $775 \times 99 =$



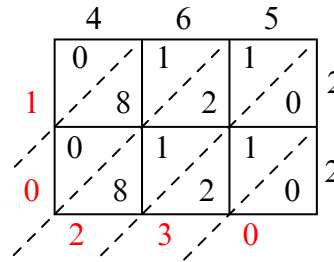
4) $332 \times 11 =$



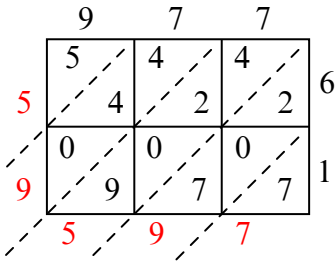
5) $835 \times 80 =$



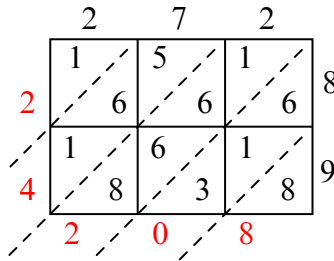
6) $465 \times 22 =$



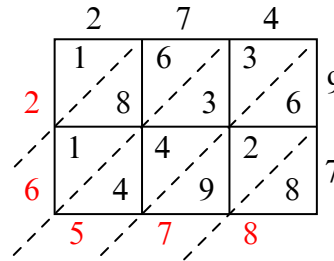
7) $977 \times 61 =$



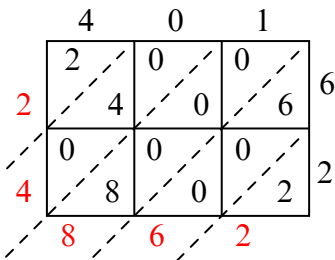
8) $272 \times 89 =$



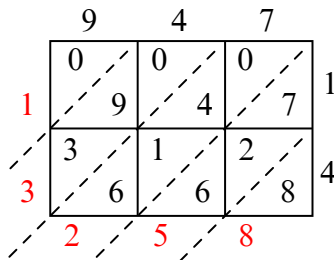
9) $274 \times 97 =$



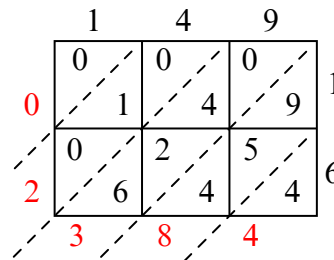
10) $401 \times 62 =$



11) $947 \times 14 =$



12) $149 \times 16 =$



Ответы

1. 7 520

2. 40 460

3. 76 725

4. 3 652

5. 66 800

6. 10 230

7. 59 597

8. 24 208

9. 26 578

10. 24 862

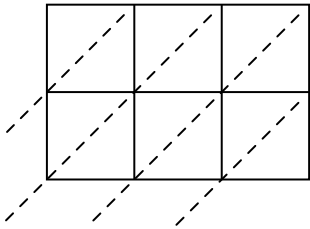
11. 13 258

12. 2 384

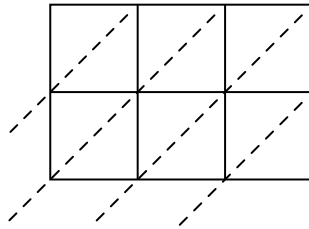


Используйте пространственную решетку для умножения, чтобы решить задачу.

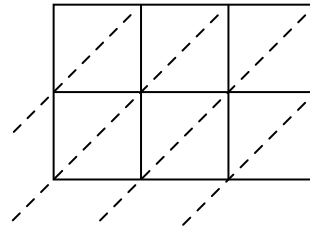
1) $781 \times 37 =$



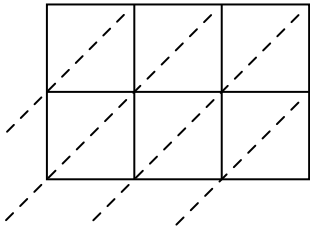
2) $200 \times 93 =$



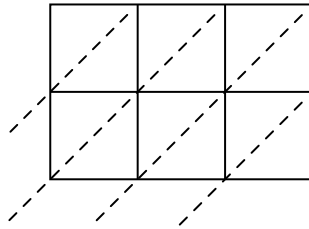
3) $435 \times 57 =$



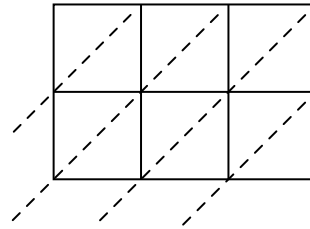
4) $539 \times 60 =$



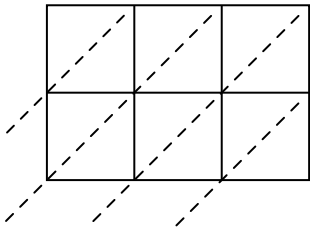
5) $214 \times 87 =$



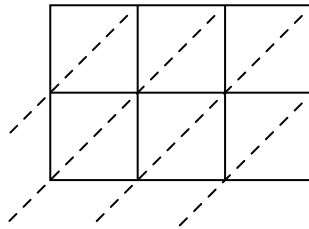
6) $483 \times 37 =$



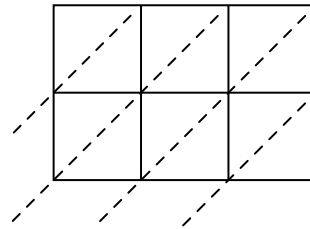
7) $765 \times 68 =$



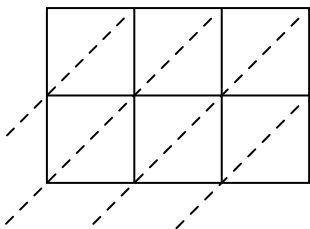
8) $453 \times 30 =$



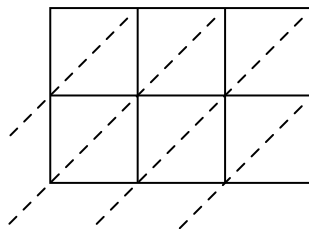
9) $485 \times 76 =$



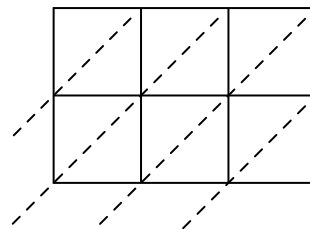
10) $421 \times 95 =$



11) $920 \times 53 =$



12) $810 \times 59 =$



Ответы

1. _____

2. _____

3. _____

4. _____

5. _____

6. _____

7. _____

8. _____

9. _____

10. _____

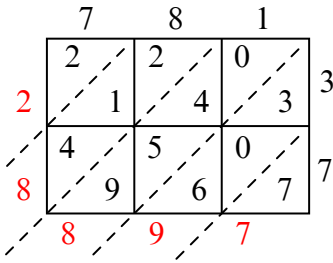
11. _____

12. _____

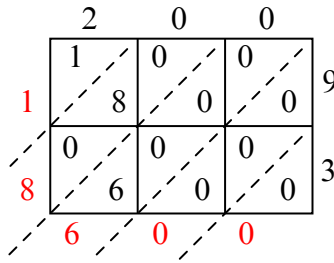


Используйте пространственную решетку для умножения, чтобы решить задачу.

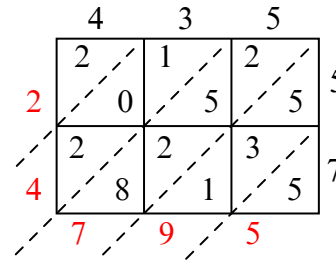
1) $781 \times 37 =$



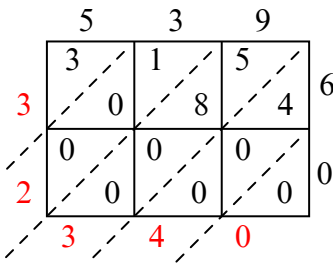
2) $200 \times 93 =$



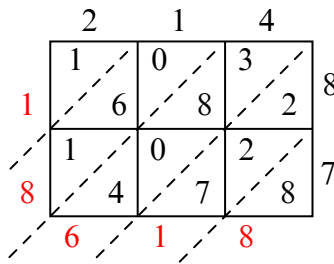
3) $435 \times 57 =$



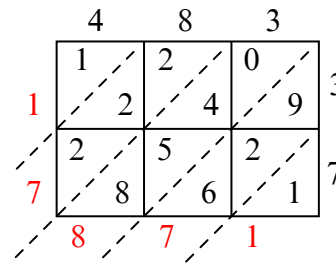
4) $539 \times 60 =$



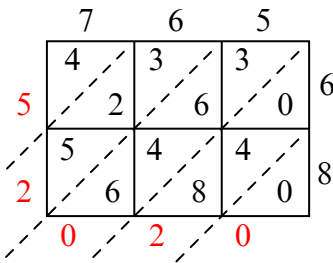
5) $214 \times 87 =$



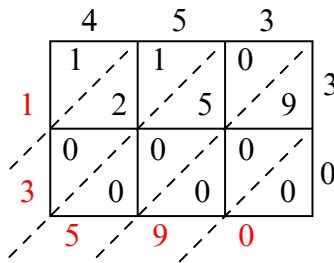
6) $483 \times 37 =$



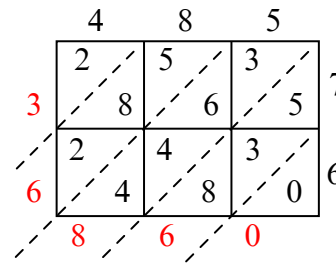
7) $765 \times 68 =$



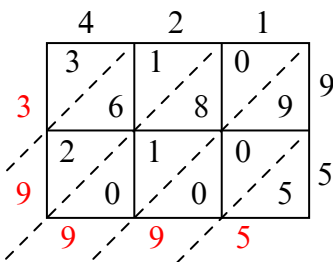
8) $453 \times 30 =$



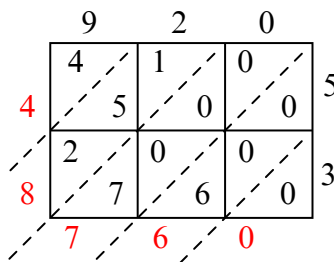
9) $485 \times 76 =$



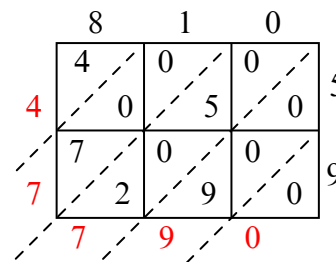
10) $421 \times 95 =$



11) $920 \times 53 =$



12) $810 \times 59 =$



Ответы

1. 28 897

2. 18 600

3. 24 795

4. 32 340

5. 18 618

6. 17 871

7. 52 020

8. 13 590

9. 36 860

10. 39 995

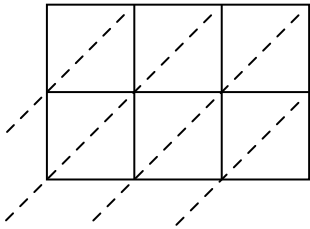
11. 48 760

12. 47 790

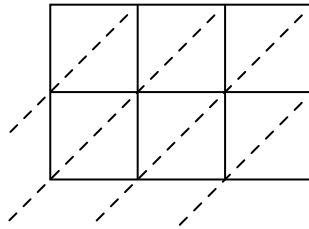


Используйте пространственную решетку для умножения, чтобы решить задачу.

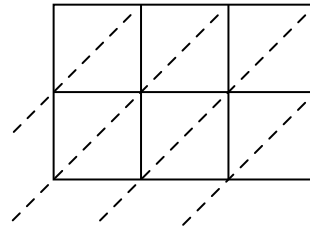
1) $552 \times 14 =$



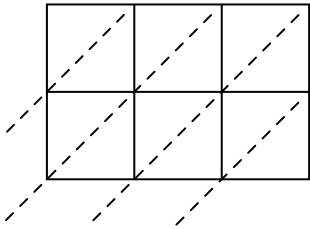
2) $606 \times 39 =$



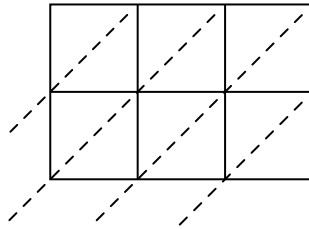
3) $242 \times 22 =$



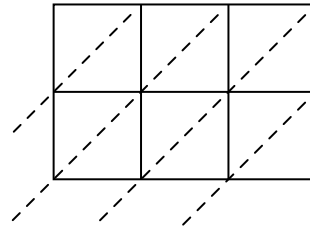
4) $679 \times 29 =$



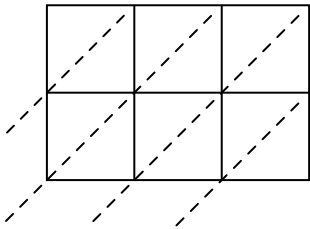
5) $409 \times 91 =$



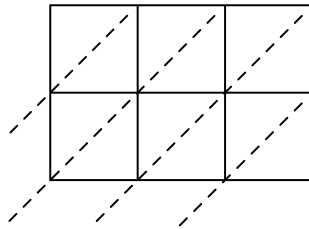
6) $371 \times 91 =$



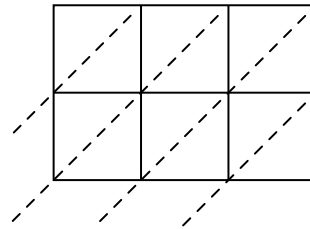
7) $124 \times 97 =$



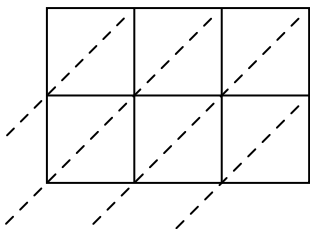
8) $327 \times 76 =$



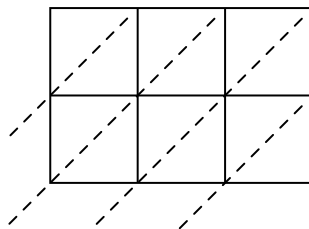
9) $709 \times 47 =$



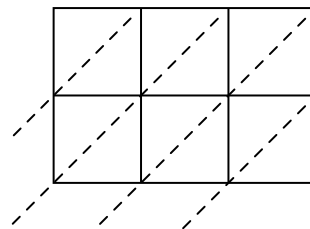
10) $746 \times 60 =$



11) $337 \times 84 =$



12) $475 \times 74 =$



Ответы

1. _____

2. _____

3. _____

4. _____

5. _____

6. _____

7. _____

8. _____

9. _____

10. _____

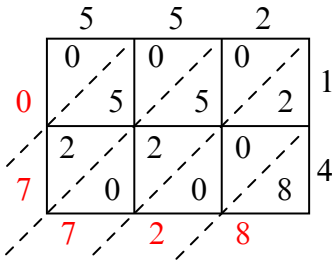
11. _____

12. _____

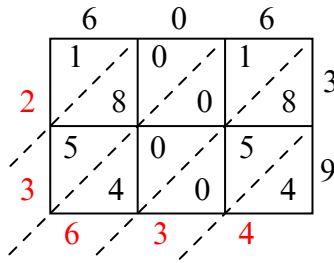


Используйте пространственную решетку для умножения, чтобы решить задачу.

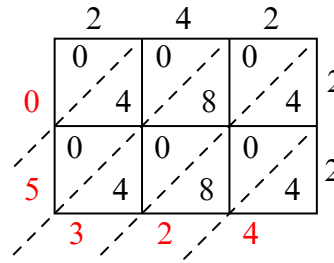
1) $552 \times 14 =$



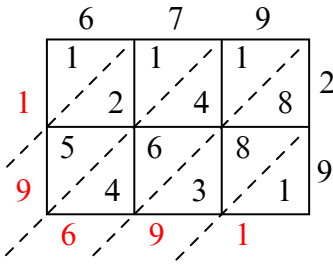
2) $606 \times 39 =$



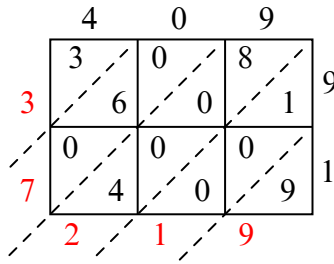
3) $242 \times 22 =$



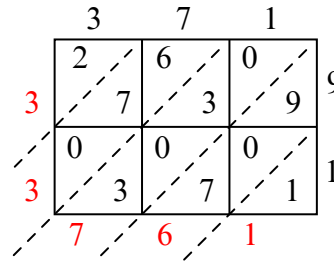
4) $679 \times 29 =$



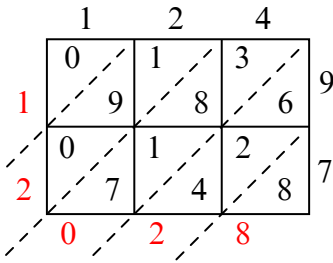
5) $409 \times 91 =$



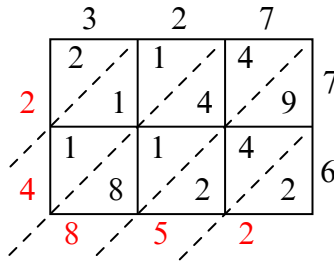
6) $371 \times 91 =$



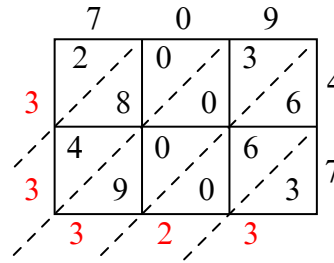
7) $124 \times 97 =$



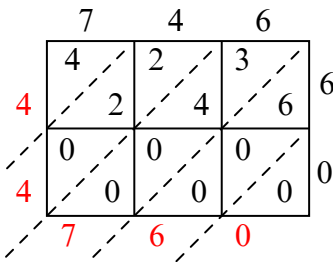
8) $327 \times 76 =$



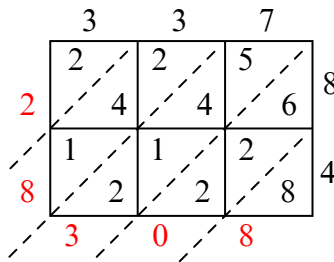
9) $709 \times 47 =$



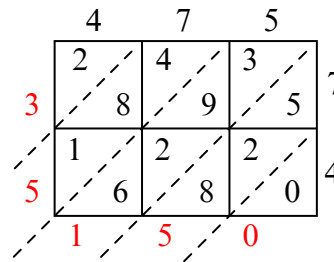
10) $746 \times 60 =$



11) $337 \times 84 =$



12) $475 \times 74 =$



Ответы

1. 7 728

2. 23 634

3. 5 324

4. 19 691

5. 37 219

6. 33 761

7. 12 028

8. 24 852

9. 33 323

10. 44 760

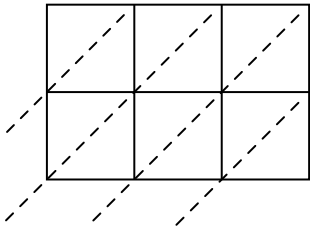
11. 28 308

12. 35 150

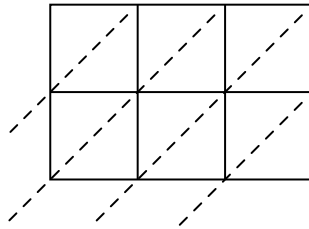


Используйте пространственную решетку для умножения, чтобы решить задачу.

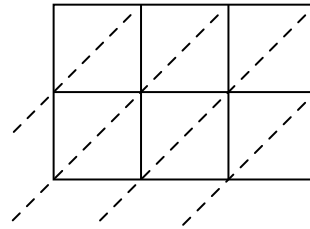
1) $143 \times 35 =$



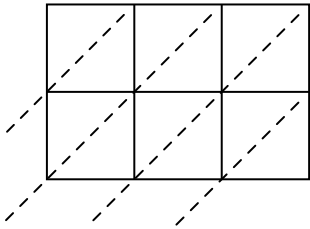
2) $815 \times 17 =$



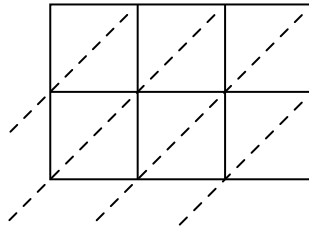
3) $706 \times 60 =$



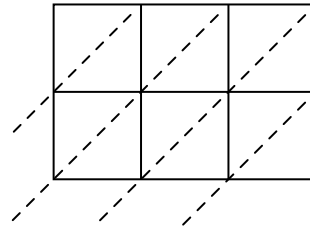
4) $277 \times 54 =$



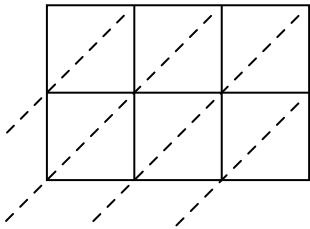
5) $185 \times 54 =$



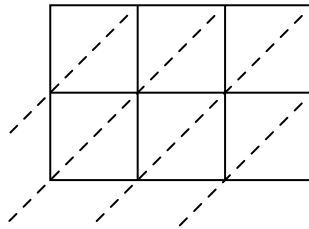
6) $159 \times 79 =$



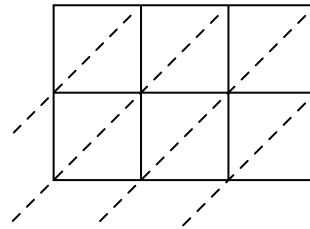
7) $576 \times 91 =$



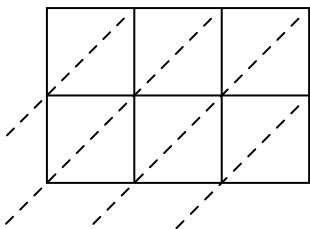
8) $433 \times 58 =$



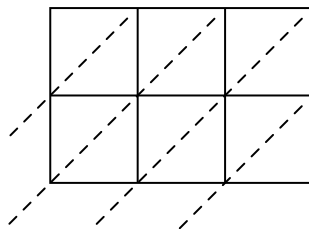
9) $726 \times 24 =$



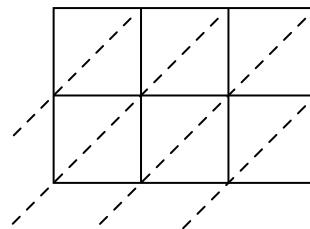
10) $621 \times 87 =$



11) $832 \times 17 =$



12) $695 \times 42 =$



Ответы

1. _____

2. _____

3. _____

4. _____

5. _____

6. _____

7. _____

8. _____

9. _____

10. _____

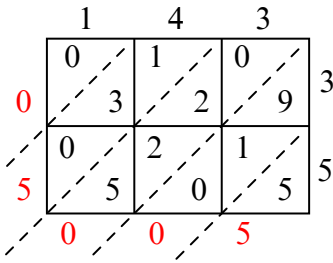
11. _____

12. _____

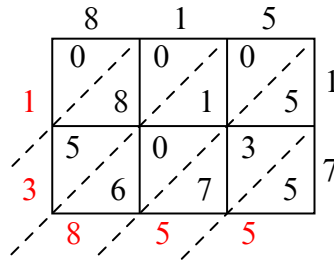


Используйте пространственную решетку для умножения, чтобы решить задачу.

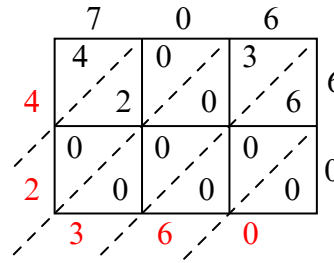
1) $143 \times 35 =$



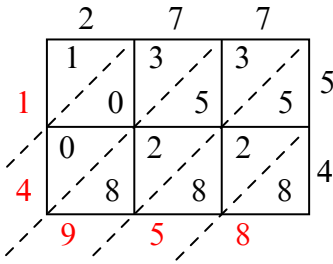
2) $815 \times 17 =$



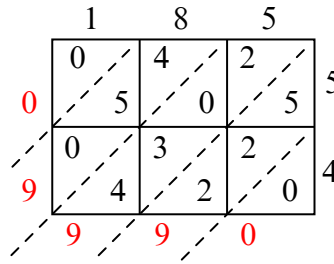
3) $706 \times 60 =$



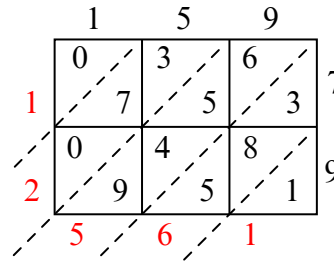
4) $277 \times 54 =$



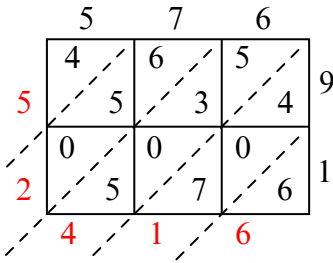
5) $185 \times 54 =$



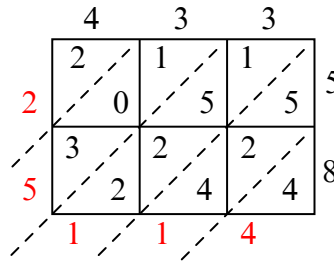
6) $159 \times 79 =$



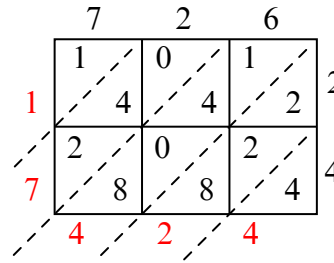
7) $576 \times 91 =$



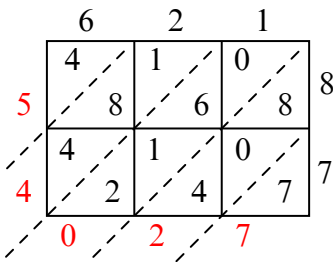
8) $433 \times 58 =$



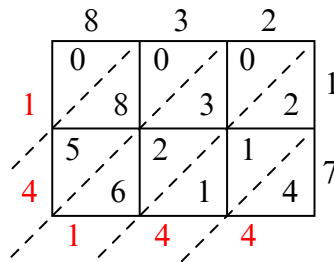
9) $726 \times 24 =$



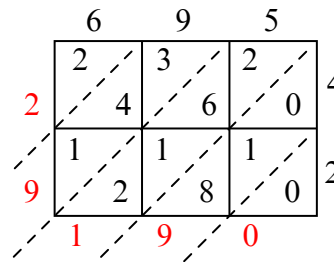
10) $621 \times 87 =$



11) $832 \times 17 =$



12) $695 \times 42 =$



Ответы

1. 5 005

2. 13 855

3. 42 360

4. 14 958

5. 9 990

6. 12 561

7. 52 416

8. 25 114

9. 17 424

10. 54 027

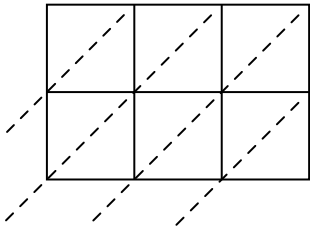
11. 14 144

12. 29 190

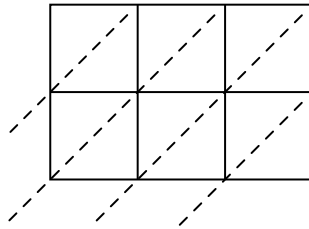


Используйте пространственную решетку для умножения, чтобы решить задачу.

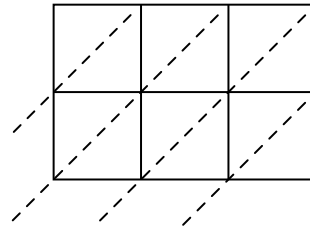
1) $880 \times 56 =$



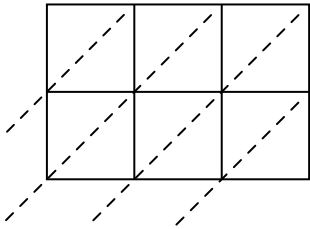
2) $493 \times 77 =$



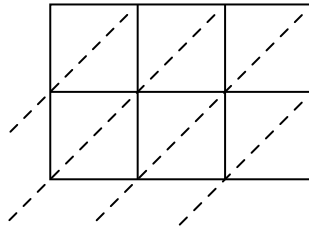
3) $959 \times 67 =$



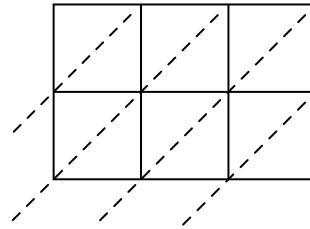
4) $855 \times 78 =$



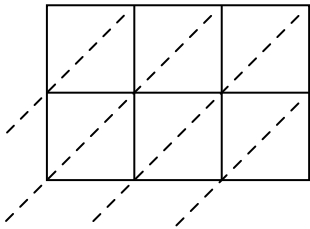
5) $980 \times 77 =$



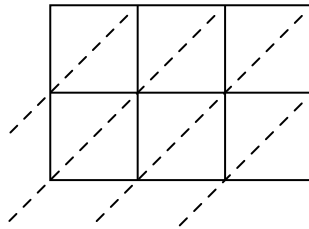
6) $527 \times 19 =$



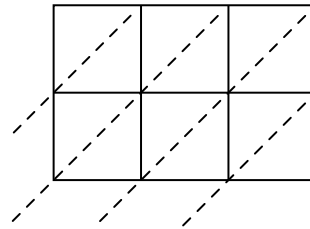
7) $465 \times 92 =$



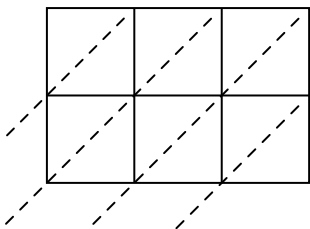
8) $606 \times 66 =$



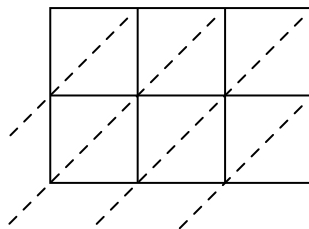
9) $285 \times 77 =$



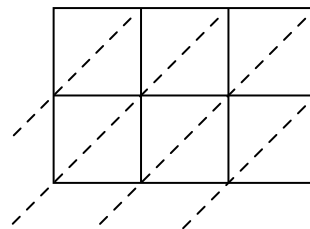
10) $837 \times 70 =$



11) $864 \times 40 =$



12) $518 \times 17 =$



Ответы

1. _____

2. _____

3. _____

4. _____

5. _____

6. _____

7. _____

8. _____

9. _____

10. _____

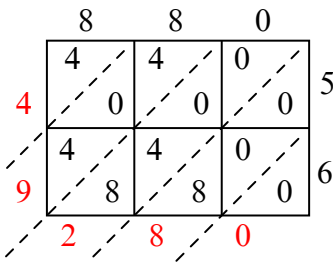
11. _____

12. _____

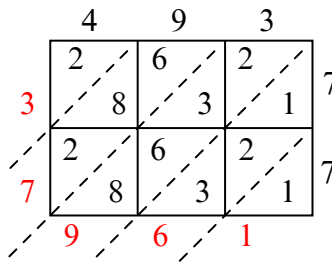


Используйте пространственную решетку для умножения, чтобы решить задачу.

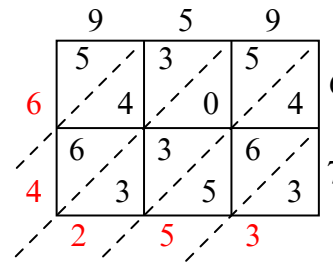
1) $880 \times 56 =$



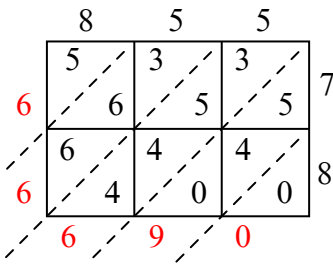
2) $493 \times 77 =$



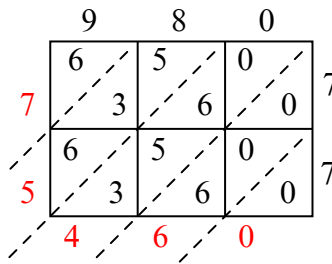
3) $959 \times 67 =$



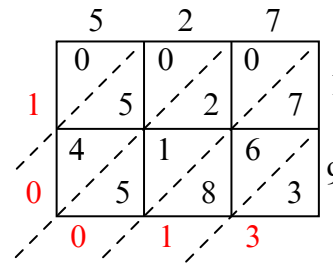
4) $855 \times 78 =$



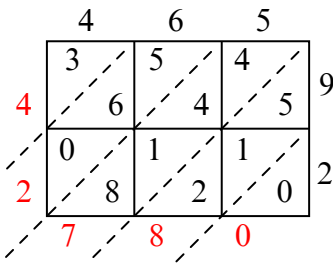
5) $980 \times 77 =$



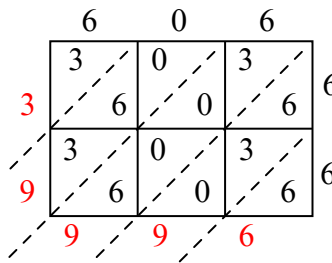
6) $527 \times 19 =$



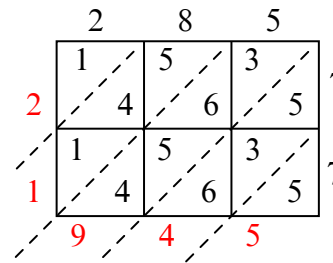
7) $465 \times 92 =$



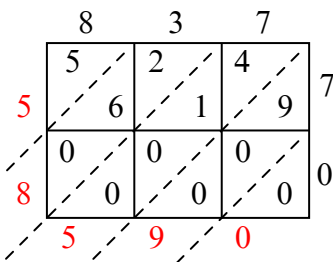
8) $606 \times 66 =$



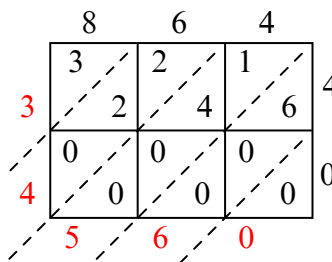
9) $285 \times 77 =$



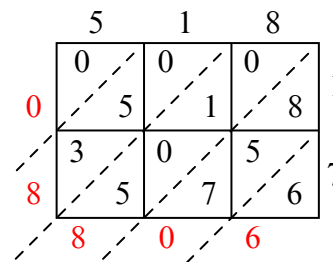
10) $837 \times 70 =$



11) $864 \times 40 =$



12) $518 \times 17 =$



Ответы

1. 49 280

2. 37 961

3. 64 253

4. 66 690

5. 75 460

6. 10 013

7. 42 780

8. 39 996

9. 21 945

10. 58 590

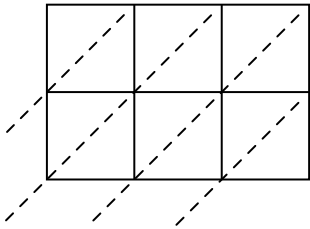
11. 34 560

12. 8 806

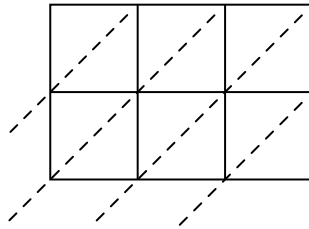


Используйте пространственную решетку для умножения, чтобы решить задачу.

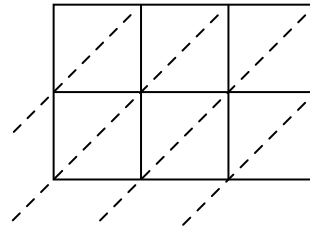
1) $685 \times 19 =$



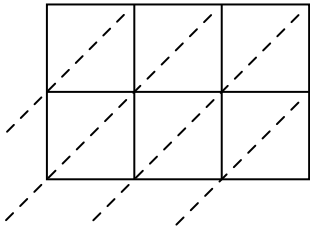
2) $177 \times 50 =$



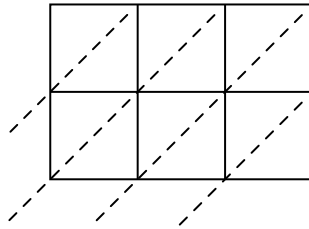
3) $779 \times 59 =$



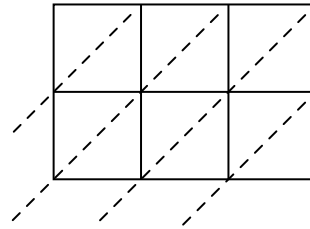
4) $758 \times 52 =$



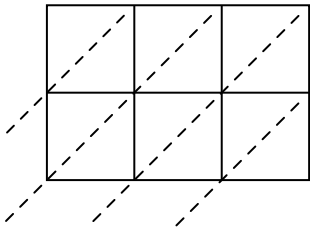
5) $829 \times 69 =$



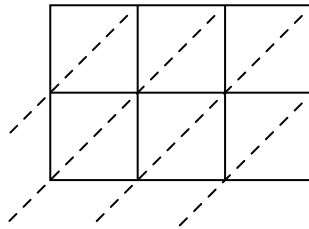
6) $326 \times 68 =$



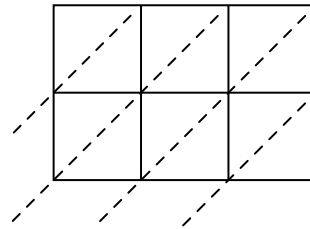
7) $582 \times 82 =$



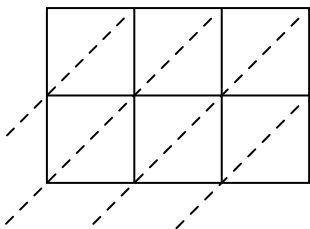
8) $201 \times 17 =$



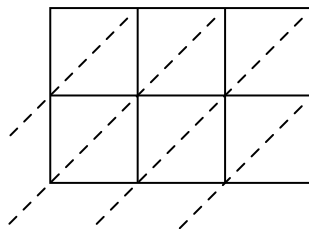
9) $234 \times 82 =$



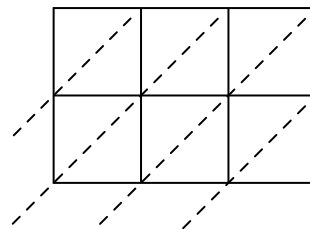
10) $356 \times 42 =$



11) $434 \times 11 =$



12) $311 \times 63 =$



Ответы

1. _____

2. _____

3. _____

4. _____

5. _____

6. _____

7. _____

8. _____

9. _____

10. _____

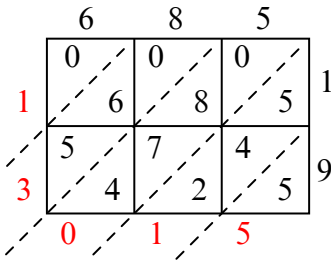
11. _____

12. _____

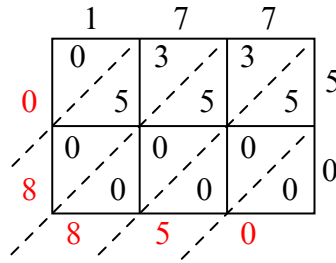


Используйте пространственную решетку для умножения, чтобы решить задачу.

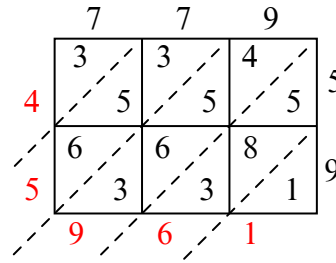
1) $685 \times 19 =$



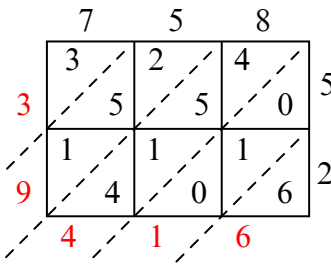
2) $177 \times 50 =$



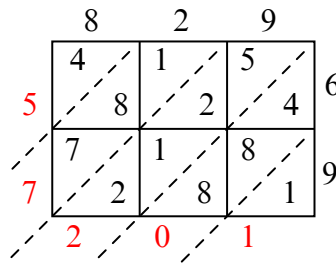
3) $779 \times 59 =$



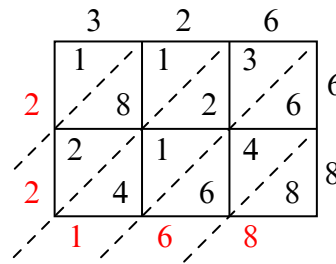
4) $758 \times 52 =$



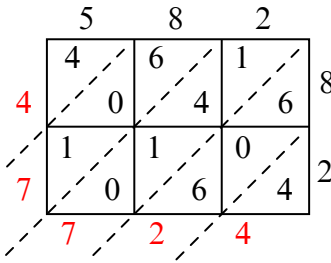
5) $829 \times 69 =$



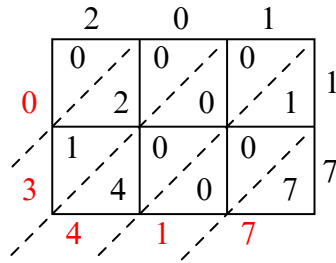
6) $326 \times 68 =$



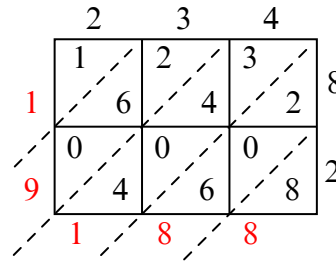
7) $582 \times 82 =$



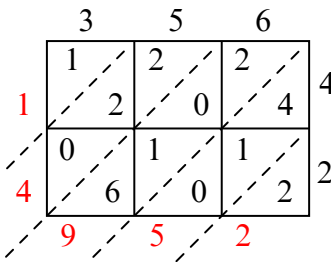
8) $201 \times 17 =$



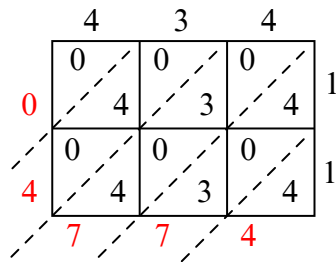
9) $234 \times 82 =$



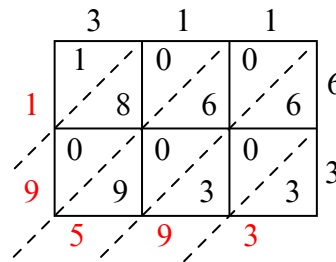
10) $356 \times 42 =$



11) $434 \times 11 =$



12) $311 \times 63 =$



Ответы

1. 13 015

2. 8 850

3. 45 961

4. 39 416

5. 57 201

6. 22 168

7. 47 724

8. 3 417

9. 19 188

10. 14 952

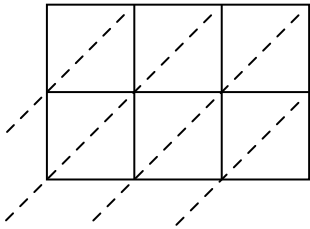
11. 4 774

12. 19 593

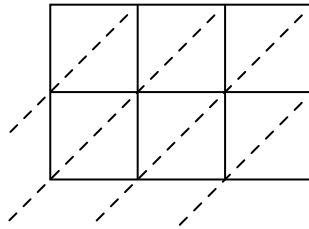


Используйте пространственную решетку для умножения, чтобы решить задачу.

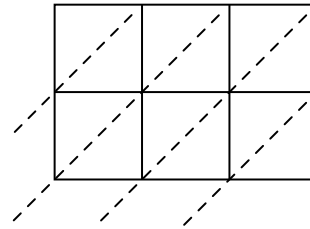
1) $602 \times 57 =$



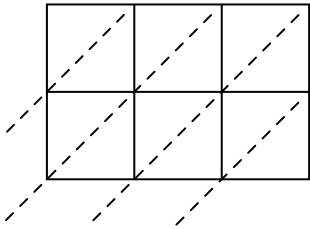
2) $602 \times 27 =$



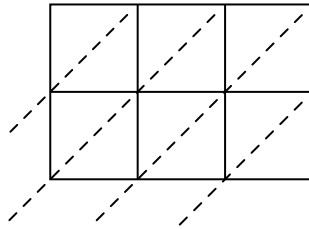
3) $816 \times 14 =$



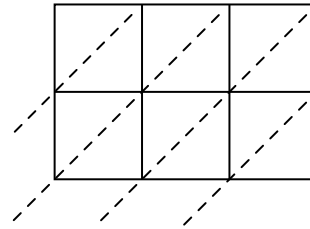
4) $777 \times 48 =$



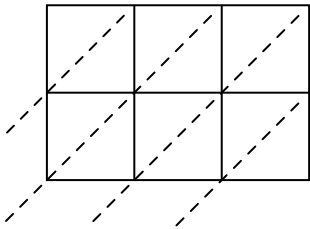
5) $888 \times 39 =$



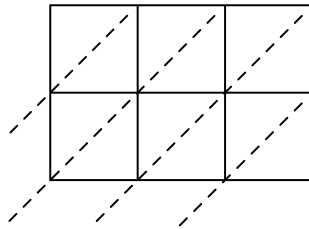
6) $401 \times 12 =$



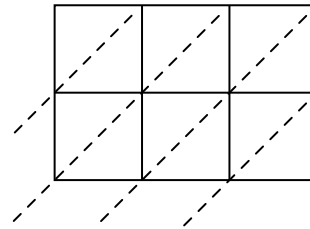
7) $790 \times 95 =$



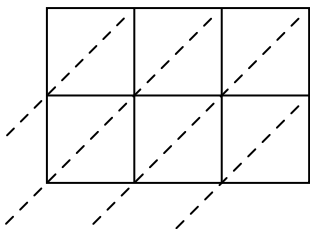
8) $123 \times 40 =$



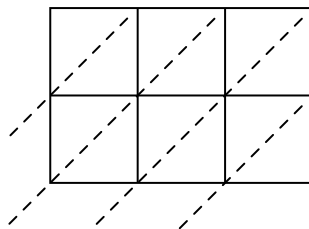
9) $943 \times 11 =$



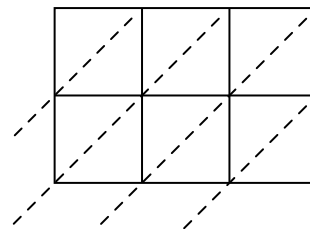
10) $138 \times 27 =$



11) $419 \times 21 =$



12) $193 \times 95 =$



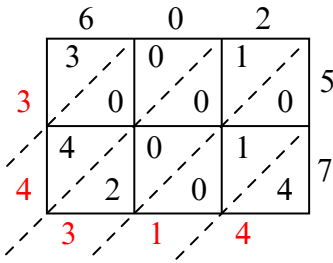
Ответы

1. _____
2. _____
3. _____
4. _____
5. _____
6. _____
7. _____
8. _____
9. _____
10. _____
11. _____
12. _____

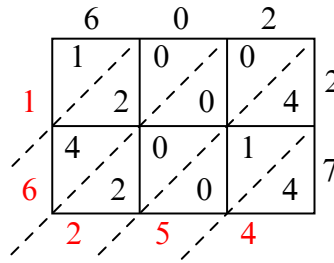


Используйте пространственную решетку для умножения, чтобы решить задачу.

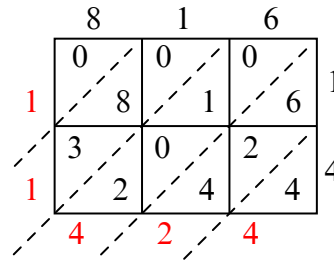
1) $602 \times 57 =$



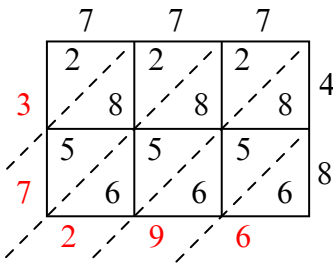
2) $602 \times 27 =$



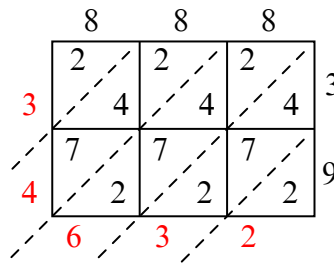
3) $816 \times 14 =$



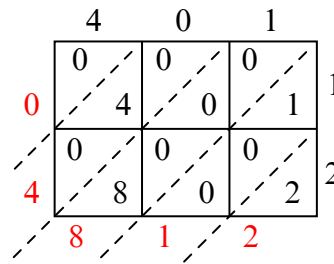
4) $777 \times 48 =$



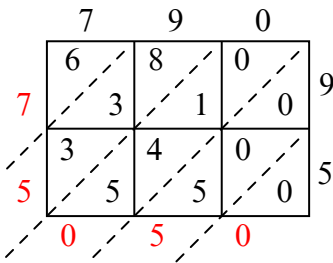
5) $888 \times 39 =$



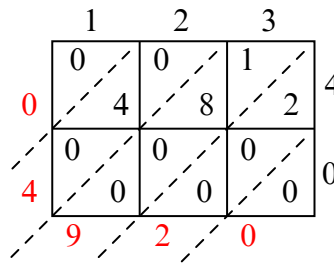
6) $401 \times 12 =$



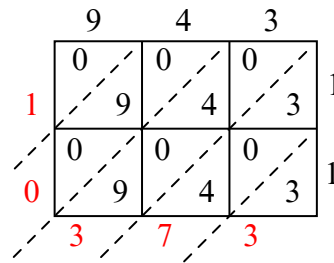
7) $790 \times 95 =$



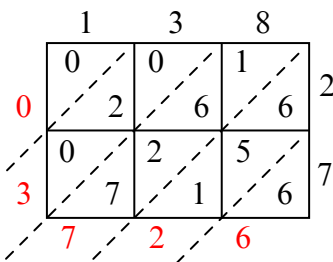
8) $123 \times 40 =$



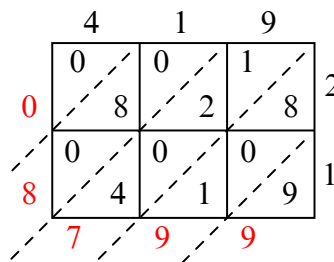
9) $943 \times 11 =$



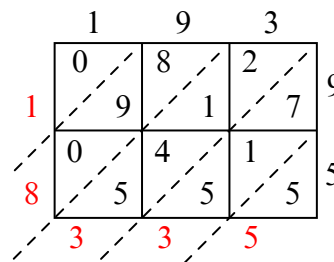
10) $138 \times 27 =$



11) $419 \times 21 =$



12) $193 \times 95 =$



Ответы

1. 34 314

2. 16 254

3. 11 424

4. 37 296

5. 34 632

6. 4 812

7. 75 050

8. 4 920

9. 10 373

10. 3 726

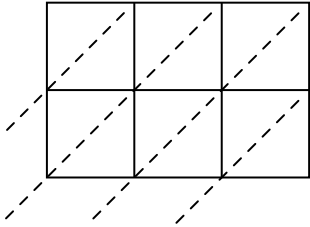
11. 8 799

12. 18 335

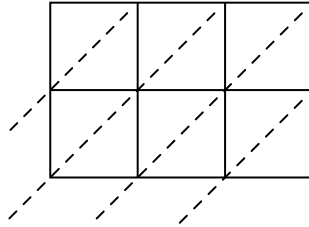


Используйте пространственную решетку для умножения, чтобы решить задачу.

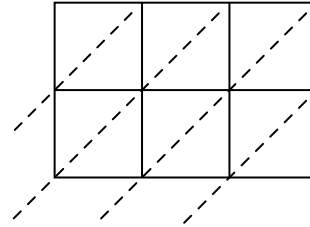
1) $522 \times 60 =$



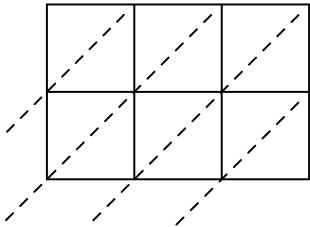
2) $226 \times 15 =$



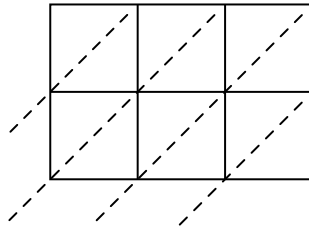
3) $118 \times 77 =$



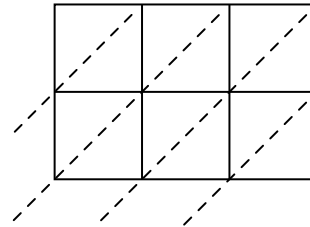
4) $774 \times 13 =$



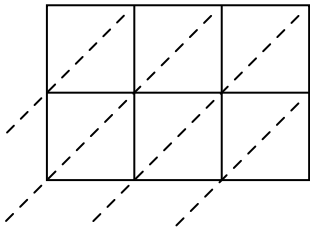
5) $262 \times 23 =$



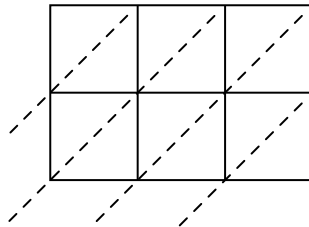
6) $224 \times 95 =$



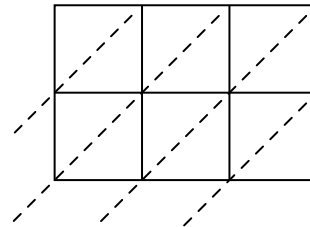
7) $248 \times 64 =$



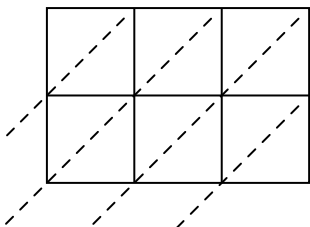
8) $347 \times 46 =$



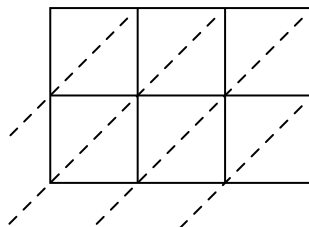
9) $725 \times 50 =$



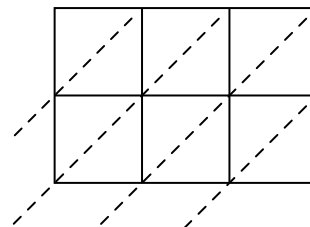
10) $665 \times 53 =$



11) $990 \times 58 =$



12) $250 \times 81 =$



Ответы

1. _____

2. _____

3. _____

4. _____

5. _____

6. _____

7. _____

8. _____

9. _____

10. _____

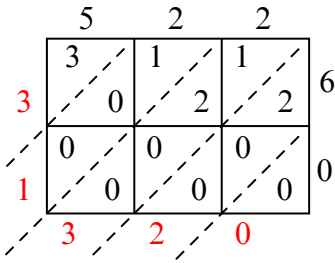
11. _____

12. _____

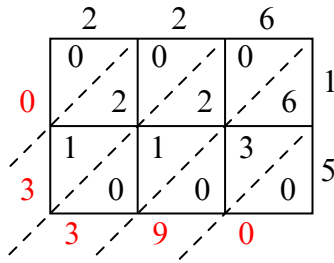


Используйте пространственную решетку для умножения, чтобы решить задачу.

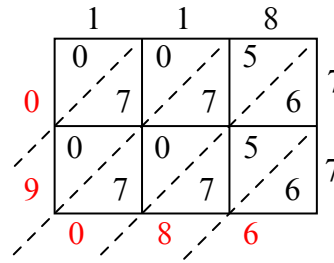
1) $522 \times 60 =$



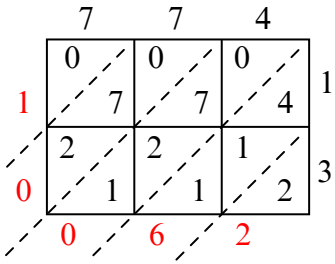
2) $226 \times 15 =$



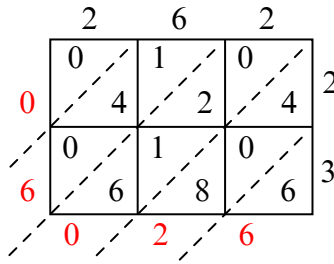
3) $118 \times 77 =$



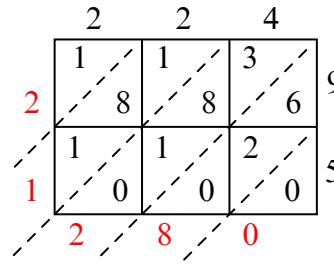
4) $774 \times 13 =$



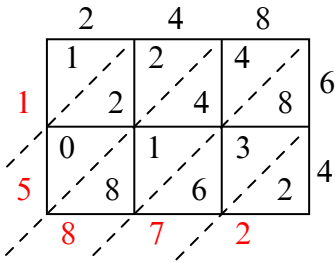
5) $262 \times 23 =$



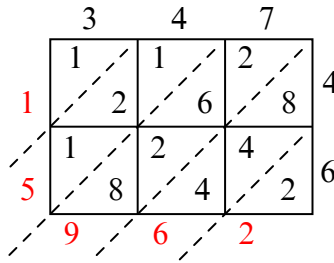
6) $224 \times 95 =$



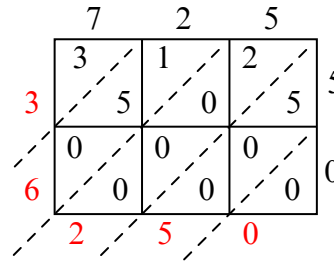
7) $248 \times 64 =$



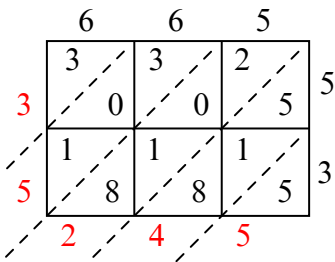
8) $347 \times 46 =$



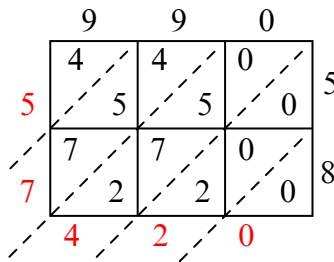
9) $725 \times 50 =$



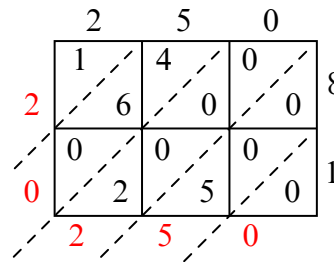
10) $665 \times 53 =$



11) $990 \times 58 =$



12) $250 \times 81 =$



Ответы

1. 31 320

2. 3 390

3. 9 086

4. 10 062

5. 6 026

6. 21 280

7. 15 872

8. 15 962

9. 36 250

10. 35 245

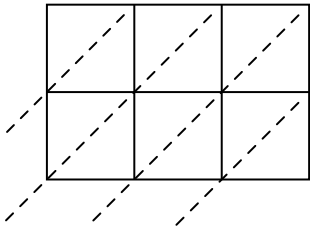
11. 57 420

12. 20 250

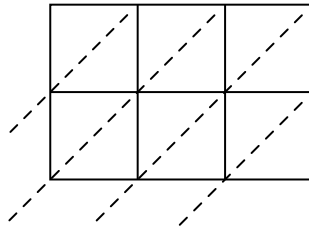


Используйте пространственную решетку для умножения, чтобы решить задачу.

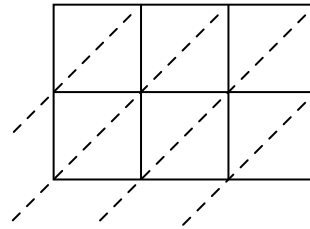
1) $308 \times 65 =$



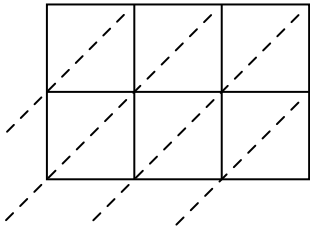
2) $850 \times 52 =$



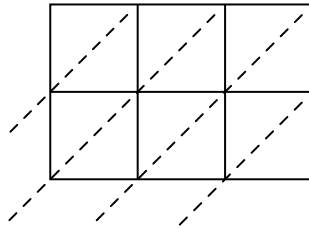
3) $855 \times 43 =$



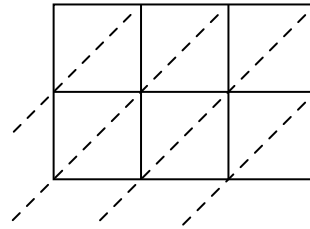
4) $809 \times 56 =$



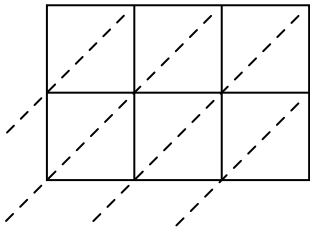
5) $724 \times 25 =$



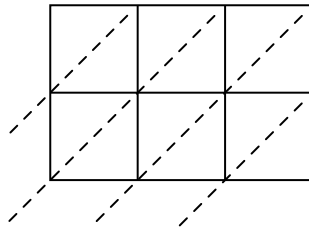
6) $808 \times 51 =$



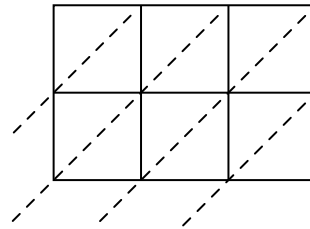
7) $339 \times 18 =$



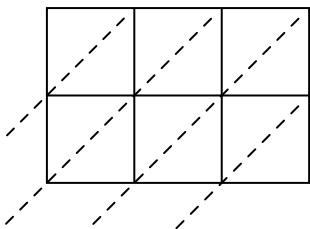
8) $144 \times 22 =$



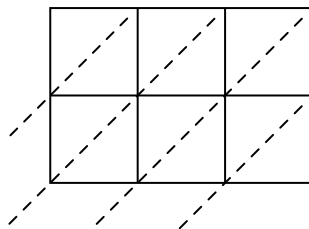
9) $571 \times 77 =$



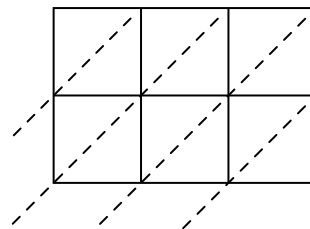
10) $365 \times 91 =$



11) $942 \times 29 =$



12) $766 \times 64 =$



Ответы

1. _____

2. _____

3. _____

4. _____

5. _____

6. _____

7. _____

8. _____

9. _____

10. _____

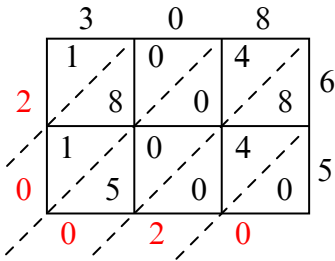
11. _____

12. _____

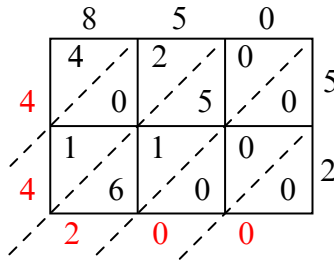


Используйте пространственную решетку для умножения, чтобы решить задачу.

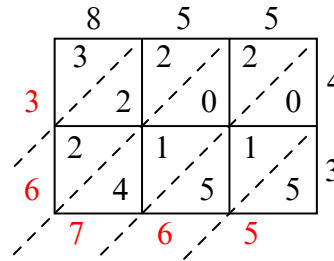
1) $308 \times 65 =$



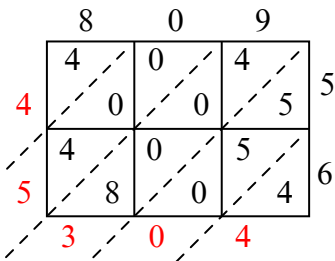
2) $850 \times 52 =$



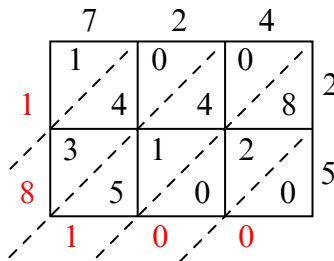
3) $855 \times 43 =$



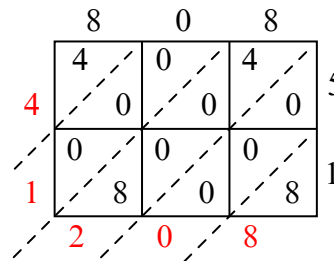
4) $809 \times 56 =$



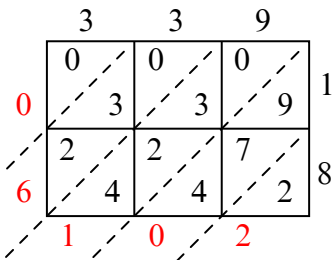
5) $724 \times 25 =$



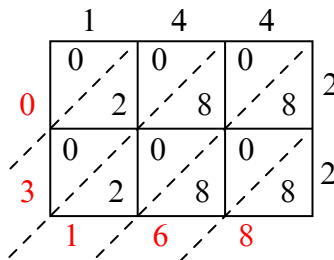
6) $808 \times 51 =$



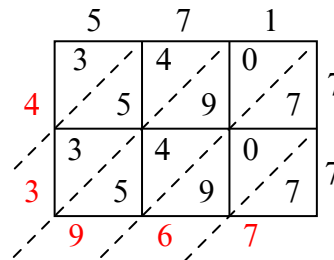
7) $339 \times 18 =$



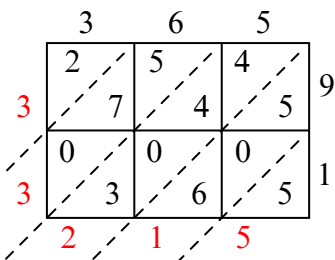
8) $144 \times 22 =$



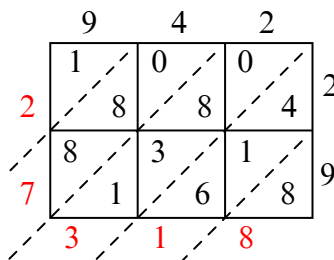
9) $571 \times 77 =$



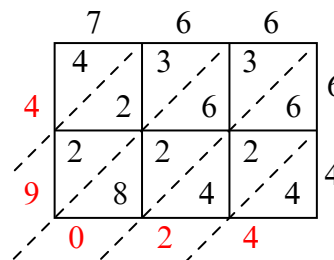
10) $365 \times 91 =$



11) $942 \times 29 =$



12) $766 \times 64 =$



Ответы

1. 20 020

2. 44 200

3. 36 765

4. 45 304

5. 18 100

6. 41 208

7. 6 102

8. 3 168

9. 43 967

10. 33 215

11. 27 318

12. 49 024