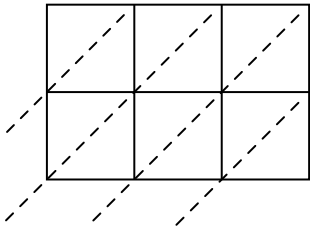


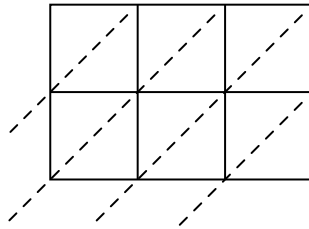


Используйте пространственную решетку для умножения, чтобы решить задачу.

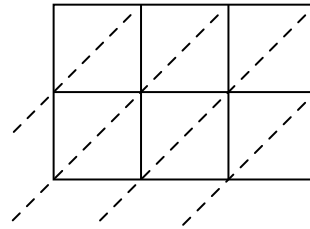
1) $522 \times 60 =$



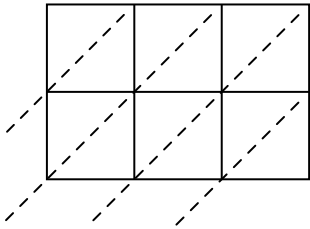
2) $226 \times 15 =$



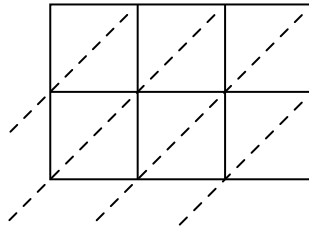
3) $118 \times 77 =$



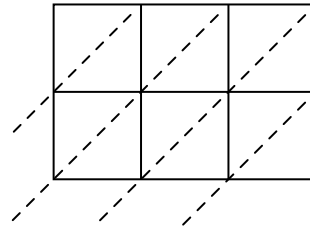
4) $774 \times 13 =$



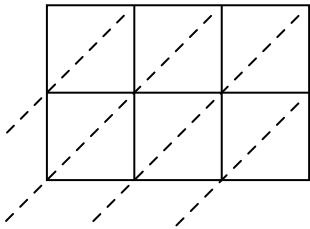
5) $262 \times 23 =$



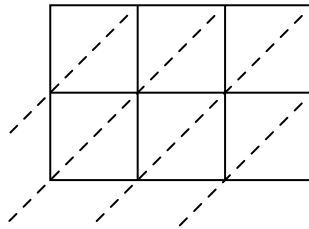
6) $224 \times 95 =$



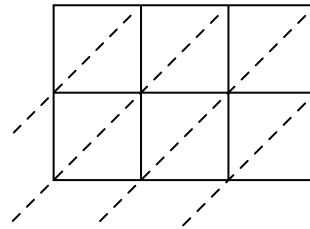
7) $248 \times 64 =$



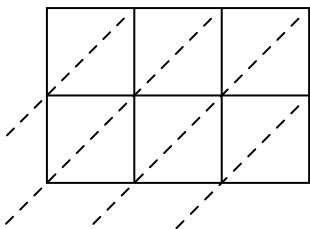
8) $347 \times 46 =$



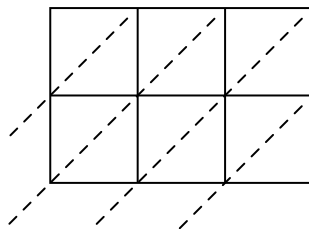
9) $725 \times 50 =$



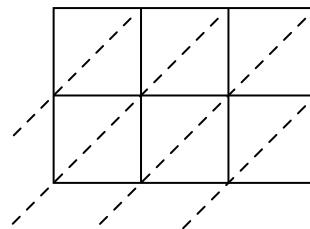
10) $665 \times 53 =$



11) $990 \times 58 =$



12) $250 \times 81 =$



Ответы

1. _____

2. _____

3. _____

4. _____

5. _____

6. _____

7. _____

8. _____

9. _____

10. _____

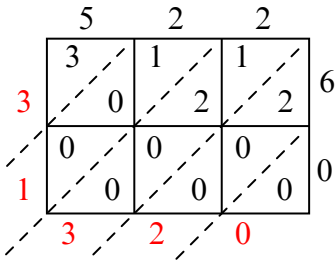
11. _____

12. _____

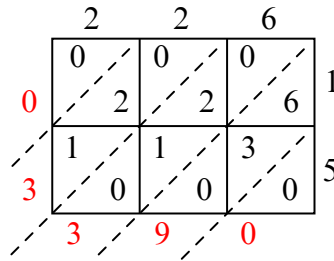


Используйте пространственную решетку для умножения, чтобы решить задачу.

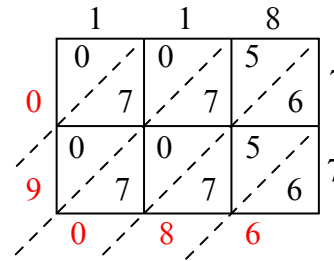
1) $522 \times 60 =$



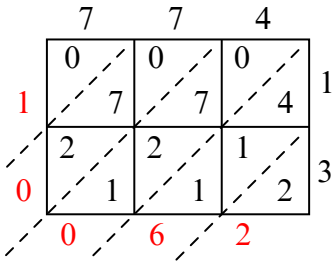
2) $226 \times 15 =$



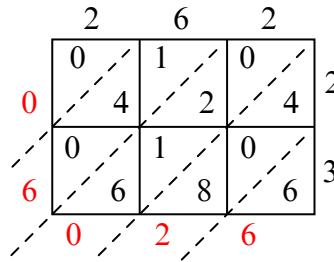
3) $118 \times 77 =$



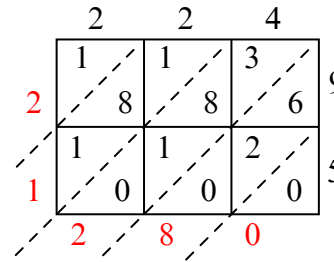
4) $774 \times 13 =$



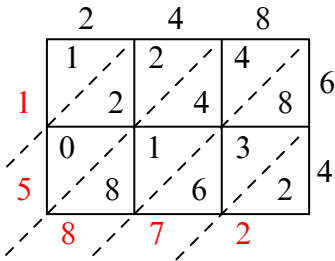
5) $262 \times 23 =$



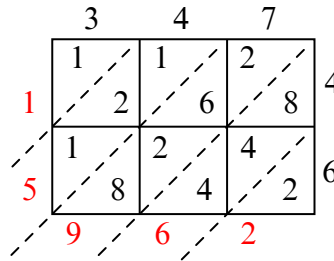
6) $224 \times 95 =$



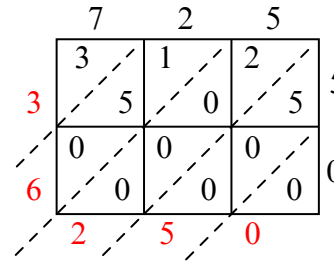
7) $248 \times 64 =$



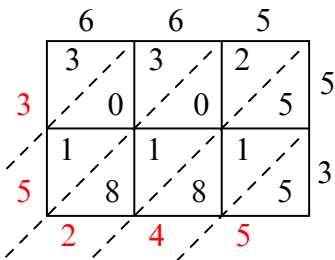
8) $347 \times 46 =$



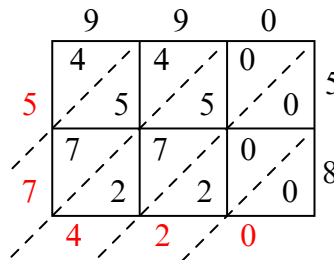
9) $725 \times 50 =$



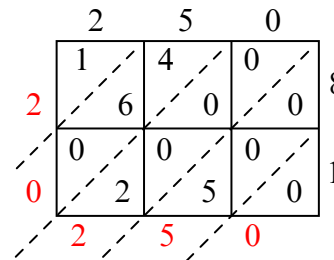
10) $665 \times 53 =$



11) $990 \times 58 =$



12) $250 \times 81 =$



Ответы

1. 31 320

2. 3 390

3. 9 086

4. 10 062

5. 6 026

6. 21 280

7. 15 872

8. 15 962

9. 36 250

10. 35 245

11. 57 420

12. 20 250