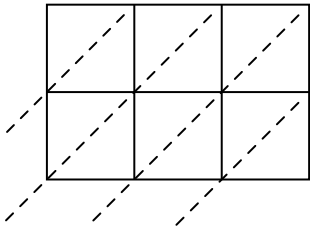


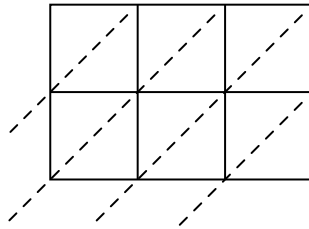


Используйте пространственную решетку для умножения, чтобы решить задачу.

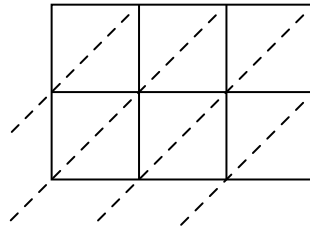
1) $602 \times 57 =$



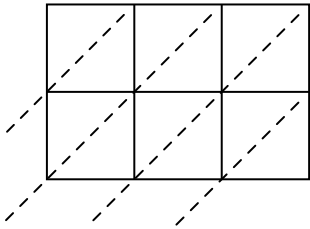
2) $602 \times 27 =$



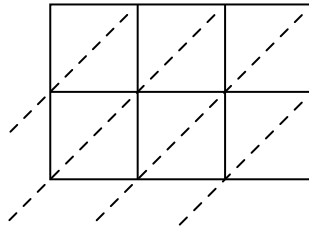
3) $816 \times 14 =$



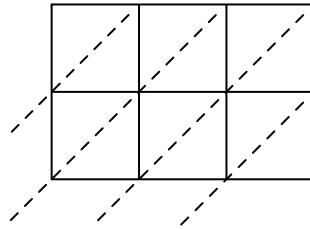
4) $777 \times 48 =$



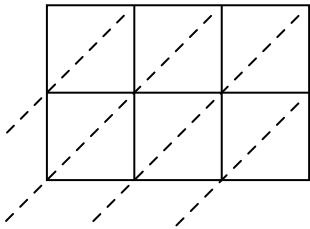
5) $888 \times 39 =$



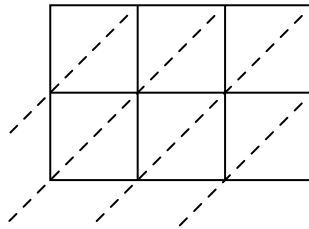
6) $401 \times 12 =$



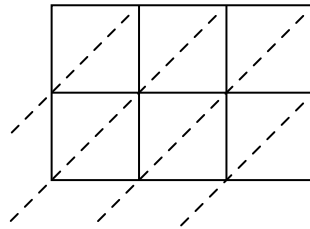
7) $790 \times 95 =$



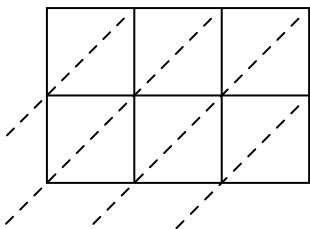
8) $123 \times 40 =$



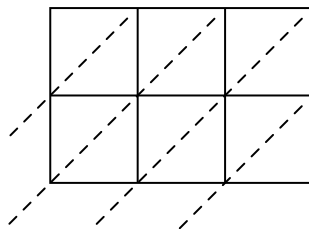
9) $943 \times 11 =$



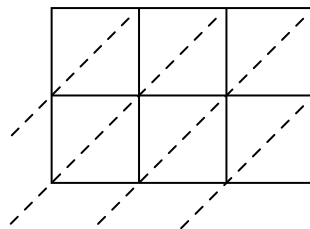
10) $138 \times 27 =$



11) $419 \times 21 =$



12) $193 \times 95 =$



Ответы

1. _____

2. _____

3. _____

4. _____

5. _____

6. _____

7. _____

8. _____

9. _____

10. _____

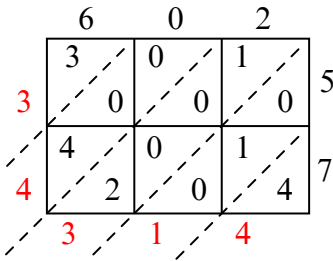
11. _____

12. _____

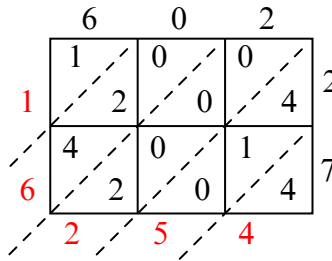


Используйте пространственную решетку для умножения, чтобы решить задачу.

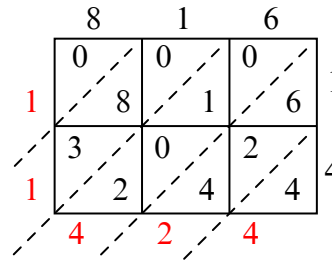
1) $602 \times 57 =$



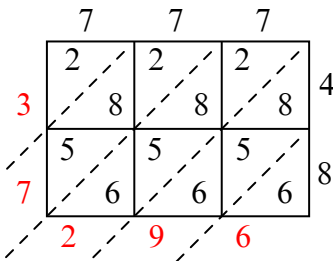
2) $602 \times 27 =$



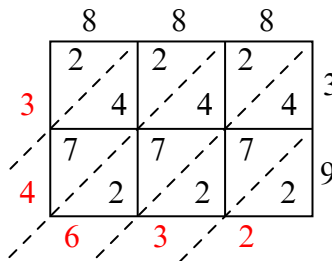
3) $816 \times 14 =$



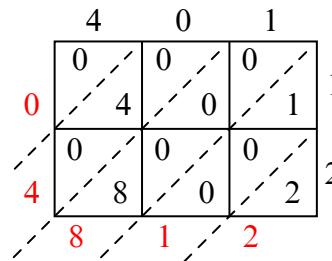
4) $777 \times 48 =$



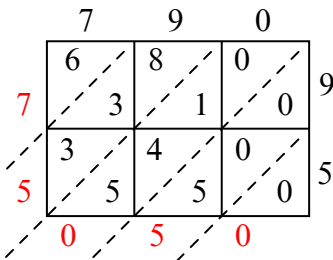
5) $888 \times 39 =$



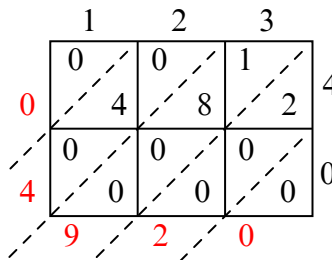
6) $401 \times 12 =$



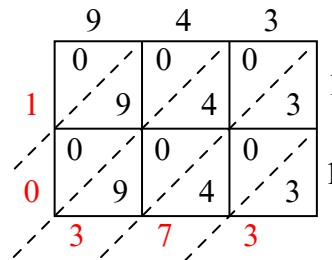
7) $790 \times 95 =$



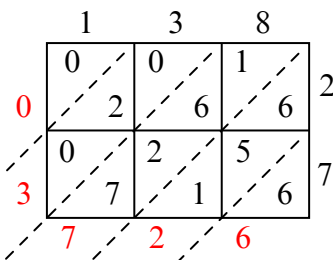
8) $123 \times 40 =$



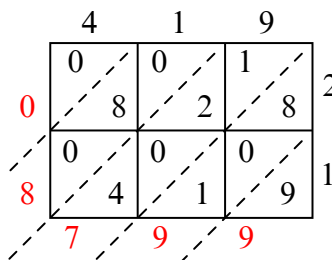
9) $943 \times 11 =$



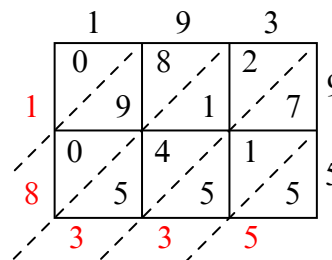
10) $138 \times 27 =$



11) $419 \times 21 =$



12) $193 \times 95 =$



Ответы

1. 34 314

2. 16 254

3. 11 424

4. 37 296

5. 34 632

6. 4 812

7. 75 050

8. 4 920

9. 10 373

10. 3 726

11. 8 799

12. 18 335