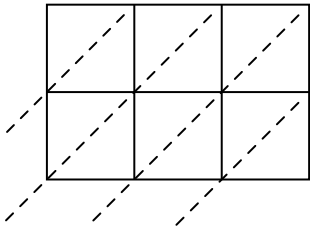


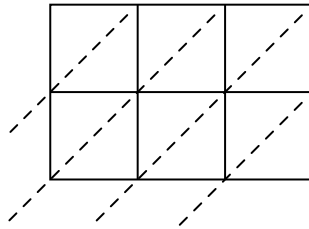


Используйте пространственную решетку для умножения, чтобы решить задачу.

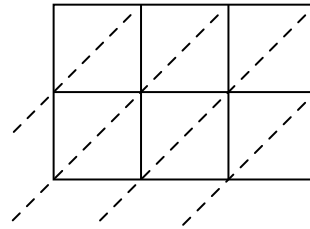
1) $685 \times 19 =$



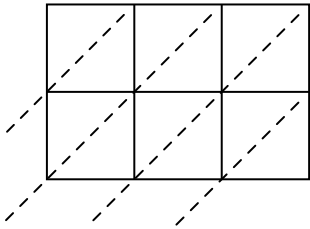
2) $177 \times 50 =$



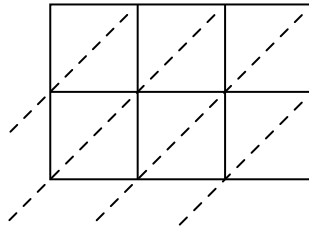
3) $779 \times 59 =$



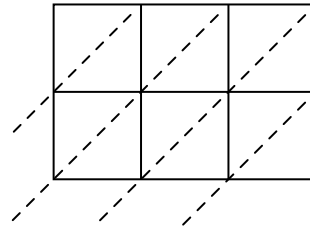
4) $758 \times 52 =$



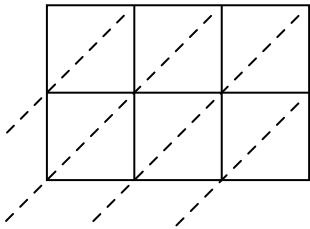
5) $829 \times 69 =$



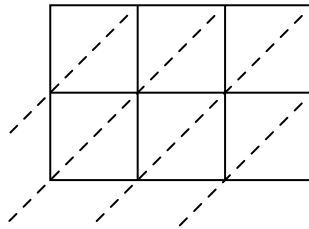
6) $326 \times 68 =$



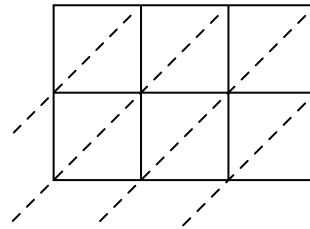
7) $582 \times 82 =$



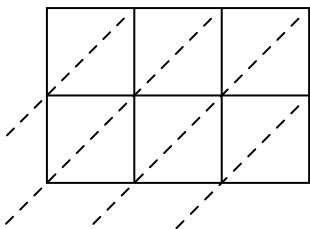
8) $201 \times 17 =$



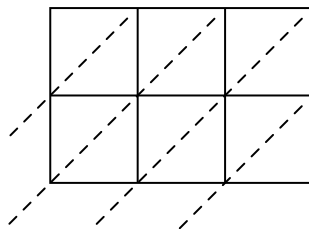
9) $234 \times 82 =$



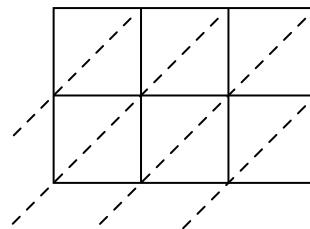
10) $356 \times 42 =$



11) $434 \times 11 =$



12) $311 \times 63 =$



Ответы

1. _____

2. _____

3. _____

4. _____

5. _____

6. _____

7. _____

8. _____

9. _____

10. _____

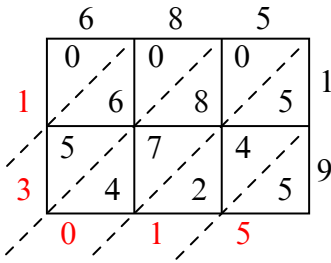
11. _____

12. _____

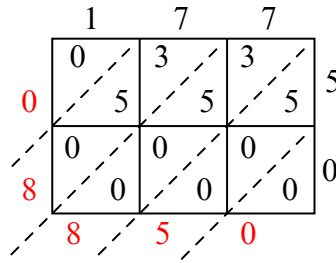


Используйте пространственную решетку для умножения, чтобы решить задачу.

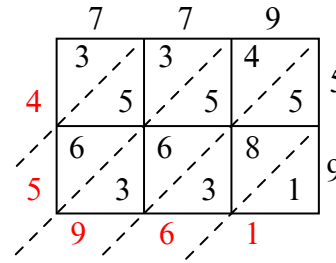
1) $685 \times 19 =$



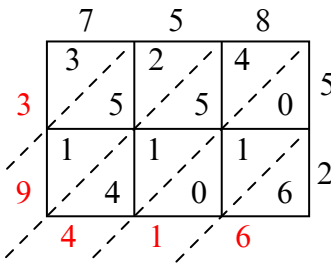
2) $177 \times 50 =$



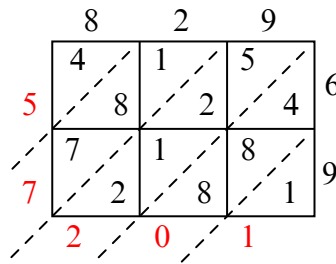
3) $779 \times 59 =$



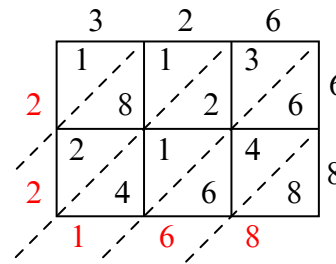
4) $758 \times 52 =$



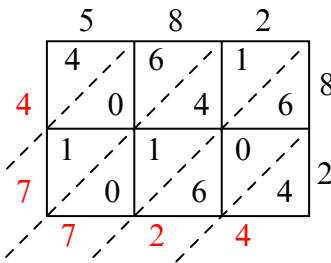
5) $829 \times 69 =$



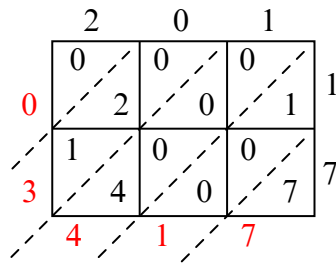
6) $326 \times 68 =$



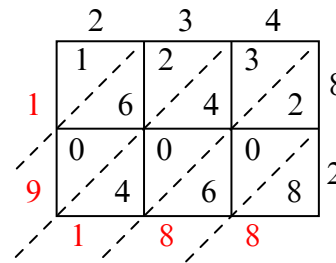
7) $582 \times 82 =$



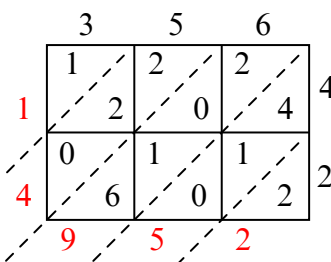
8) $201 \times 17 =$



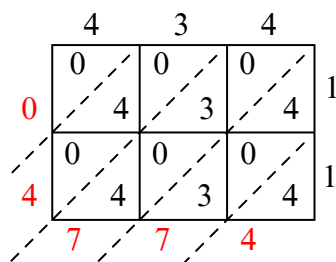
9) $234 \times 82 =$



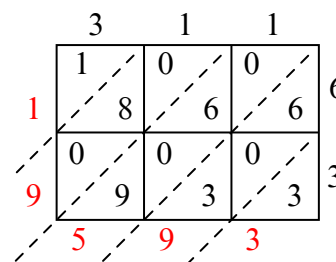
10) $356 \times 42 =$



11) $434 \times 11 =$



12) $311 \times 63 =$



Ответы

1. 13 015

2. 8 850

3. 45 961

4. 39 416

5. 57 201

6. 22 168

7. 47 724

8. 3 417

9. 19 188

10. 14 952

11. 4 774

12. 19 593