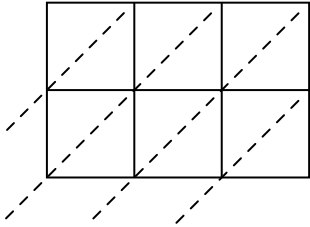


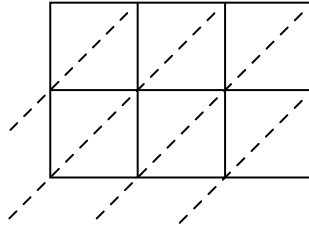


Используйте пространственную решетку для умножения, чтобы решить задачу.

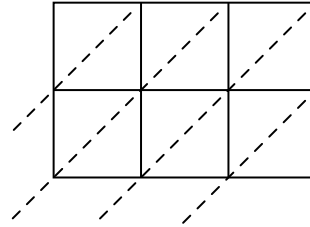
1) $880 \times 56 =$



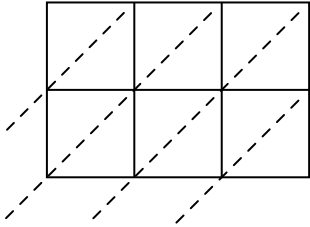
2) $493 \times 77 =$



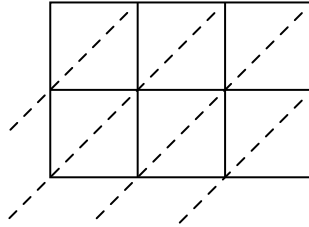
3) $959 \times 67 =$



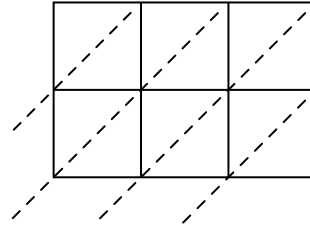
4) $855 \times 78 =$



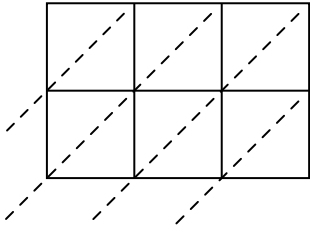
5) $980 \times 77 =$



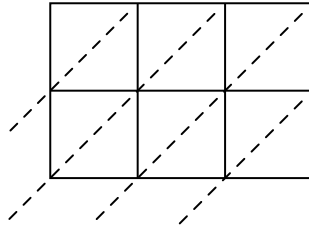
6) $527 \times 19 =$



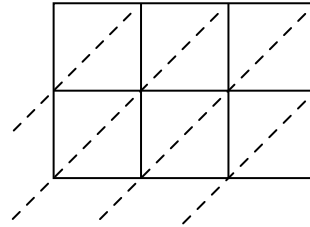
7) $465 \times 92 =$



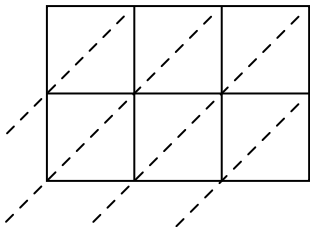
8) $606 \times 66 =$



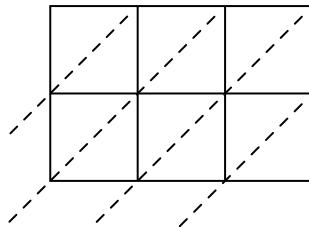
9) $285 \times 77 =$



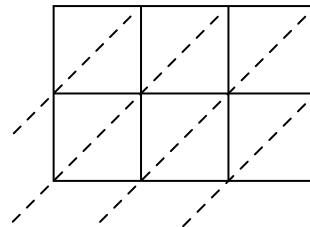
10) $837 \times 70 =$



11) $864 \times 40 =$



12) $518 \times 17 =$



Ответы

1. _____

2. _____

3. _____

4. _____

5. _____

6. _____

7. _____

8. _____

9. _____

10. _____

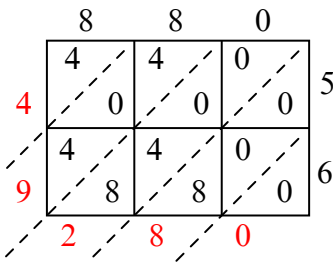
11. _____

12. _____

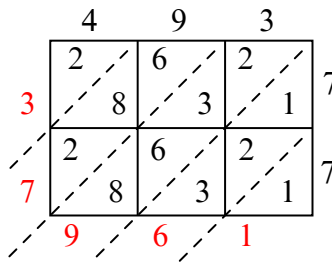


Используйте пространственную решетку для умножения, чтобы решить задачу.

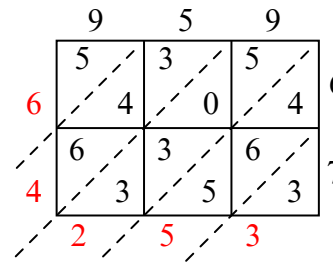
1) $880 \times 56 =$



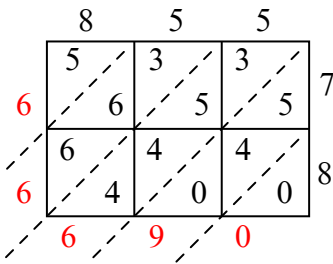
2) $493 \times 77 =$



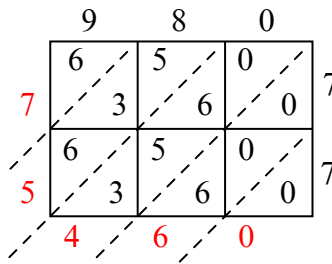
3) $959 \times 67 =$



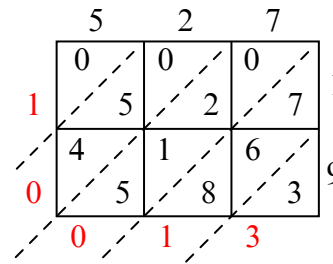
4) $855 \times 78 =$



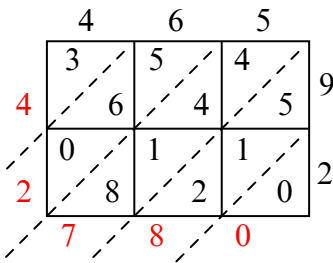
5) $980 \times 77 =$



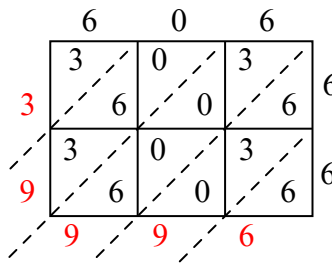
6) $527 \times 19 =$



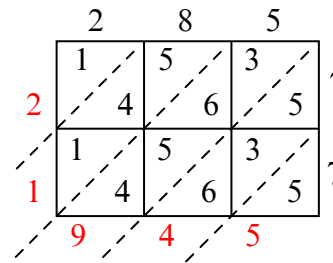
7) $465 \times 92 =$



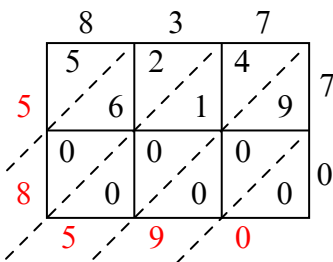
8) $606 \times 66 =$



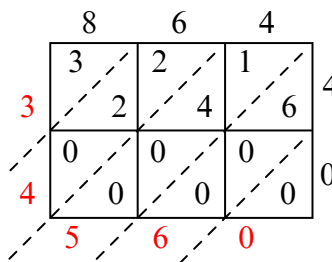
9) $285 \times 77 =$



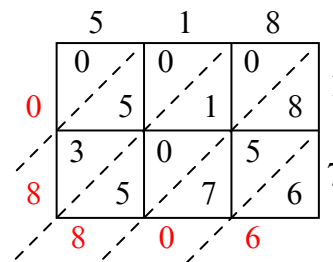
10) $837 \times 70 =$



11) $864 \times 40 =$



12) $518 \times 17 =$



Ответы

1. 49 280

2. 37 961

3. 64 253

4. 66 690

5. 75 460

6. 10 013

7. 42 780

8. 39 996

9. 21 945

10. 58 590

11. 34 560

12. 8 806