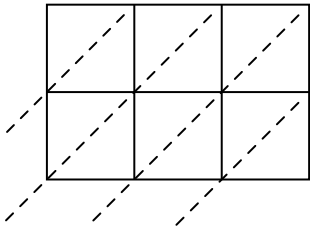


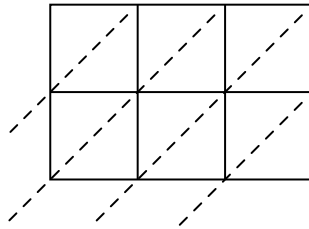


Используйте пространственную решетку для умножения, чтобы решить задачу.

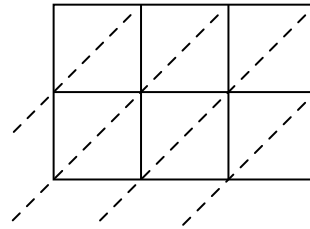
1) $143 \times 35 =$



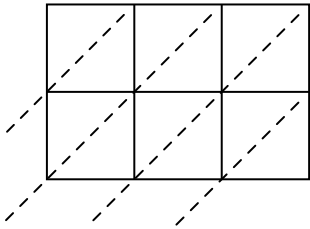
2) $815 \times 17 =$



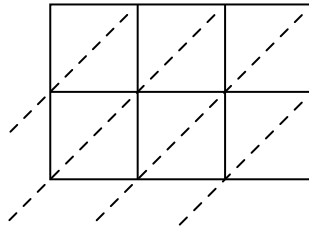
3) $706 \times 60 =$



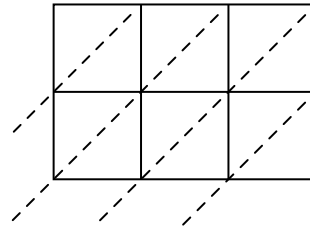
4) $277 \times 54 =$



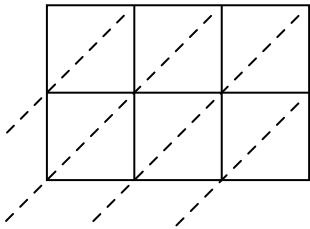
5) $185 \times 54 =$



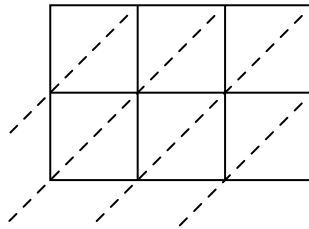
6) $159 \times 79 =$



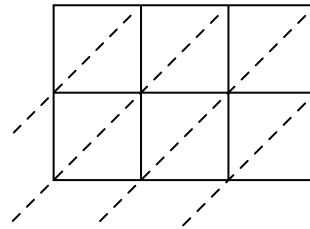
7) $576 \times 91 =$



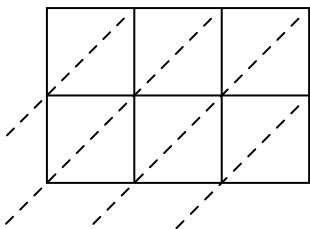
8) $433 \times 58 =$



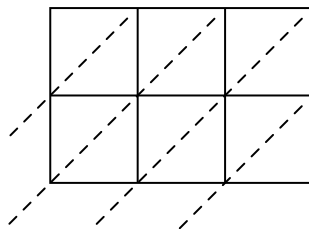
9) $726 \times 24 =$



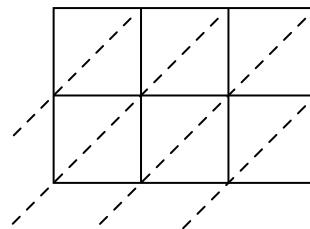
10) $621 \times 87 =$



11) $832 \times 17 =$



12) $695 \times 42 =$



Ответы

1. _____

2. _____

3. _____

4. _____

5. _____

6. _____

7. _____

8. _____

9. _____

10. _____

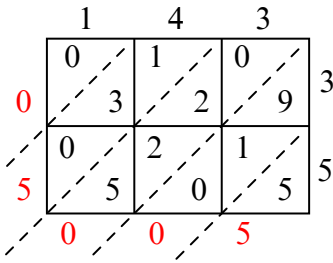
11. _____

12. _____

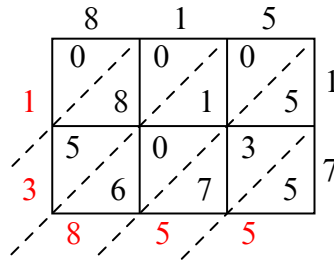


Используйте пространственную решетку для умножения, чтобы решить задачу.

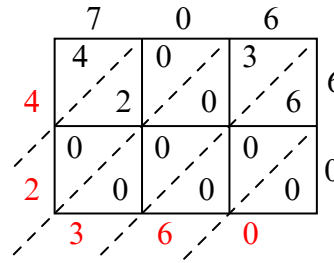
1) $143 \times 35 =$



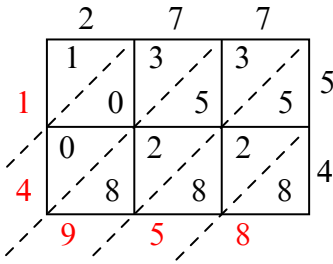
2) $815 \times 17 =$



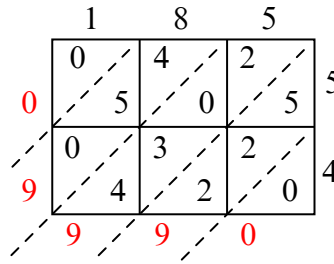
3) $706 \times 60 =$



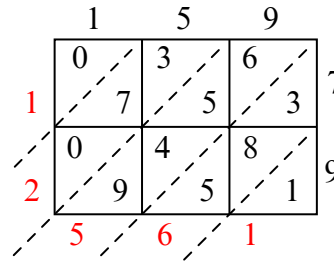
4) $277 \times 54 =$



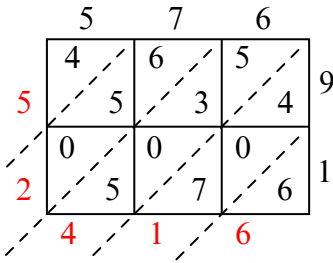
5) $185 \times 54 =$



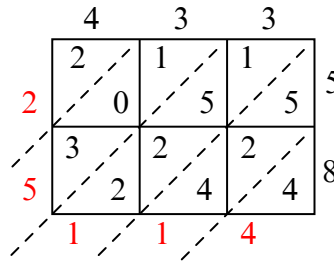
6) $159 \times 79 =$



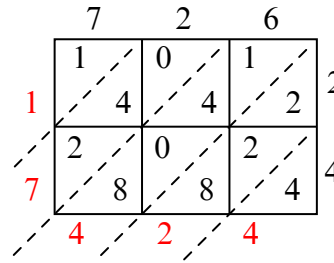
7) $576 \times 91 =$



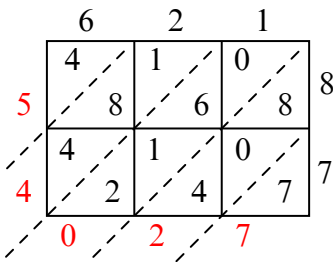
8) $433 \times 58 =$



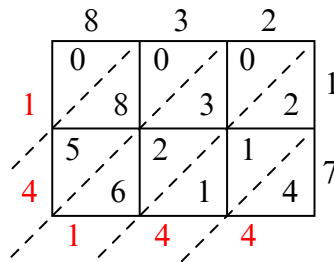
9) $726 \times 24 =$



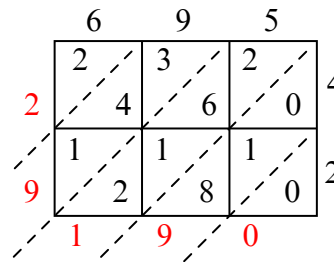
10) $621 \times 87 =$



11) $832 \times 17 =$



12) $695 \times 42 =$



Ответы

1. 5 005

2. 13 855

3. 42 360

4. 14 958

5. 9 990

6. 12 561

7. 52 416

8. 25 114

9. 17 424

10. 54 027

11. 14 144

12. 29 190