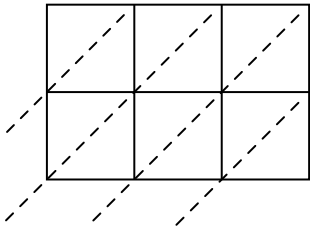


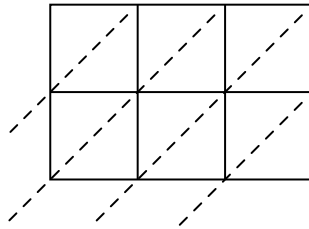


Используйте пространственную решетку для умножения, чтобы решить задачу.

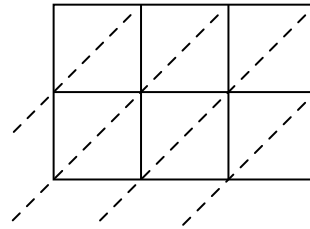
1) $552 \times 14 =$



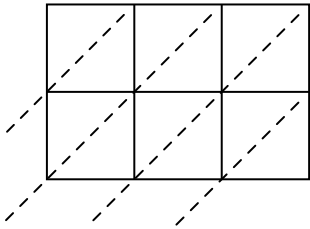
2) $606 \times 39 =$



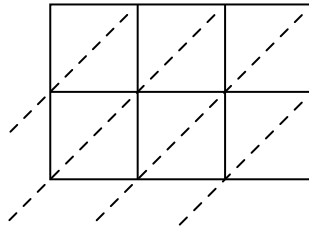
3) $242 \times 22 =$



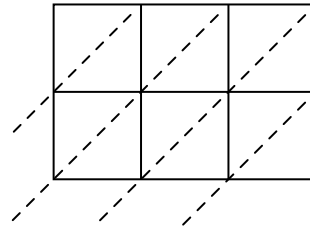
4) $679 \times 29 =$



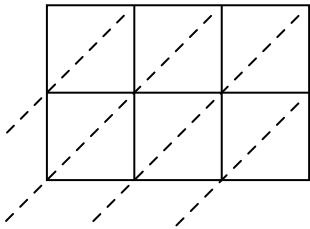
5) $409 \times 91 =$



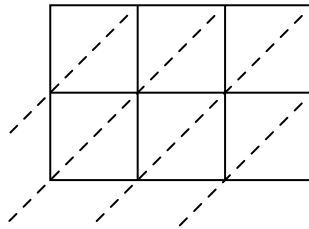
6) $371 \times 91 =$



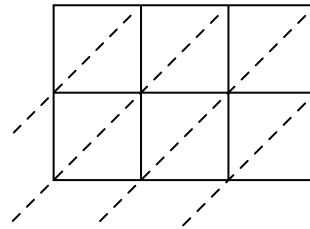
7) $124 \times 97 =$



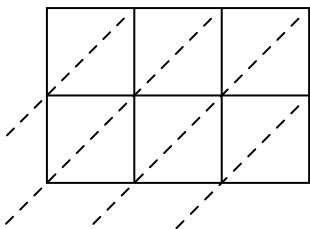
8) $327 \times 76 =$



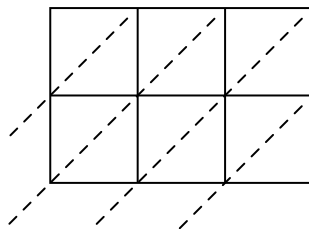
9) $709 \times 47 =$



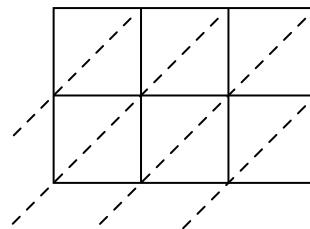
10) $746 \times 60 =$



11) $337 \times 84 =$



12) $475 \times 74 =$



Ответы

1. _____

2. _____

3. _____

4. _____

5. _____

6. _____

7. _____

8. _____

9. _____

10. _____

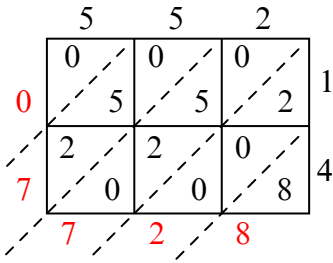
11. _____

12. _____

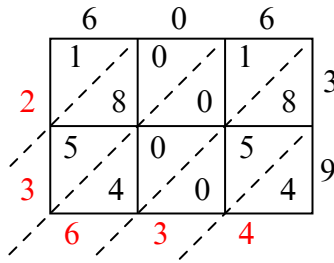


Используйте пространственную решетку для умножения, чтобы решить задачу.

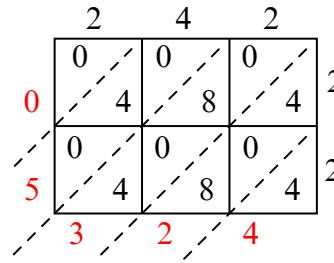
1) $552 \times 14 =$



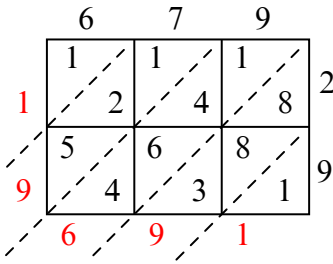
2) $606 \times 39 =$



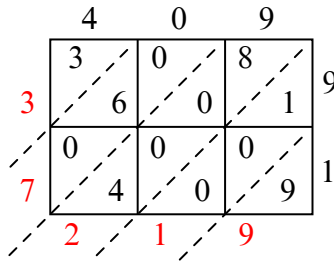
3) $242 \times 22 =$



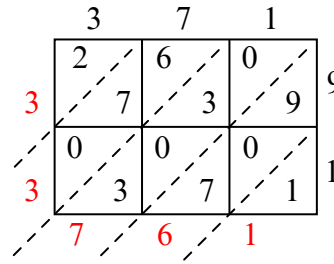
4) $679 \times 29 =$



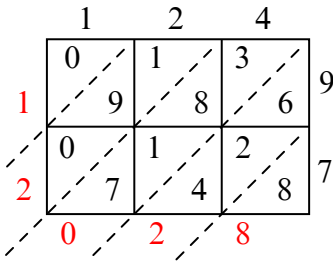
5) $409 \times 91 =$



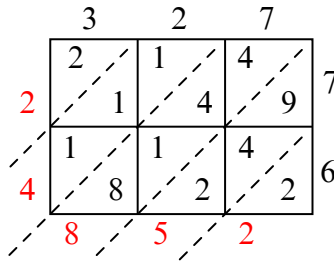
6) $371 \times 91 =$



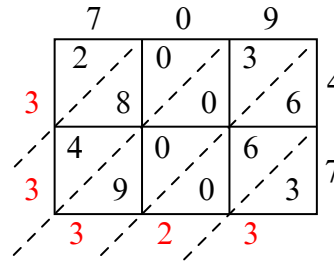
7) $124 \times 97 =$



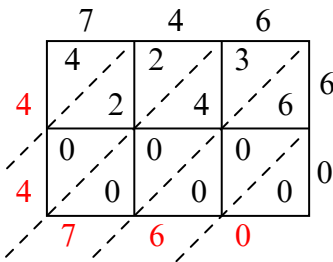
8) $327 \times 76 =$



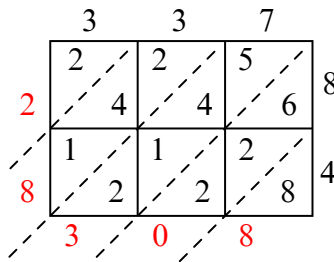
9) $709 \times 47 =$



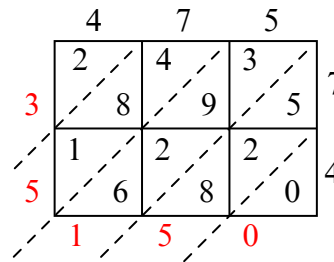
10) $746 \times 60 =$



11) $337 \times 84 =$



12) $475 \times 74 =$



Ответы

1. 7 728

2. 23 634

3. 5 324

4. 19 691

5. 37 219

6. 33 761

7. 12 028

8. 24 852

9. 33 323

10. 44 760

11. 28 308

12. 35 150