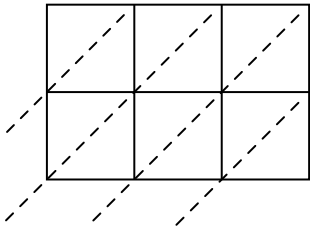


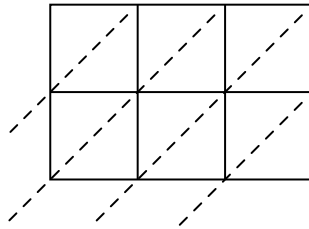


Используйте пространственную решетку для умножения, чтобы решить задачу.

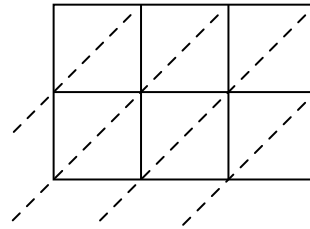
1) $781 \times 37 =$



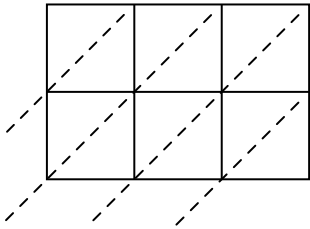
2) $200 \times 93 =$



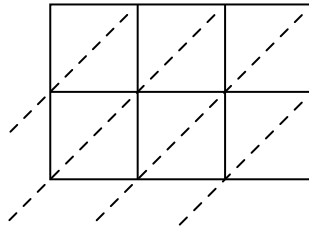
3) $435 \times 57 =$



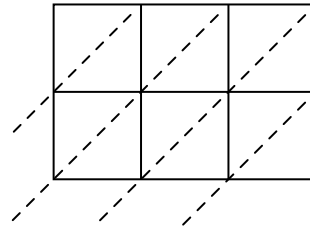
4) $539 \times 60 =$



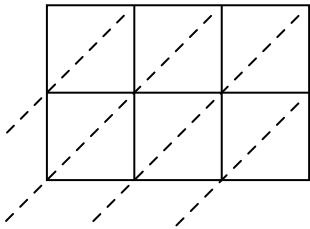
5) $214 \times 87 =$



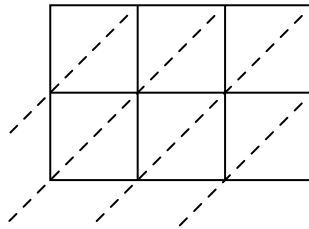
6) $483 \times 37 =$



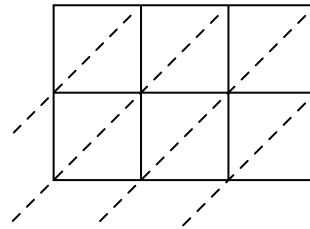
7) $765 \times 68 =$



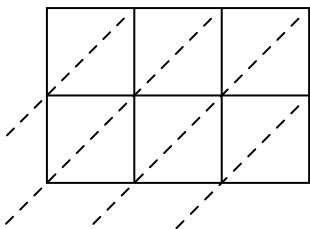
8) $453 \times 30 =$



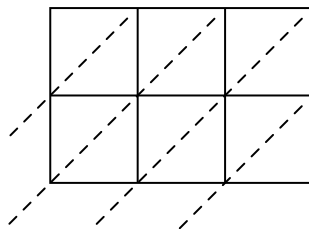
9) $485 \times 76 =$



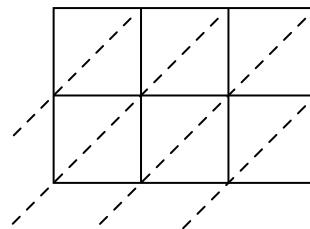
10) $421 \times 95 =$



11) $920 \times 53 =$



12) $810 \times 59 =$



Ответы

1. _____

2. _____

3. _____

4. _____

5. _____

6. _____

7. _____

8. _____

9. _____

10. _____

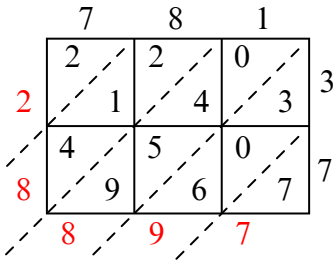
11. _____

12. _____

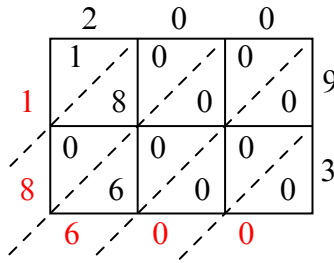


Используйте пространственную решетку для умножения, чтобы решить задачу.

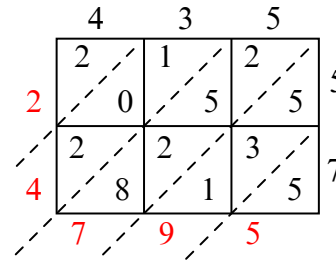
1) $781 \times 37 =$



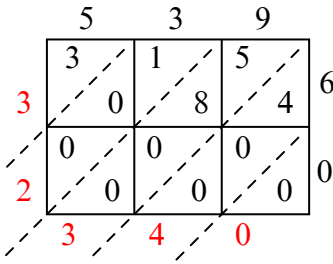
2) $200 \times 93 =$



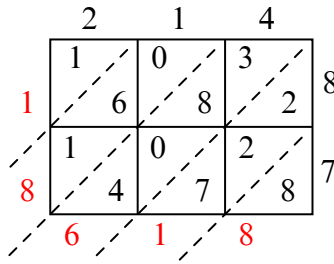
3) $435 \times 57 =$



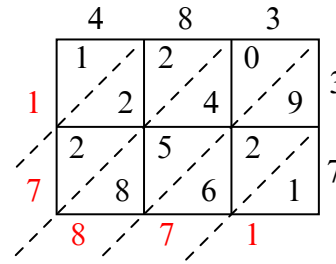
4) $539 \times 60 =$



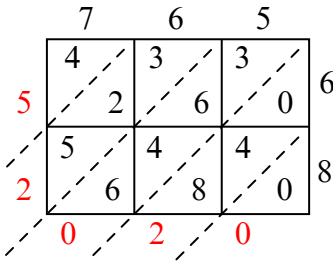
5) $214 \times 87 =$



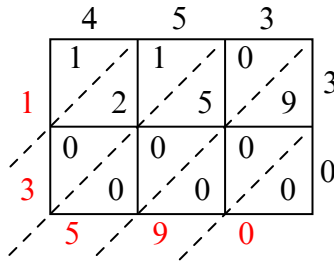
6) $483 \times 37 =$



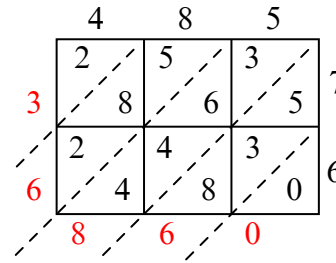
7) $765 \times 68 =$



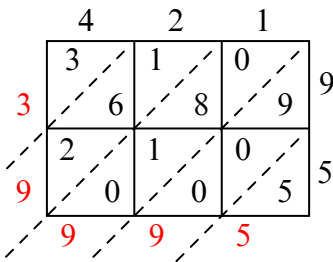
8) $453 \times 30 =$



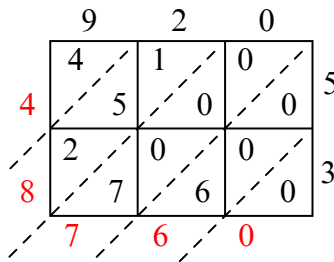
9) $485 \times 76 =$



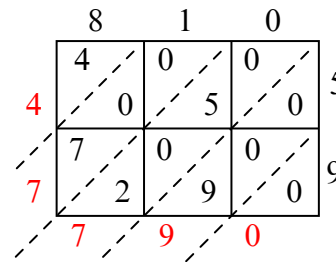
10) $421 \times 95 =$



11) $920 \times 53 =$



12) $810 \times 59 =$



Ответы

1. 28 897

2. 18 600

3. 24 795

4. 32 340

5. 18 618

6. 17 871

7. 52 020

8. 13 590

9. 36 860

10. 39 995

11. 48 760

12. 47 790