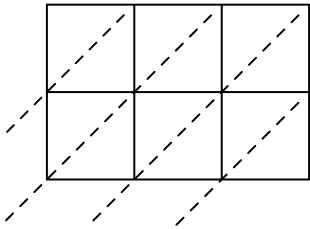


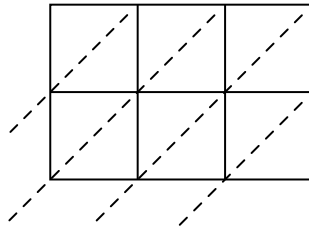


Используйте пространственную решетку для умножения, чтобы решить задачу.

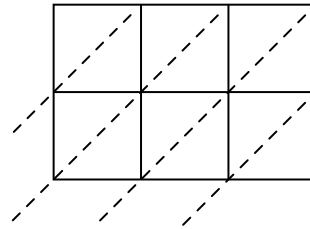
1) $376 \times 20 =$



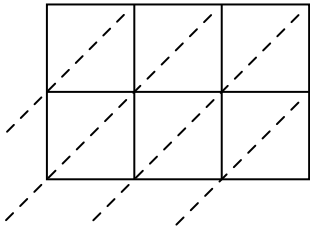
2) $578 \times 70 =$



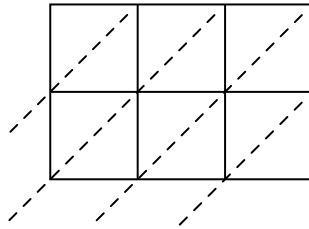
3) $775 \times 99 =$



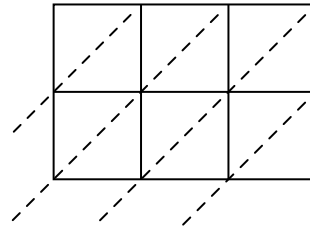
4) $332 \times 11 =$



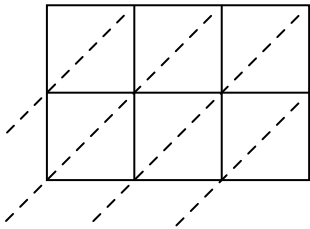
5) $835 \times 80 =$



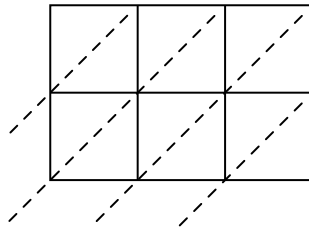
6) $465 \times 22 =$



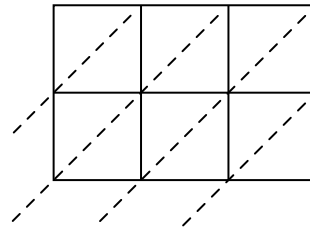
7) $977 \times 61 =$



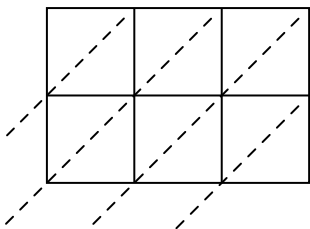
8) $272 \times 89 =$



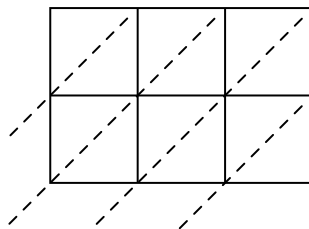
9) $274 \times 97 =$



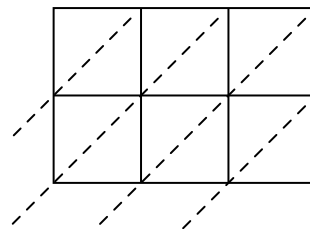
10) $401 \times 62 =$



11) $947 \times 14 =$



12) $149 \times 16 =$



Ответы

1. _____

2. _____

3. _____

4. _____

5. _____

6. _____

7. _____

8. _____

9. _____

10. _____

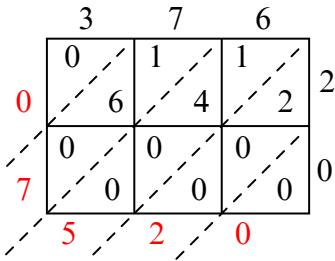
11. _____

12. _____

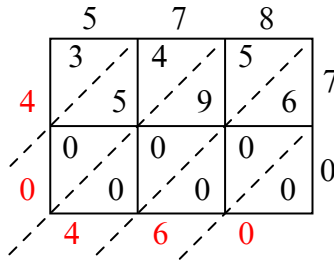


Используйте пространственную решетку для умножения, чтобы решить задачу.

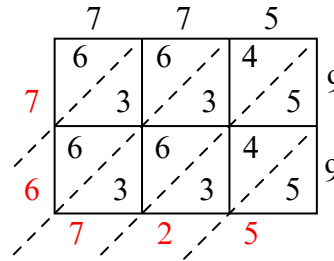
1) $376 \times 20 =$



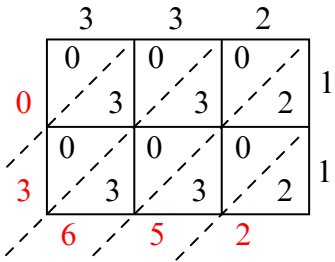
2) $578 \times 70 =$



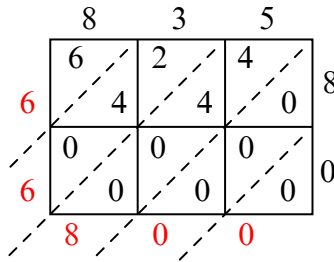
3) $775 \times 99 =$



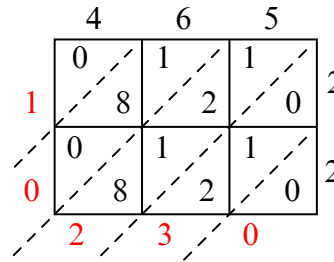
4) $332 \times 11 =$



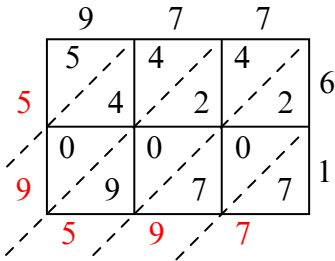
5) $835 \times 80 =$



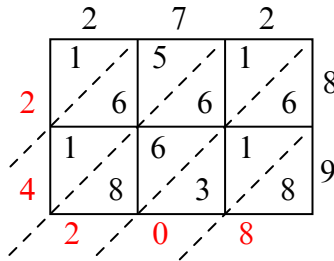
6) $465 \times 22 =$



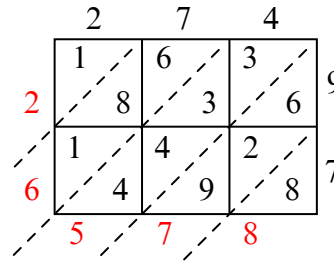
7) $977 \times 61 =$



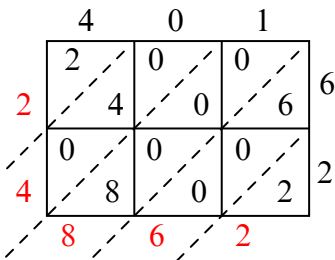
8) $272 \times 89 =$



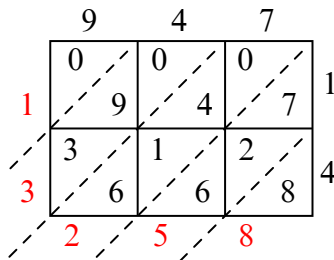
9) $274 \times 97 =$



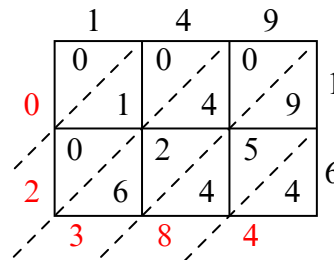
10) $401 \times 62 =$



11) $947 \times 14 =$



12) $149 \times 16 =$



Ответы

1. 7 520

2. 40 460

3. 76 725

4. 3 652

5. 66 800

6. 10 230

7. 59 597

8. 24 208

9. 26 578

10. 24 862

11. 13 258

12. 2 384