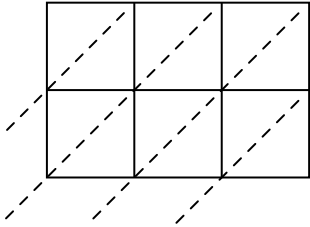


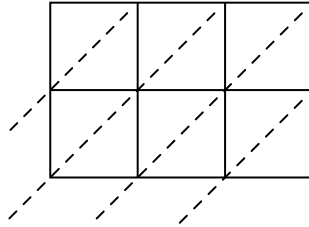


Используйте пространственную решетку для умножения, чтобы решить задачу.

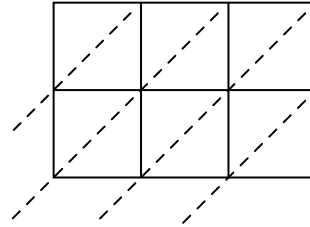
1) $308 \times 65 =$



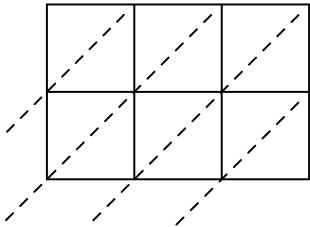
2) $850 \times 52 =$



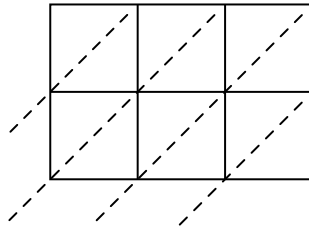
3) $855 \times 43 =$



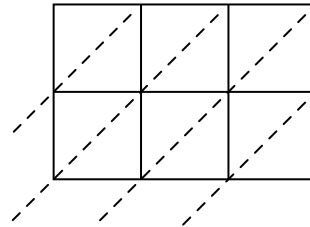
4) $809 \times 56 =$



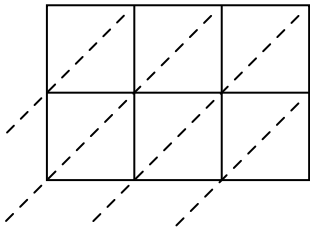
5) $724 \times 25 =$



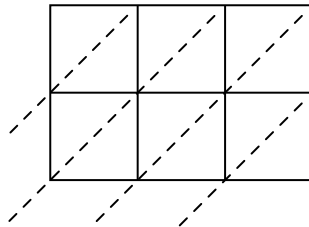
6) $808 \times 51 =$



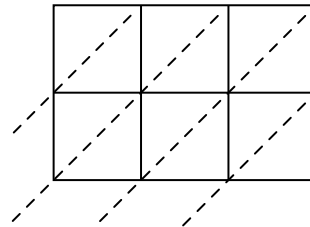
7) $339 \times 18 =$



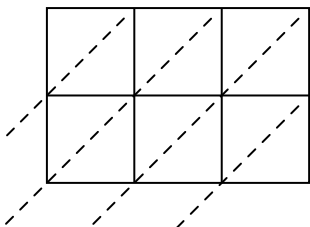
8) $144 \times 22 =$



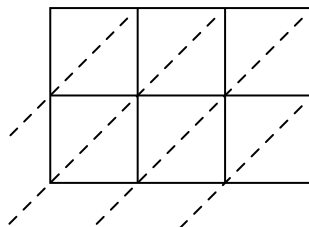
9) $571 \times 77 =$



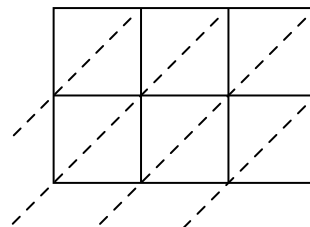
10) $365 \times 91 =$



11) $942 \times 29 =$



12) $766 \times 64 =$



Ответы

1. _____

2. _____

3. _____

4. _____

5. _____

6. _____

7. _____

8. _____

9. _____

10. _____

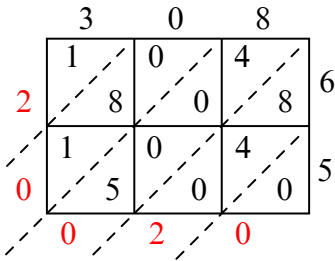
11. _____

12. _____

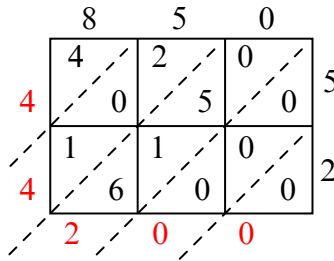


Используйте пространственную решетку для умножения, чтобы решить задачу.

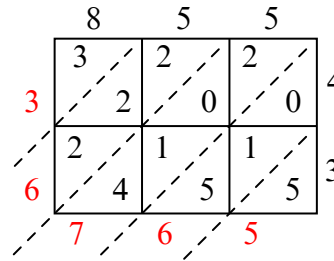
1) $308 \times 65 =$



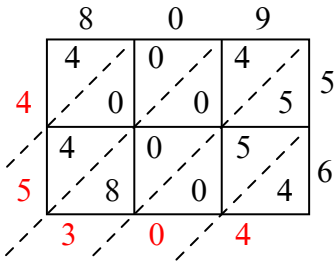
2) $850 \times 52 =$



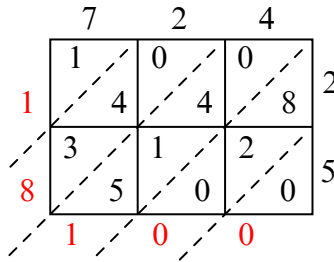
3) $855 \times 43 =$



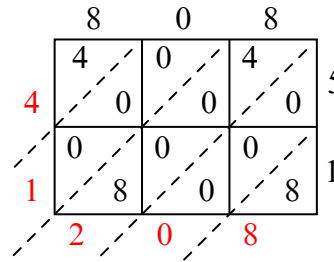
4) $809 \times 56 =$



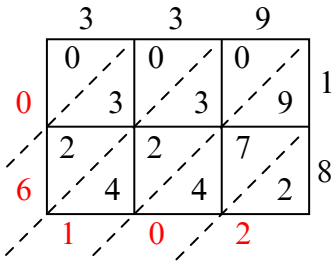
5) $724 \times 25 =$



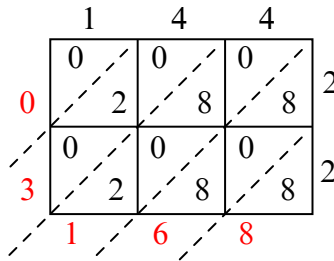
6) $808 \times 51 =$



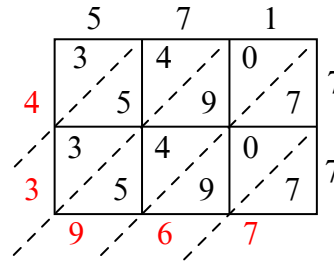
7) $339 \times 18 =$



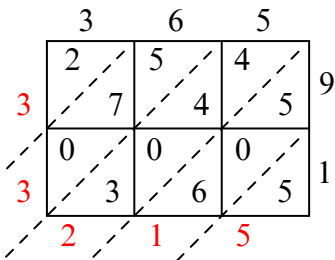
8) $144 \times 22 =$



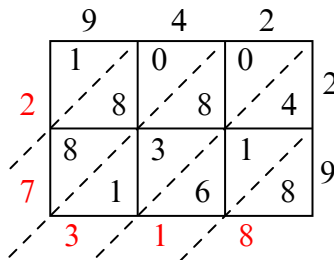
9) $571 \times 77 =$



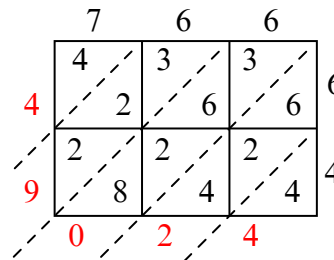
10) $365 \times 91 =$



11) $942 \times 29 =$



12) $766 \times 64 =$



Ответы

1. 20 020

2. 44 200

3. 36 765

4. 45 304

5. 18 100

6. 41 208

7. 6 102

8. 3 168

9. 43 967

10. 33 215

11. 27 318

12. 49 024