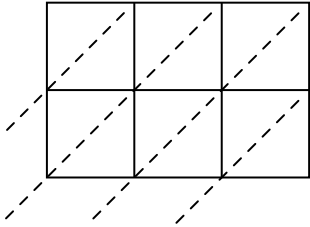


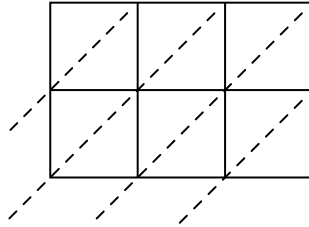


Используйте пространственную решетку для умножения, чтобы решить задачу.

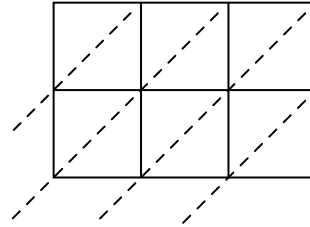
1) $432 \times 91 =$



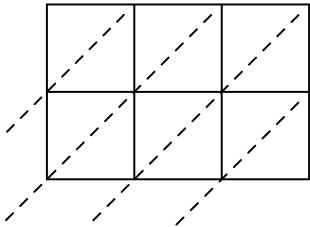
2) $441 \times 50 =$



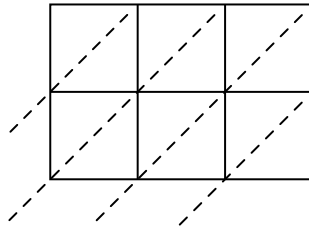
3) $949 \times 68 =$



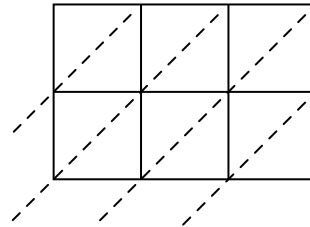
4) $504 \times 69 =$



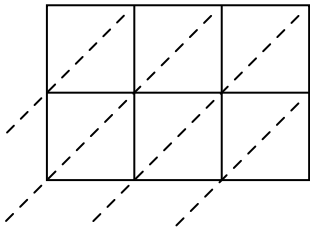
5) $551 \times 52 =$



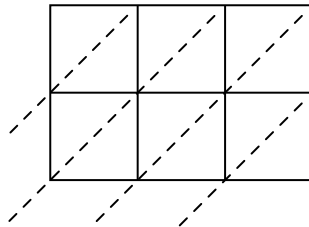
6) $707 \times 72 =$



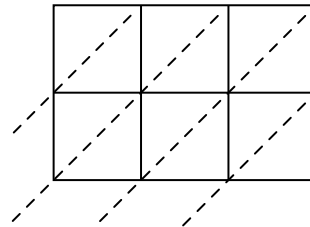
7) $334 \times 31 =$



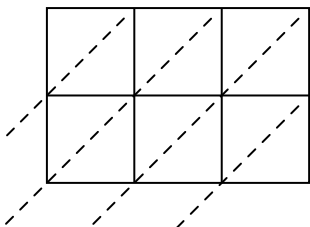
8) $119 \times 22 =$



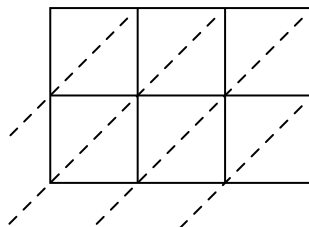
9) $945 \times 33 =$



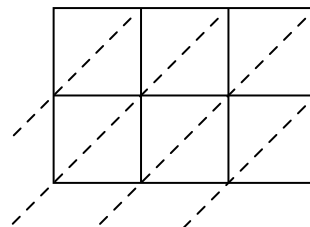
10) $965 \times 17 =$



11) $780 \times 46 =$



12) $515 \times 21 =$



Ответы

1. _____

2. _____

3. _____

4. _____

5. _____

6. _____

7. _____

8. _____

9. _____

10. _____

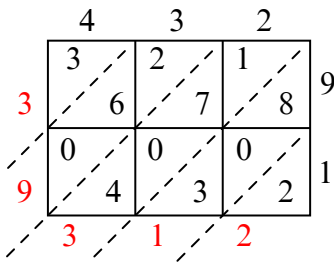
11. _____

12. _____

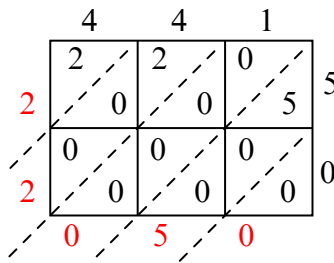


Используйте пространственную решетку для умножения, чтобы решить задачу.

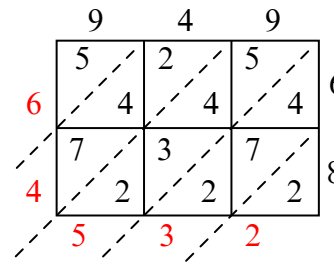
1) $432 \times 91 =$



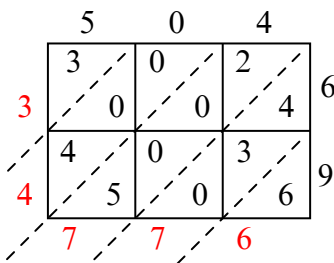
2) $441 \times 50 =$



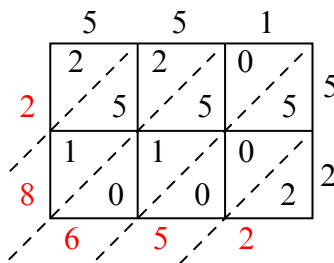
3) $949 \times 68 =$



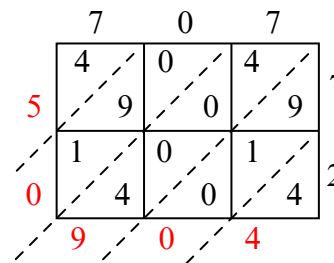
4) $504 \times 69 =$



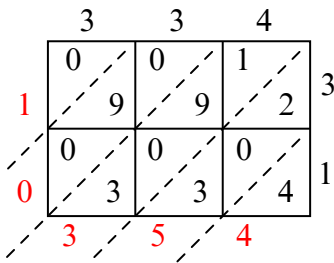
5) $551 \times 52 =$



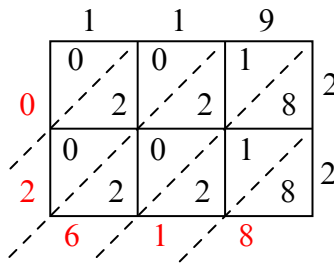
6) $707 \times 72 =$



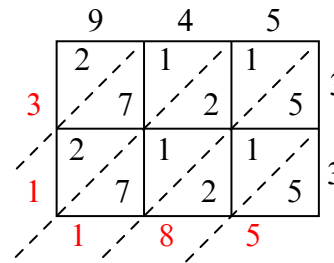
7) $334 \times 31 =$



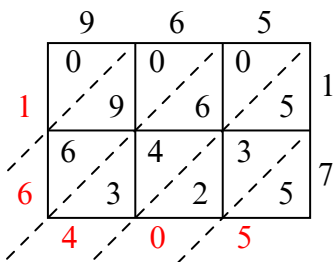
8) $119 \times 22 =$



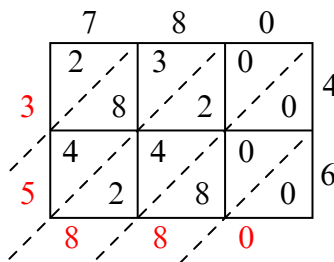
9) $945 \times 33 =$



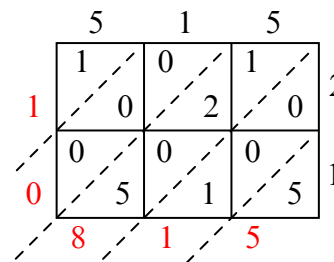
10) $965 \times 17 =$



11) $780 \times 46 =$



12) $515 \times 21 =$



Ответы

1. 39 312

2. 22 050

3. 64 532

4. 34 776

5. 28 652

6. 50 904

7. 10 354

8. 2 618

9. 31 185

10. 16 405

11. 35 880

12. 10 815