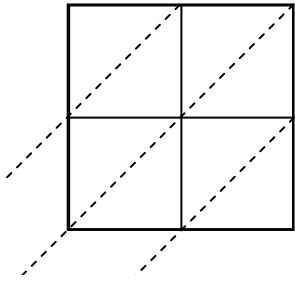


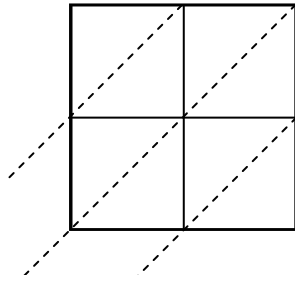


Используйте пространственную решетку для умножения, чтобы решить задачу.

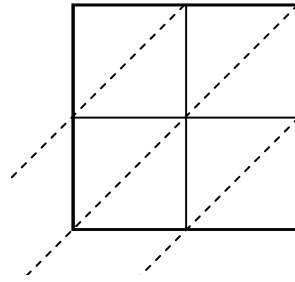
1)  $48 \times 41 =$



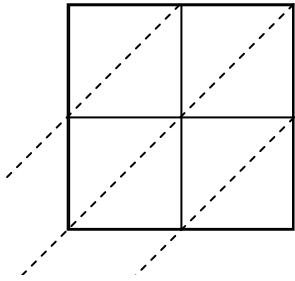
2)  $28 \times 10 =$



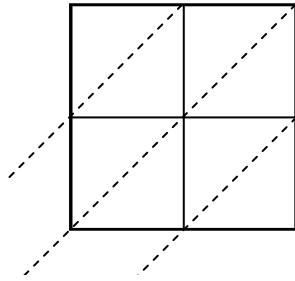
3)  $22 \times 76 =$



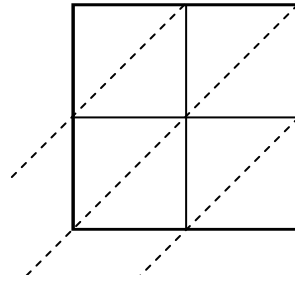
4)  $70 \times 67 =$



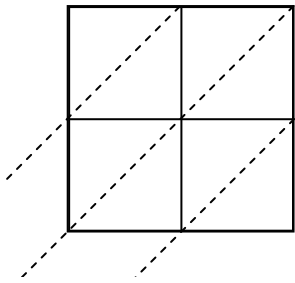
5)  $31 \times 10 =$



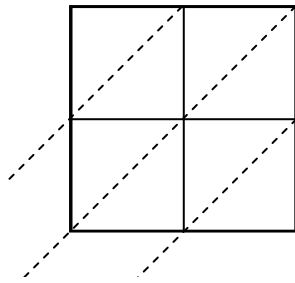
6)  $79 \times 35 =$



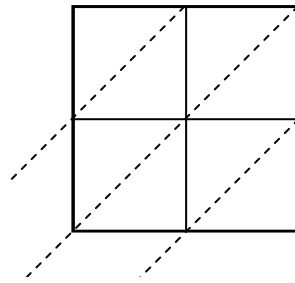
7)  $47 \times 56 =$



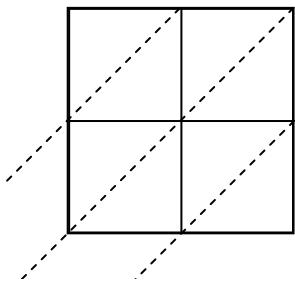
8)  $62 \times 23 =$



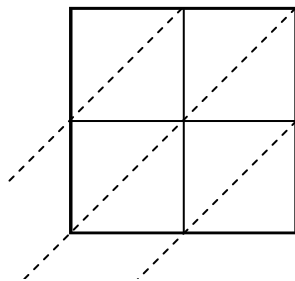
9)  $46 \times 56 =$



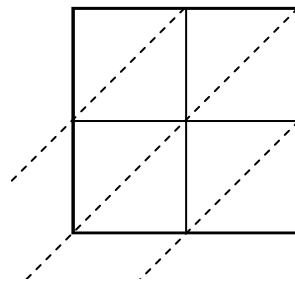
10)  $66 \times 36 =$



11)  $38 \times 84 =$



12)  $34 \times 40 =$



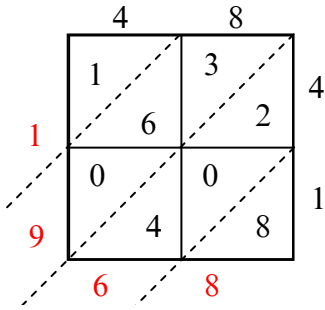
**Ответы**

1. \_\_\_\_\_
2. \_\_\_\_\_
3. \_\_\_\_\_
4. \_\_\_\_\_
5. \_\_\_\_\_
6. \_\_\_\_\_
7. \_\_\_\_\_
8. \_\_\_\_\_
9. \_\_\_\_\_
10. \_\_\_\_\_
11. \_\_\_\_\_
12. \_\_\_\_\_

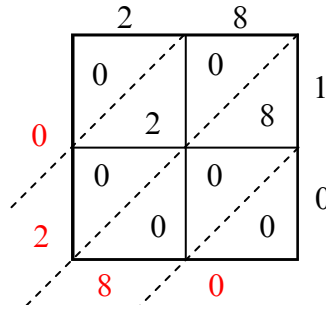


Используйте пространственную решетку для умножения, чтобы решить задачу.

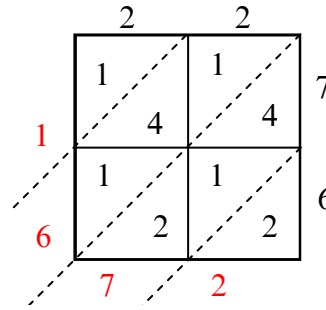
1)  $48 \times 41 =$



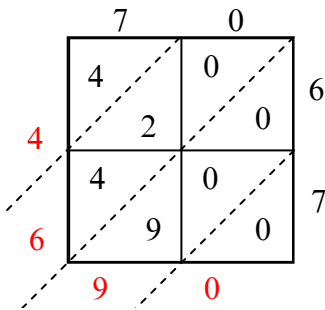
2)  $28 \times 10 =$



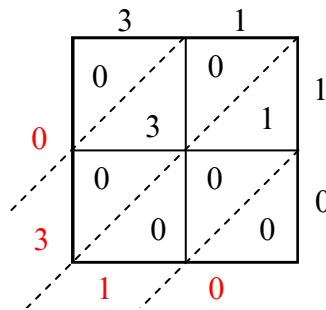
3)  $22 \times 76 =$



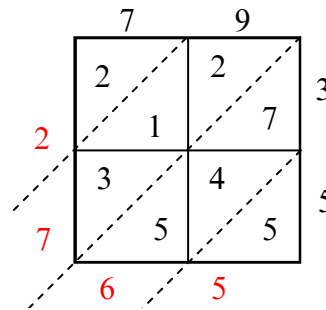
4)  $70 \times 67 =$



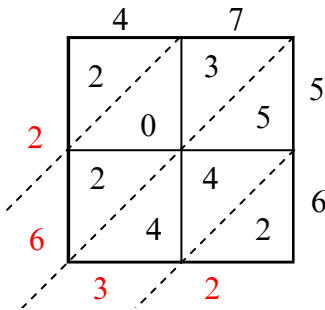
5)  $31 \times 10 =$



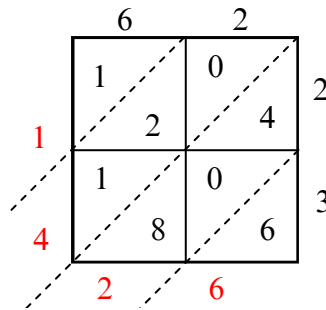
6)  $79 \times 35 =$



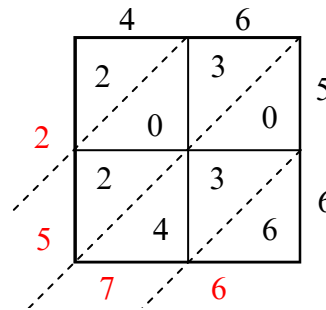
7)  $47 \times 56 =$



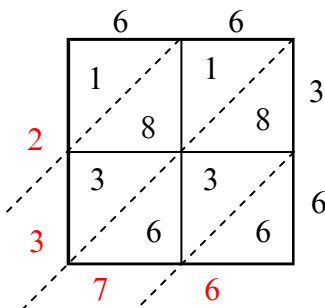
8)  $62 \times 23 =$



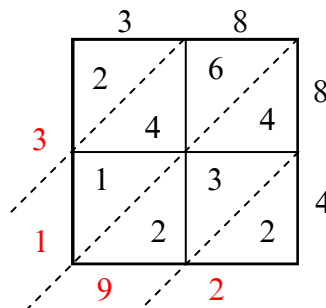
9)  $46 \times 56 =$



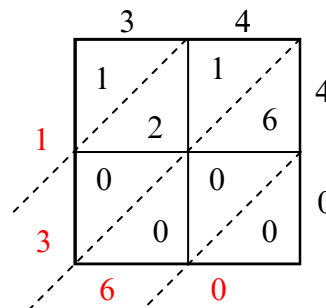
10)  $66 \times 36 =$



11)  $38 \times 84 =$



12)  $34 \times 40 =$



**Отвeты**

1. 1 968

2. 280

3. 1 672

4. 4 690

5. 310

6. 2 765

7. 2 632

8. 1 426

9. 2 576

10. 2 376

11. 3 192

12. 1 360