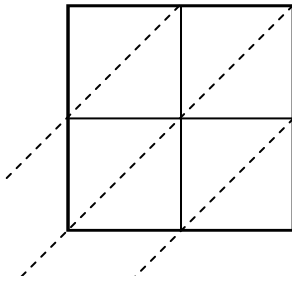


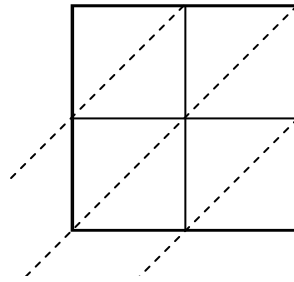


Используйте пространственную решетку для умножения, чтобы решить задачу.

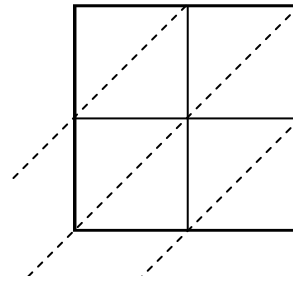
1) $73 \times 43 =$



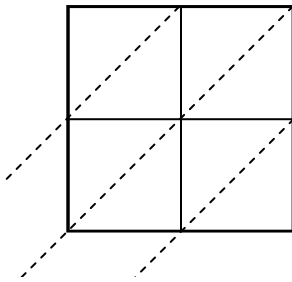
2) $17 \times 60 =$



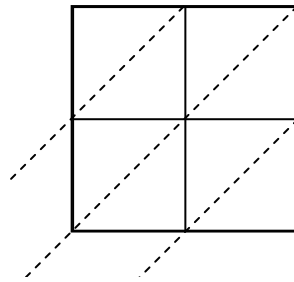
3) $38 \times 41 =$



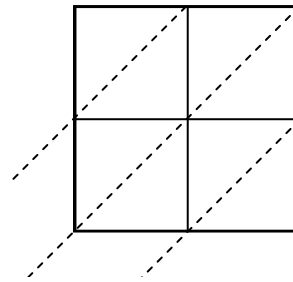
4) $31 \times 96 =$



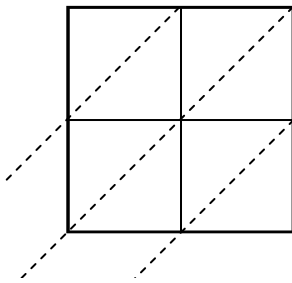
5) $73 \times 33 =$



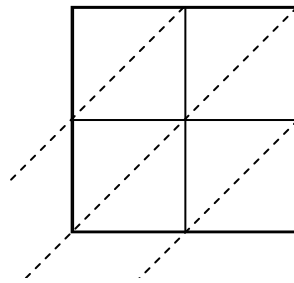
6) $30 \times 47 =$



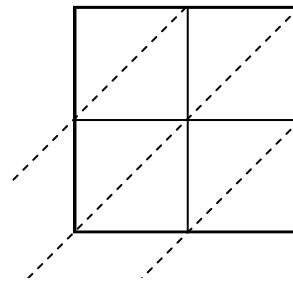
7) $85 \times 74 =$



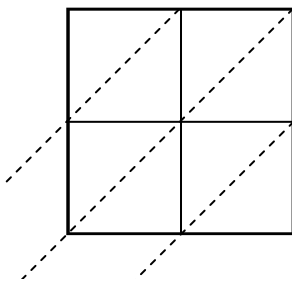
8) $78 \times 34 =$



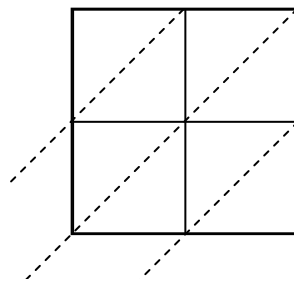
9) $27 \times 81 =$



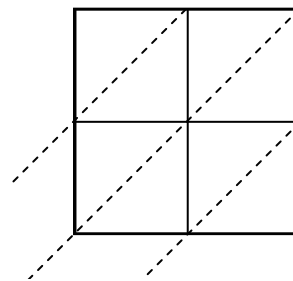
10) $14 \times 42 =$



11) $75 \times 19 =$



12) $84 \times 12 =$



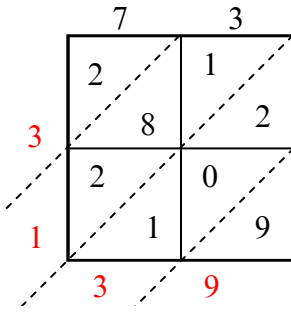
Ответы

1. _____
2. _____
3. _____
4. _____
5. _____
6. _____
7. _____
8. _____
9. _____
10. _____
11. _____
12. _____

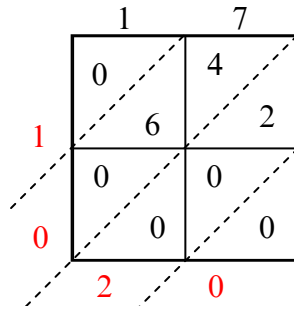


Используйте пространственную решетку для умножения, чтобы решить задачу.

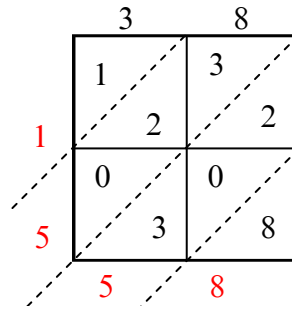
1) $73 \times 43 =$



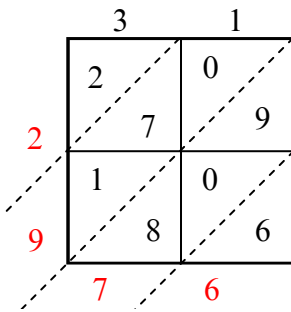
2) $17 \times 60 =$



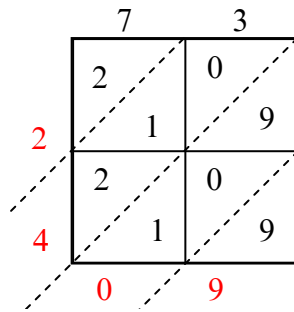
3) $38 \times 41 =$



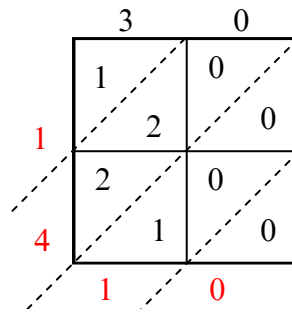
4) $31 \times 96 =$



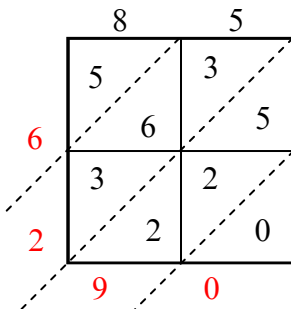
5) $73 \times 33 =$



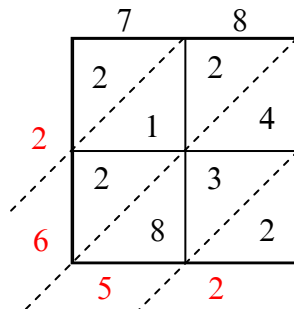
6) $30 \times 47 =$



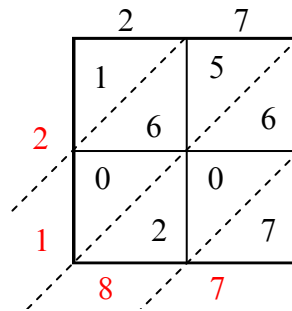
7) $85 \times 74 =$



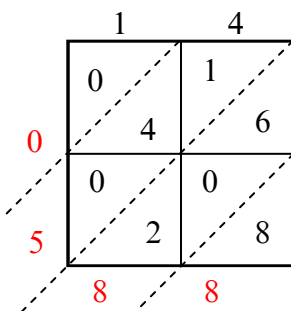
8) $78 \times 34 =$



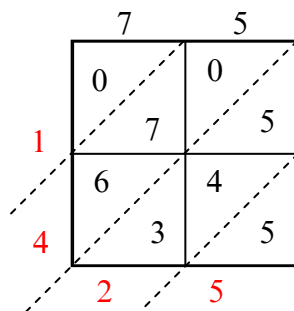
9) $27 \times 81 =$



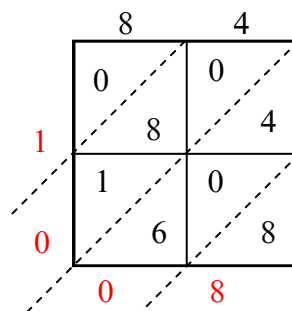
10) $14 \times 42 =$



11) $75 \times 19 =$



12) $84 \times 12 =$



Ответы

1. 3 139

2. 1 020

3. 1 558

4. 2 976

5. 2 409

6. 1 410

7. 6 290

8. 2 652

9. 2 187

10. 588

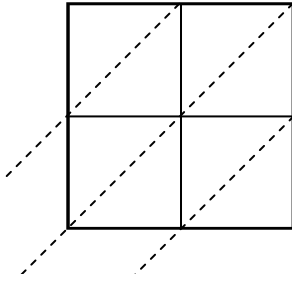
11. 1 425

12. 1 008

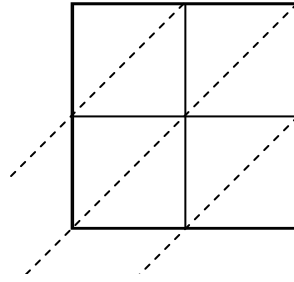


Используйте пространственную решетку для умножения, чтобы решить задачу.

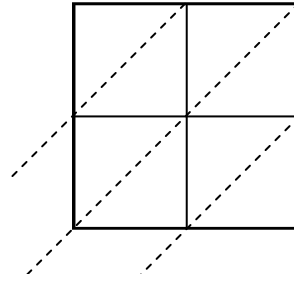
1) $90 \times 35 =$



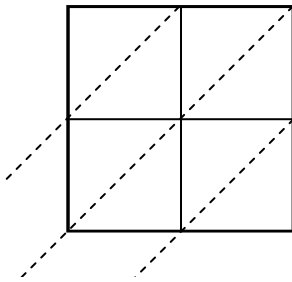
2) $46 \times 72 =$



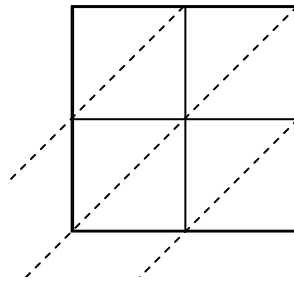
3) $86 \times 39 =$



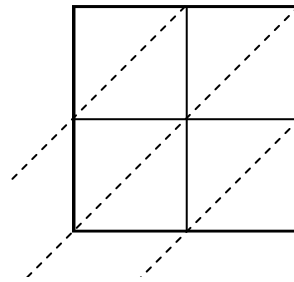
4) $33 \times 53 =$



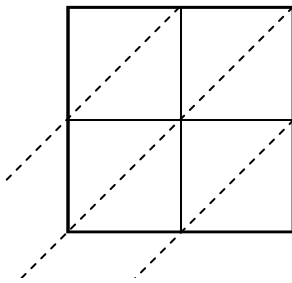
5) $86 \times 34 =$



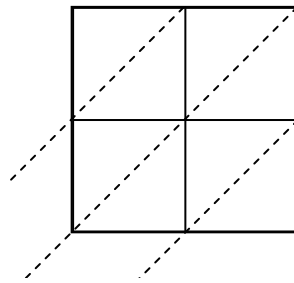
6) $84 \times 46 =$



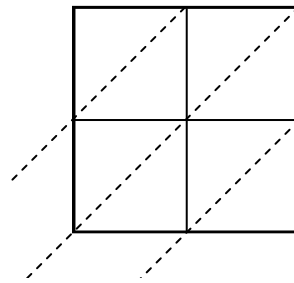
7) $20 \times 96 =$



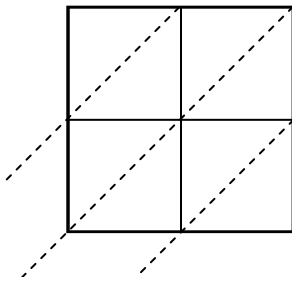
8) $17 \times 15 =$



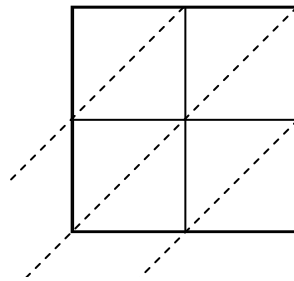
9) $42 \times 75 =$



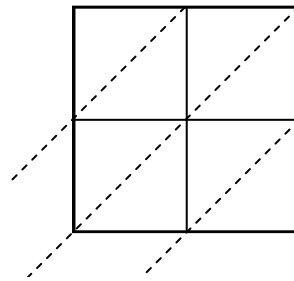
10) $54 \times 57 =$



11) $82 \times 47 =$



12) $13 \times 47 =$



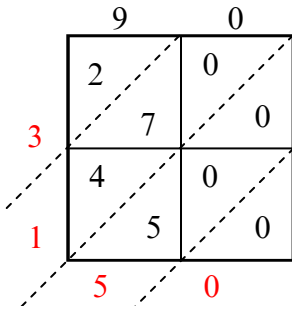
Ответы

1. _____
2. _____
3. _____
4. _____
5. _____
6. _____
7. _____
8. _____
9. _____
10. _____
11. _____
12. _____

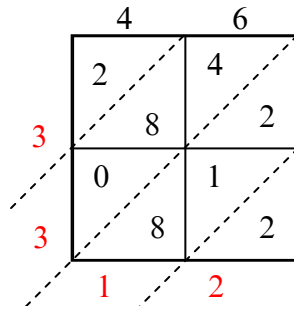


Используйте пространственную решетку для умножения, чтобы решить задачу.

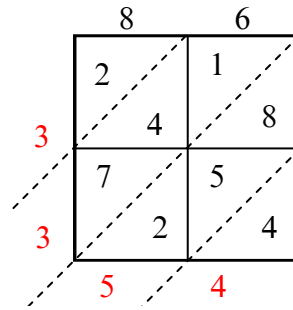
1) $90 \times 35 =$



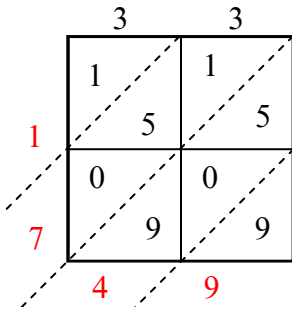
2) $46 \times 72 =$



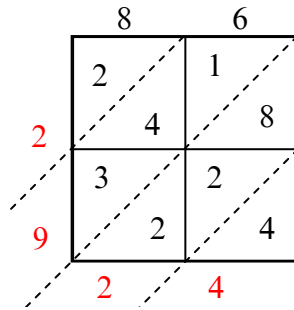
3) $86 \times 39 =$



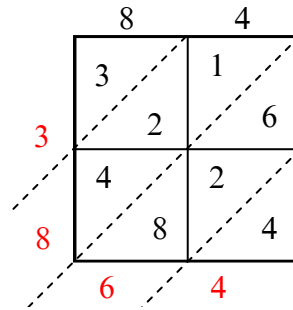
4) $33 \times 53 =$



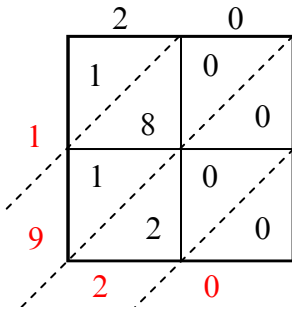
5) $86 \times 34 =$



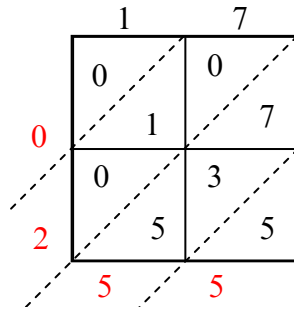
6) $84 \times 46 =$



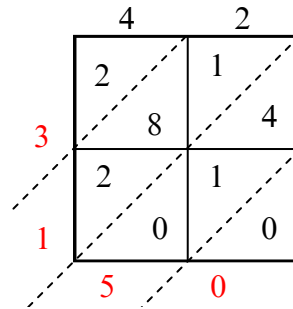
7) $20 \times 96 =$



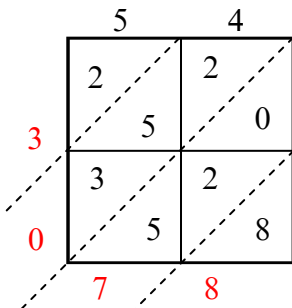
8) $17 \times 15 =$



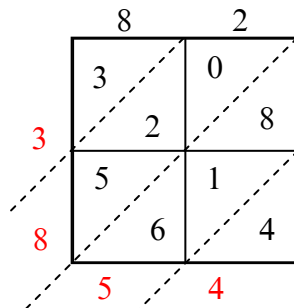
9) $42 \times 75 =$



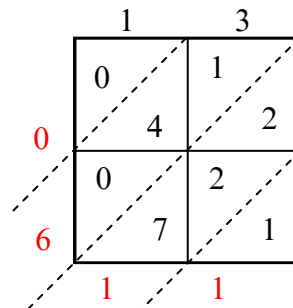
10) $54 \times 57 =$



11) $82 \times 47 =$



12) $13 \times 47 =$



Ответы

1. 3 150

2. 3 312

3. 3 354

4. 1 749

5. 2 924

6. 3 864

7. 1 920

8. 255

9. 3 150

10. 3 078

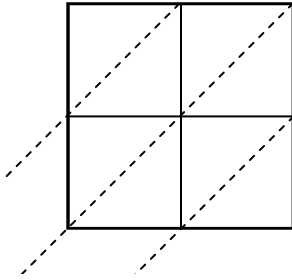
11. 3 854

12. 611

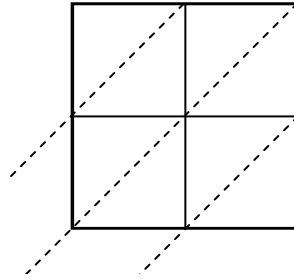


Используйте пространственную решетку для умножения, чтобы решить задачу.

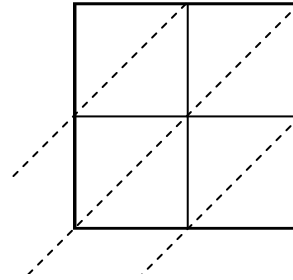
1) $25 \times 78 =$



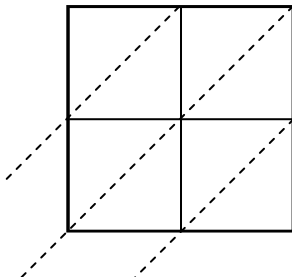
2) $49 \times 80 =$



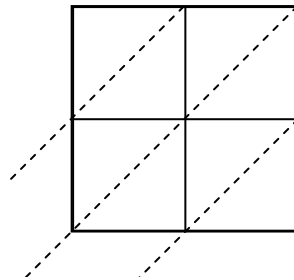
3) $97 \times 57 =$



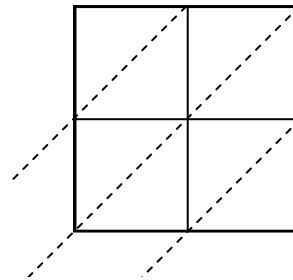
4) $70 \times 15 =$



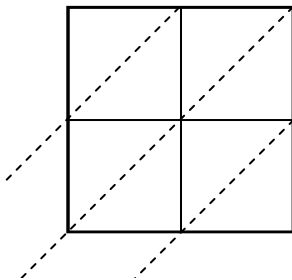
5) $94 \times 56 =$



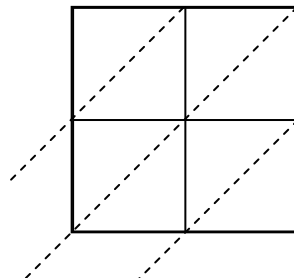
6) $44 \times 92 =$



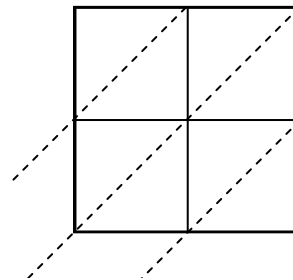
7) $61 \times 84 =$



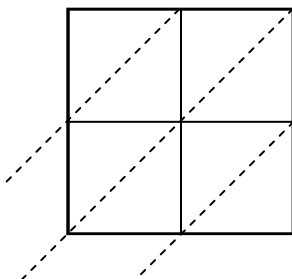
8) $82 \times 28 =$



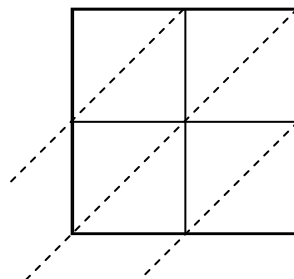
9) $84 \times 15 =$



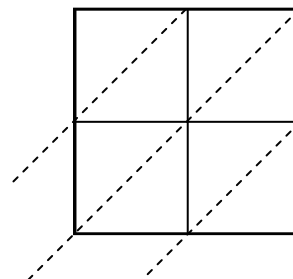
10) $67 \times 33 =$



11) $25 \times 36 =$



12) $19 \times 94 =$



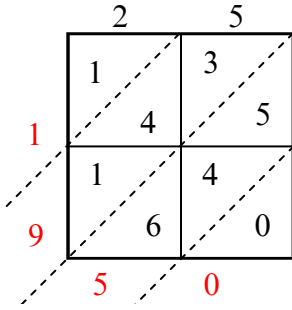
Ответы

1. _____
2. _____
3. _____
4. _____
5. _____
6. _____
7. _____
8. _____
9. _____
10. _____
11. _____
12. _____

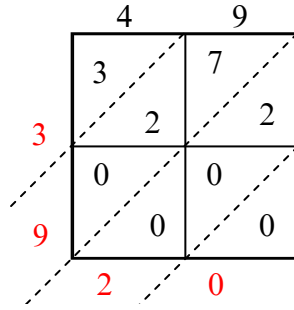


Используйте пространственную решетку для умножения, чтобы решить задачу.

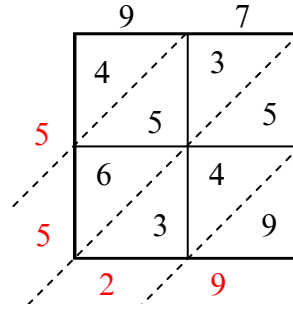
1) $25 \times 78 =$



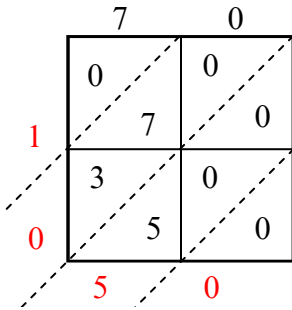
2) $49 \times 80 =$



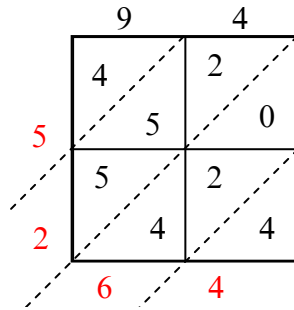
3) $97 \times 57 =$



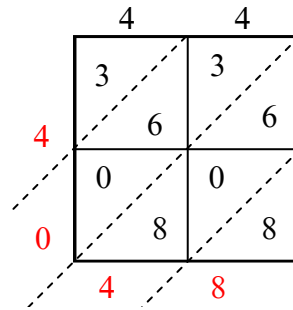
4) $70 \times 15 =$



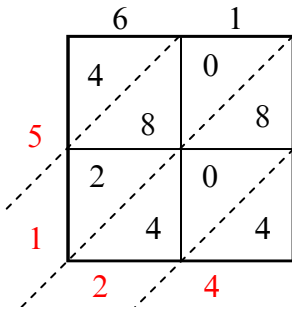
5) $94 \times 56 =$



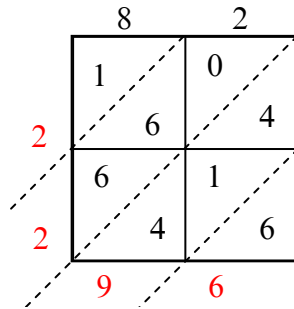
6) $44 \times 92 =$



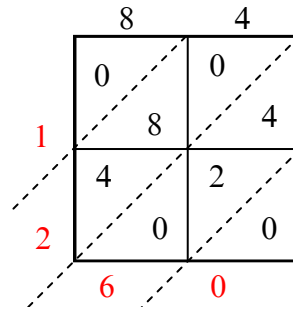
7) $61 \times 84 =$



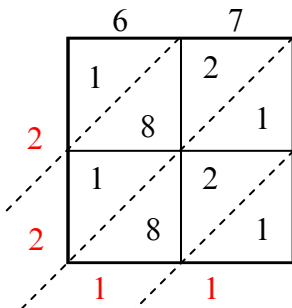
8) $82 \times 28 =$



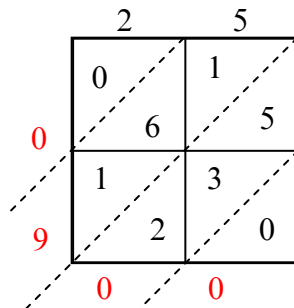
9) $84 \times 15 =$



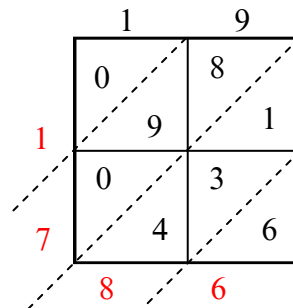
10) $67 \times 33 =$



11) $25 \times 36 =$



12) $19 \times 94 =$



Ответы

1. 1 950

2. 3 920

3. 5 529

4. 1 050

5. 5 264

6. 4 048

7. 5 124

8. 2 296

9. 1 260

10. 2 211

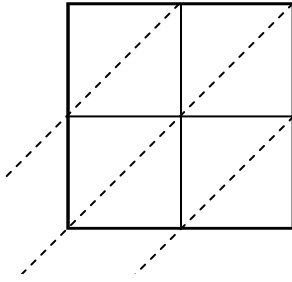
11. 900

12. 1 786

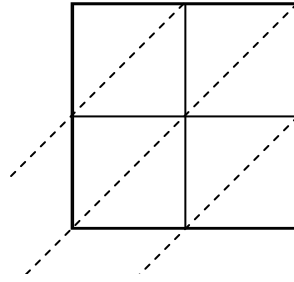


Используйте пространственную решетку для умножения, чтобы решить задачу.

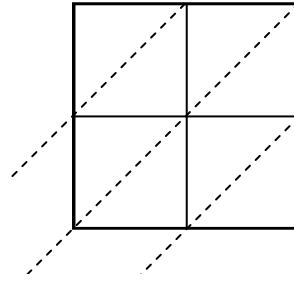
1) $76 \times 68 =$



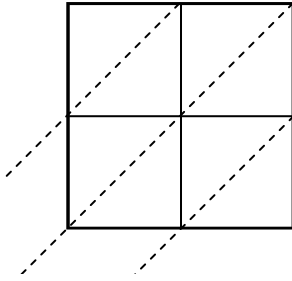
2) $37 \times 53 =$



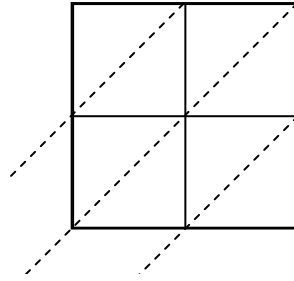
3) $92 \times 64 =$



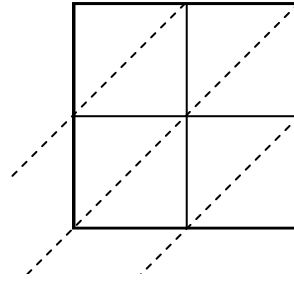
4) $23 \times 67 =$



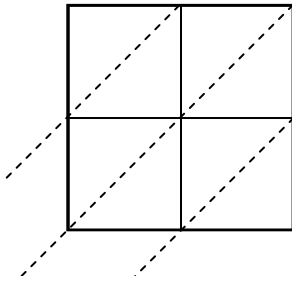
5) $36 \times 54 =$



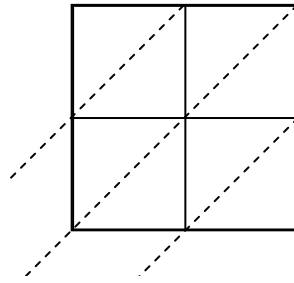
6) $21 \times 28 =$



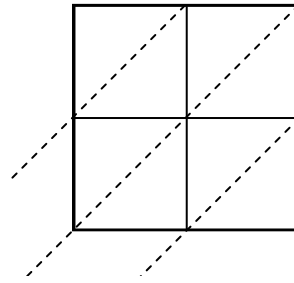
7) $64 \times 68 =$



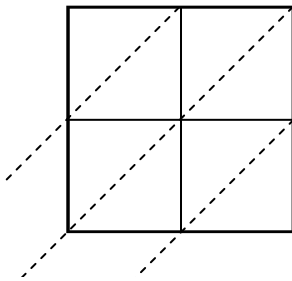
8) $71 \times 35 =$



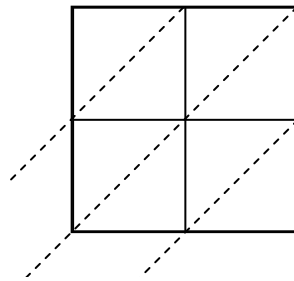
9) $14 \times 92 =$



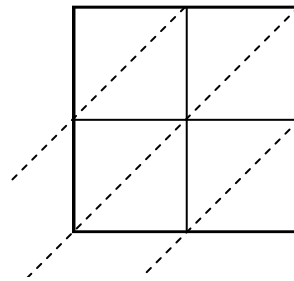
10) $83 \times 50 =$



11) $41 \times 67 =$



12) $97 \times 83 =$



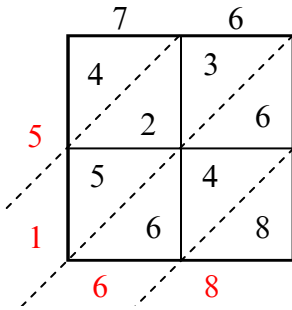
Ответы

1. _____
2. _____
3. _____
4. _____
5. _____
6. _____
7. _____
8. _____
9. _____
10. _____
11. _____
12. _____

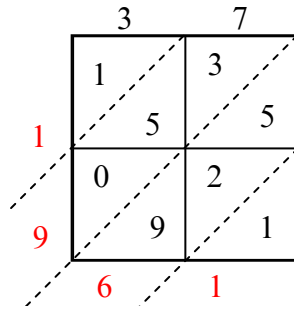


Используйте пространственную решетку для умножения, чтобы решить задачу.

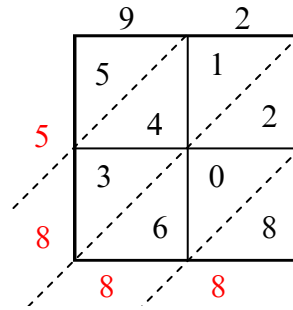
1) $76 \times 68 =$



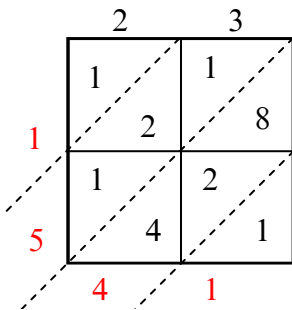
2) $37 \times 53 =$



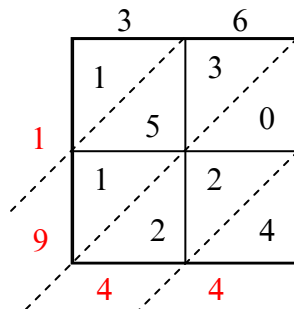
3) $92 \times 64 =$



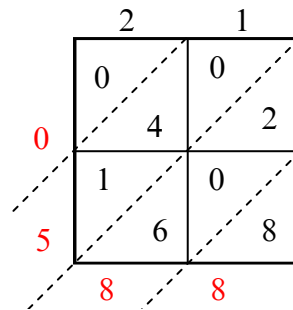
4) $23 \times 67 =$



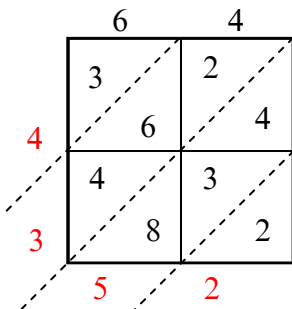
5) $36 \times 54 =$



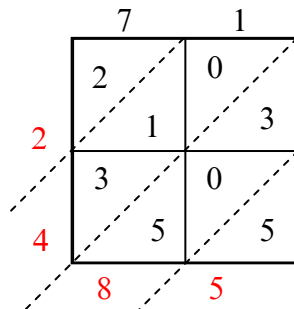
6) $21 \times 28 =$



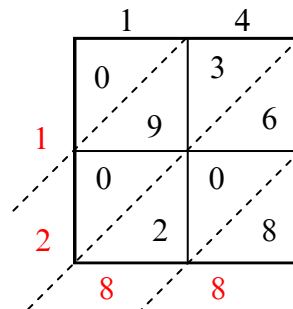
7) $64 \times 68 =$



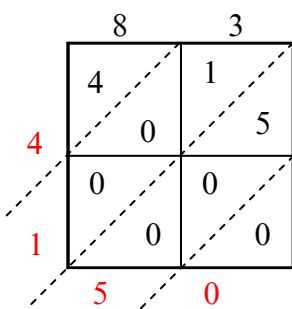
8) $71 \times 35 =$



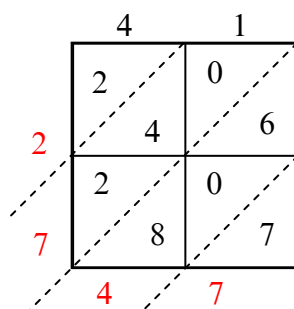
9) $14 \times 92 =$



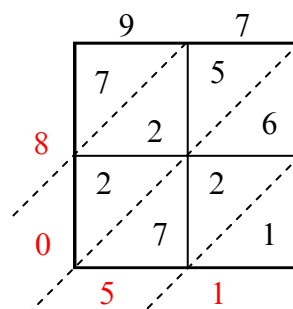
10) $83 \times 50 =$



11) $41 \times 67 =$



12) $97 \times 83 =$



Ответы

1. 5 168

2. 1 961

3. 5 888

4. 1 541

5. 1 944

6. 588

7. 4 352

8. 2 485

9. 1 288

10. 4 150

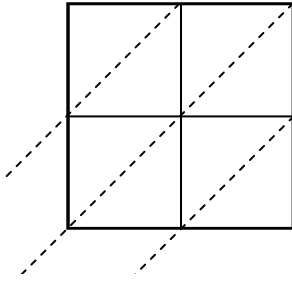
11. 2 747

12. 8 051

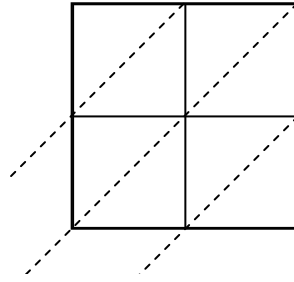


Используйте пространственную решетку для умножения, чтобы решить задачу.

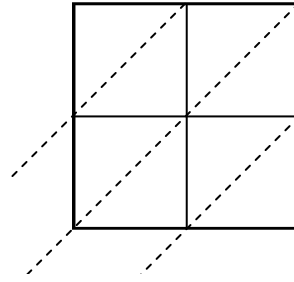
1) $30 \times 94 =$



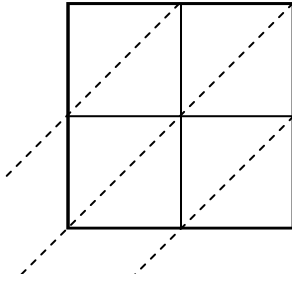
2) $36 \times 35 =$



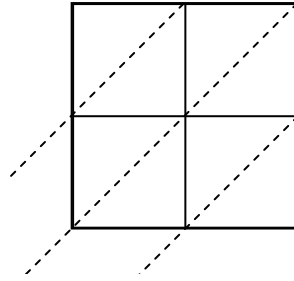
3) $92 \times 86 =$



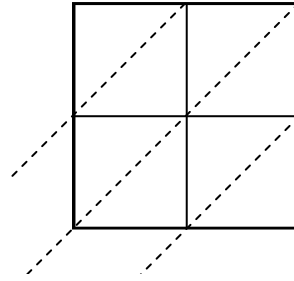
4) $16 \times 57 =$



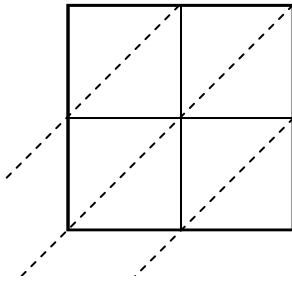
5) $73 \times 79 =$



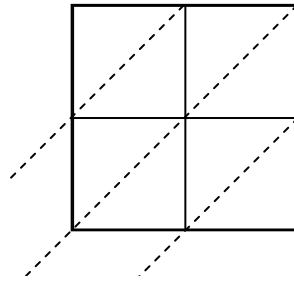
6) $53 \times 45 =$



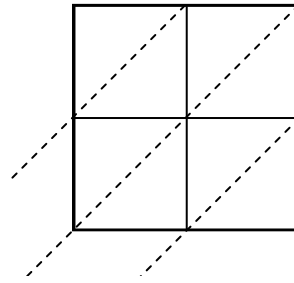
7) $59 \times 35 =$



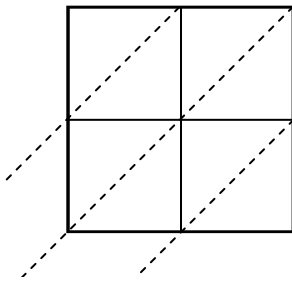
8) $32 \times 28 =$



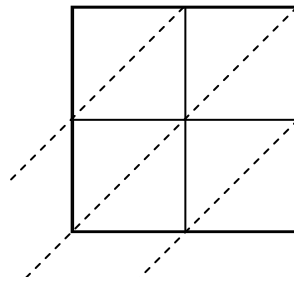
9) $92 \times 54 =$



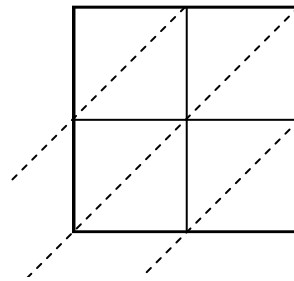
10) $63 \times 85 =$



11) $81 \times 99 =$



12) $31 \times 64 =$



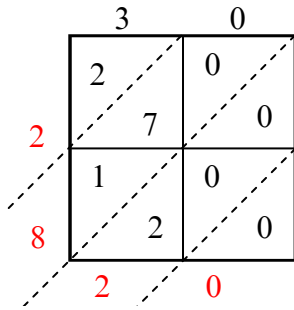
Ответы

1. _____
2. _____
3. _____
4. _____
5. _____
6. _____
7. _____
8. _____
9. _____
10. _____
11. _____
12. _____

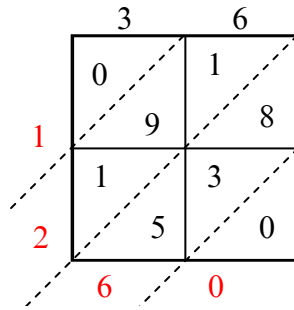


Используйте пространственную решетку для умножения, чтобы решить задачу.

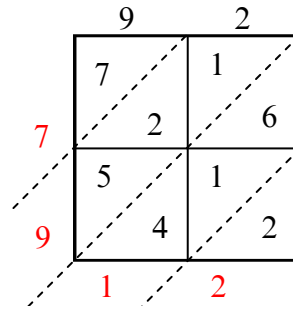
1) $30 \times 94 =$



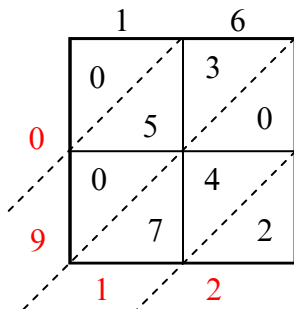
2) $36 \times 35 =$



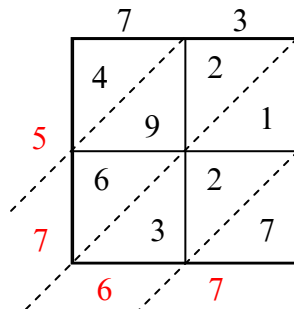
3) $92 \times 86 =$



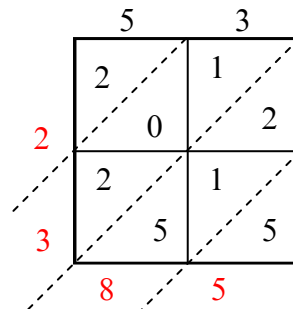
4) $16 \times 57 =$



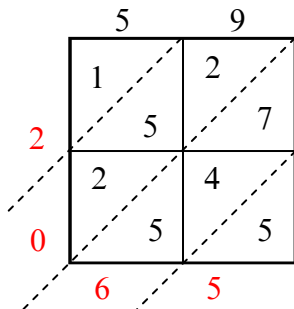
5) $73 \times 79 =$



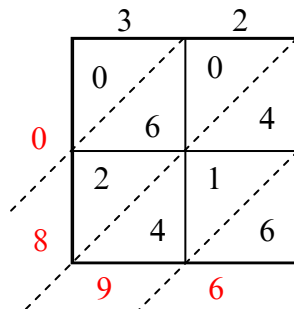
6) $53 \times 45 =$



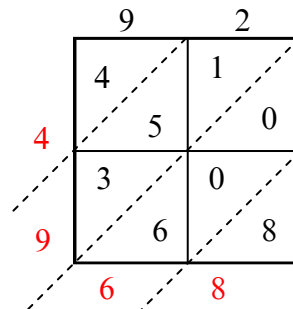
7) $59 \times 35 =$



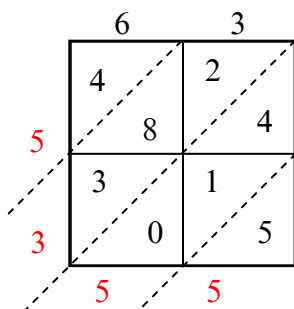
8) $32 \times 28 =$



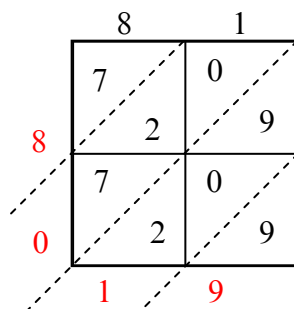
9) $92 \times 54 =$



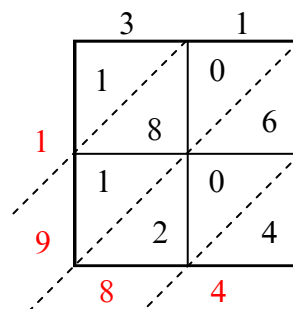
10) $63 \times 85 =$



11) $81 \times 99 =$



12) $31 \times 64 =$



Ответы

1. 2 820

2. 1 260

3. 7 912

4. 912

5. 5 767

6. 2 385

7. 2 065

8. 896

9. 4 968

10. 5 355

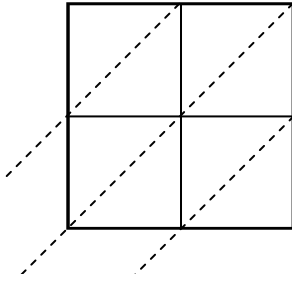
11. 8 019

12. 1 984

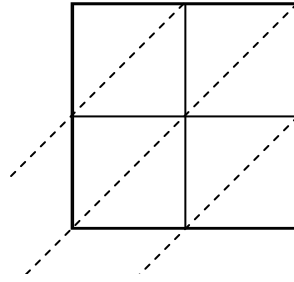


Используйте пространственную решетку для умножения, чтобы решить задачу.

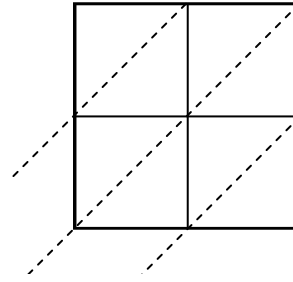
1) $13 \times 91 =$



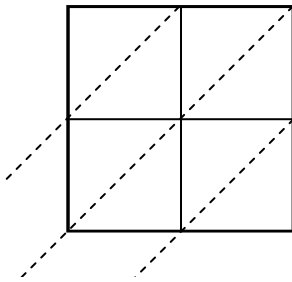
2) $29 \times 78 =$



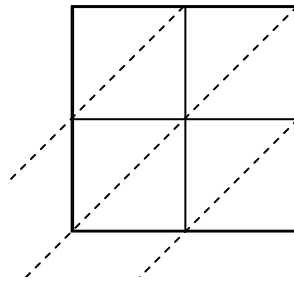
3) $47 \times 42 =$



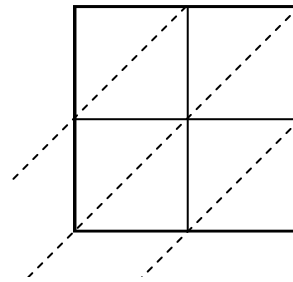
4) $79 \times 65 =$



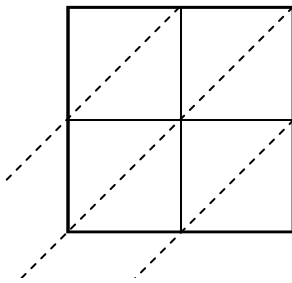
5) $68 \times 35 =$



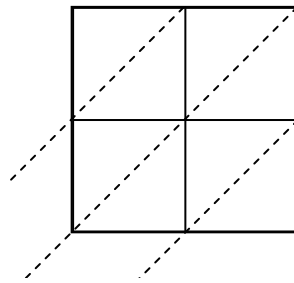
6) $43 \times 70 =$



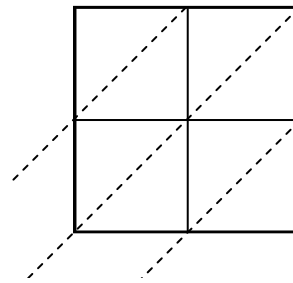
7) $97 \times 54 =$



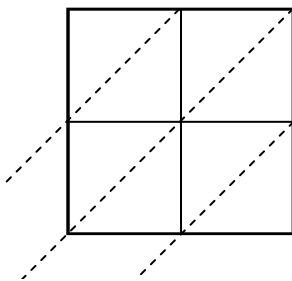
8) $96 \times 56 =$



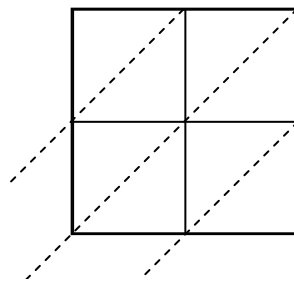
9) $16 \times 42 =$



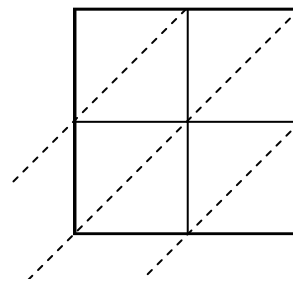
10) $11 \times 31 =$



11) $27 \times 74 =$



12) $55 \times 49 =$



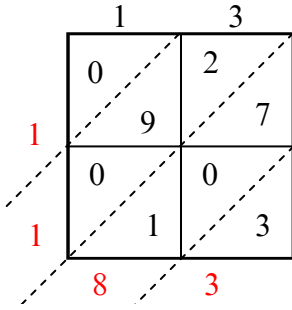
Ответы

1. _____
2. _____
3. _____
4. _____
5. _____
6. _____
7. _____
8. _____
9. _____
10. _____
11. _____
12. _____

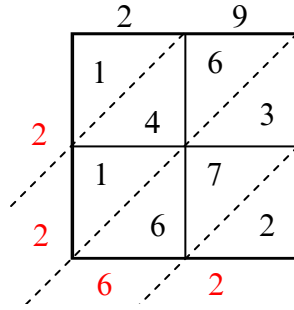


Используйте пространственную решетку для умножения, чтобы решить задачу.

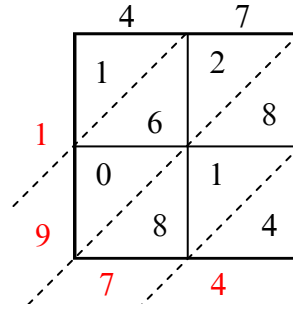
1) $13 \times 91 =$



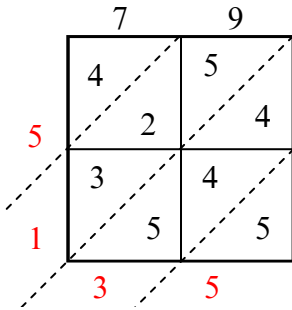
2) $29 \times 78 =$



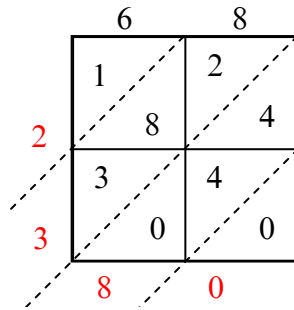
3) $47 \times 42 =$



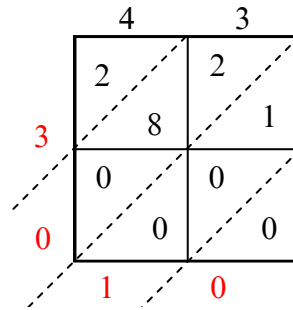
4) $79 \times 65 =$



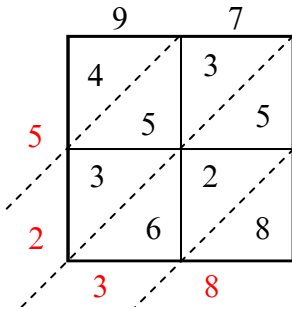
5) $68 \times 35 =$



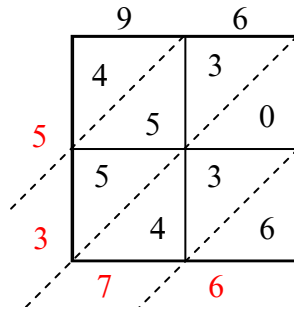
6) $43 \times 70 =$



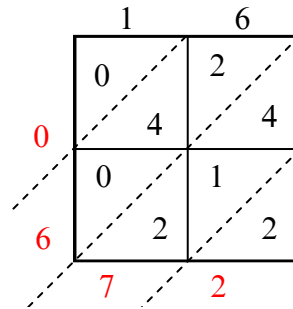
7) $97 \times 54 =$



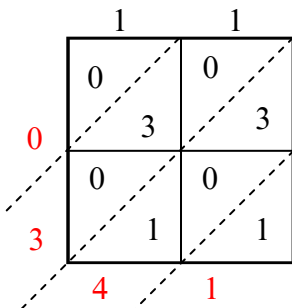
8) $96 \times 56 =$



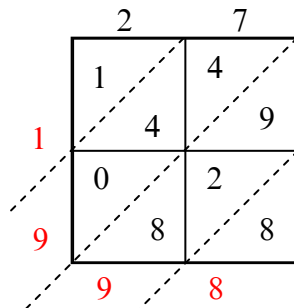
9) $16 \times 42 =$



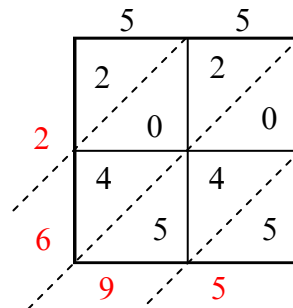
10) $11 \times 31 =$



11) $27 \times 74 =$



12) $55 \times 49 =$



Ответы

1. 1 183

2. 2 262

3. 1 974

4. 5 135

5. 2 380

6. 3 010

7. 5 238

8. 5 376

9. 672

10. 341

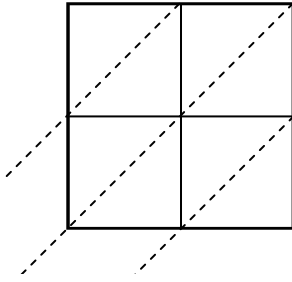
11. 1 998

12. 2 695

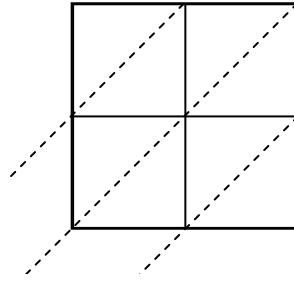


Используйте пространственную решетку для умножения, чтобы решить задачу.

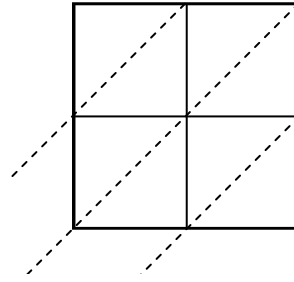
1) $55 \times 50 =$



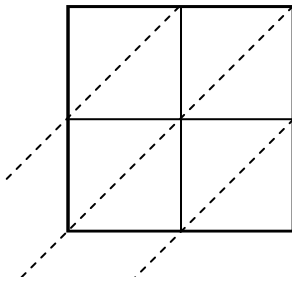
2) $60 \times 86 =$



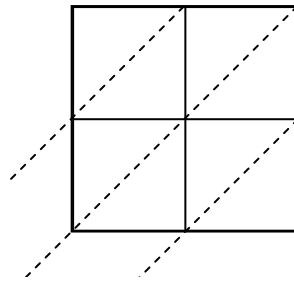
3) $38 \times 41 =$



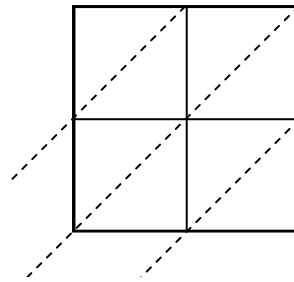
4) $85 \times 69 =$



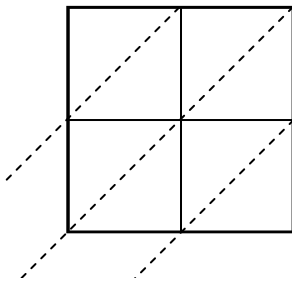
5) $66 \times 58 =$



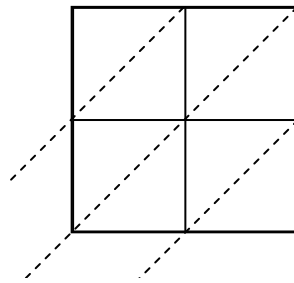
6) $47 \times 65 =$



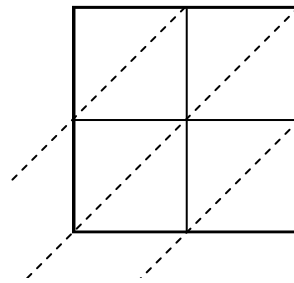
7) $91 \times 19 =$



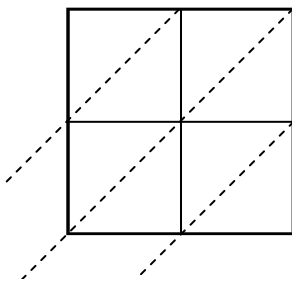
8) $55 \times 60 =$



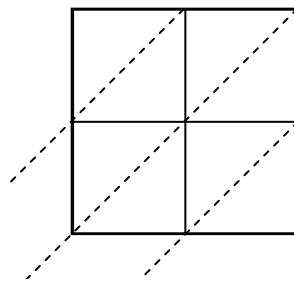
9) $20 \times 68 =$



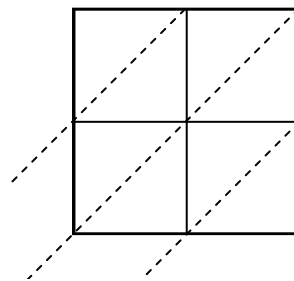
10) $84 \times 86 =$



11) $75 \times 33 =$



12) $64 \times 37 =$



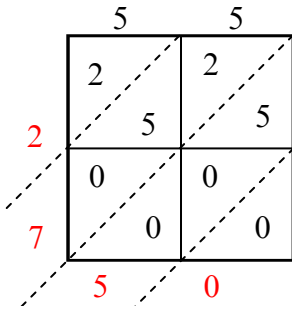
Ответы

1. _____
2. _____
3. _____
4. _____
5. _____
6. _____
7. _____
8. _____
9. _____
10. _____
11. _____
12. _____

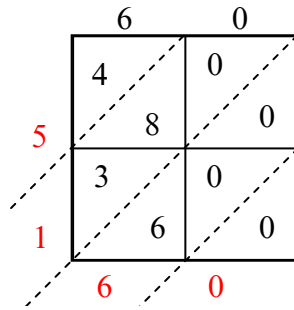


Используйте пространственную решетку для умножения, чтобы решить задачу.

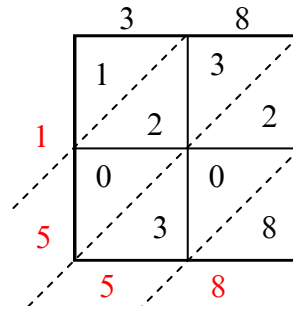
1) $55 \times 50 =$



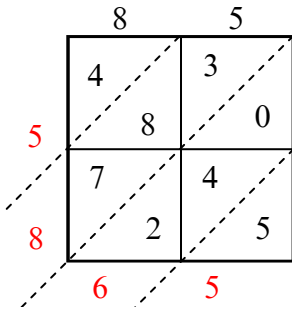
2) $60 \times 86 =$



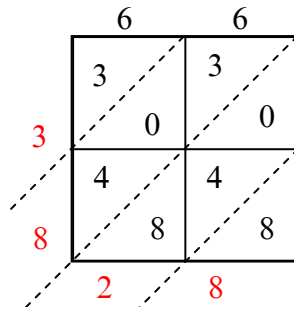
3) $38 \times 41 =$



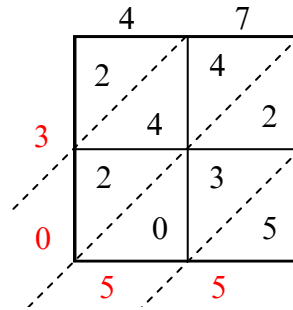
4) $85 \times 69 =$



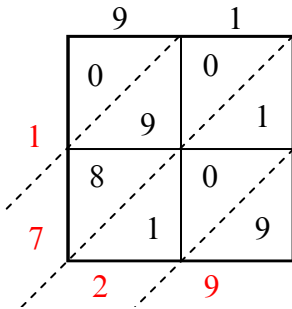
5) $66 \times 58 =$



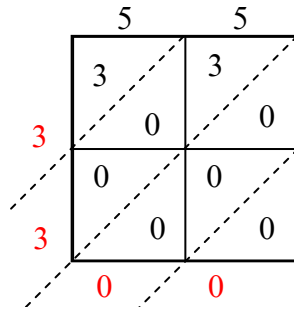
6) $47 \times 65 =$



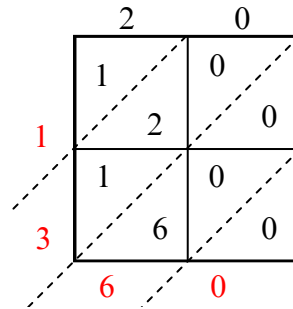
7) $91 \times 19 =$



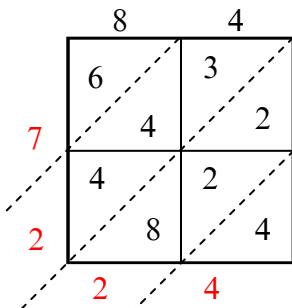
8) $55 \times 60 =$



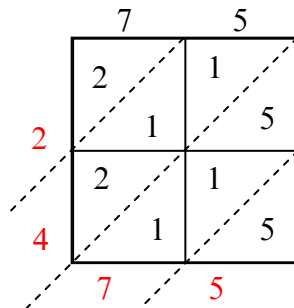
9) $20 \times 68 =$



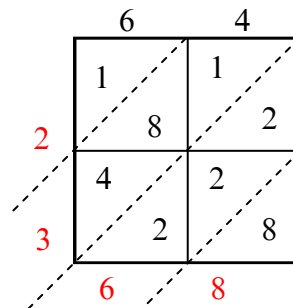
10) $84 \times 86 =$



11) $75 \times 33 =$



12) $64 \times 37 =$



Ответы

1. 2 750

2. 5 160

3. 1 558

4. 5 865

5. 3 828

6. 3 055

7. 1 729

8. 3 300

9. 1 360

10. 7 224

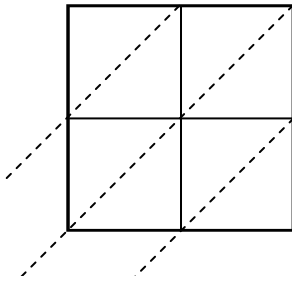
11. 2 475

12. 2 368

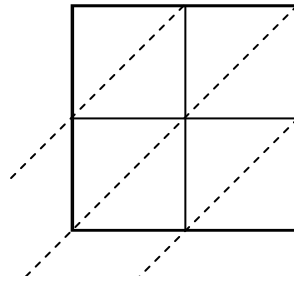


Используйте пространственную решетку для умножения, чтобы решить задачу.

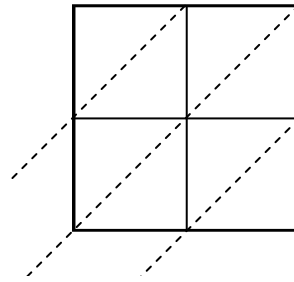
1) $29 \times 38 =$



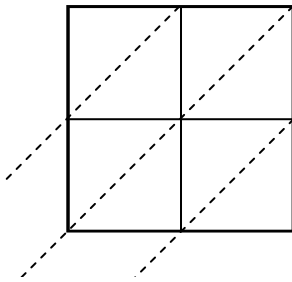
2) $81 \times 15 =$



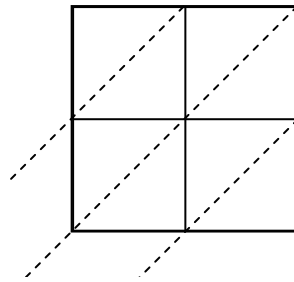
3) $33 \times 43 =$



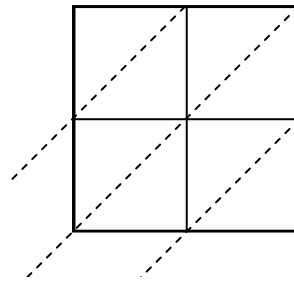
4) $36 \times 52 =$



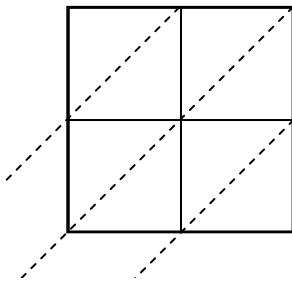
5) $38 \times 92 =$



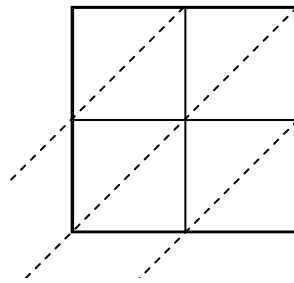
6) $30 \times 42 =$



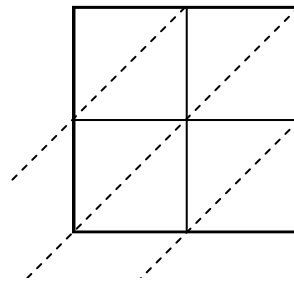
7) $19 \times 36 =$



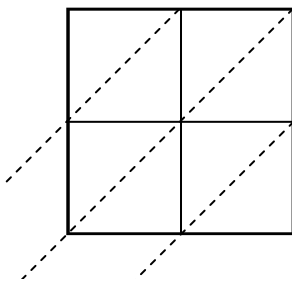
8) $15 \times 82 =$



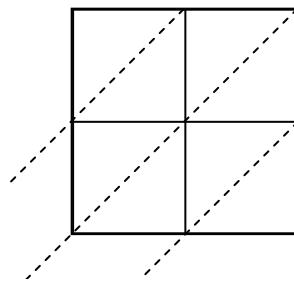
9) $86 \times 41 =$



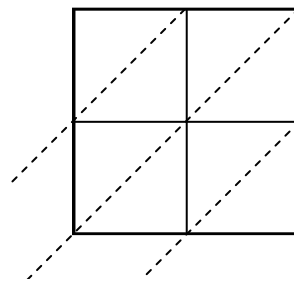
10) $78 \times 48 =$



11) $33 \times 47 =$



12) $83 \times 36 =$



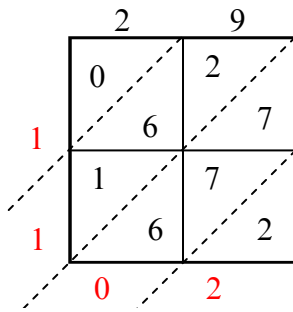
Ответы

1. _____
2. _____
3. _____
4. _____
5. _____
6. _____
7. _____
8. _____
9. _____
10. _____
11. _____
12. _____

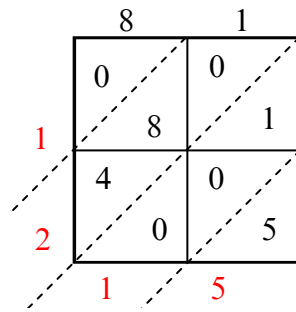


Используйте пространственную решетку для умножения, чтобы решить задачу.

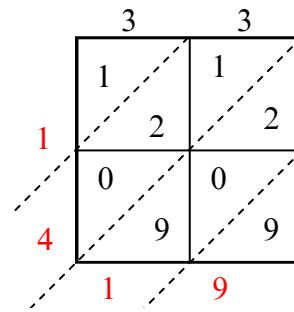
1) $29 \times 38 =$



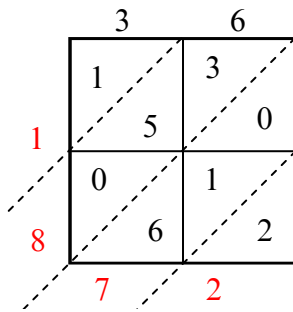
2) $81 \times 15 =$



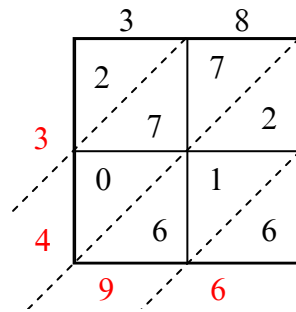
3) $33 \times 43 =$



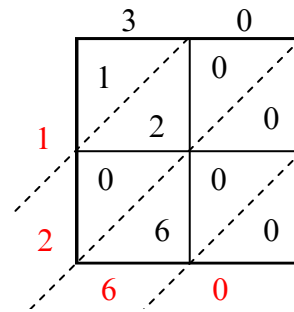
4) $36 \times 52 =$



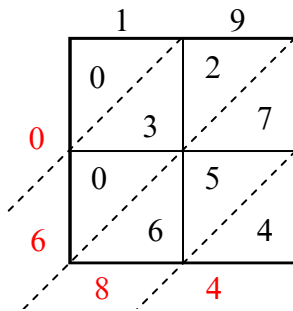
5) $38 \times 92 =$



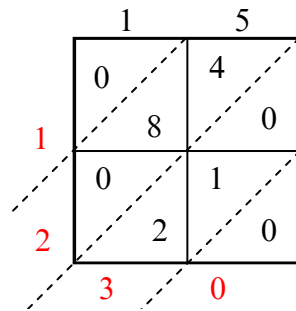
6) $30 \times 42 =$



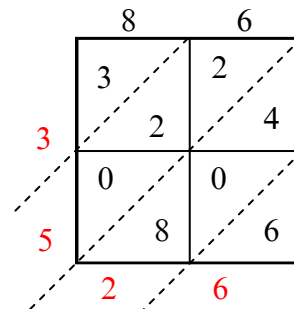
7) $19 \times 36 =$



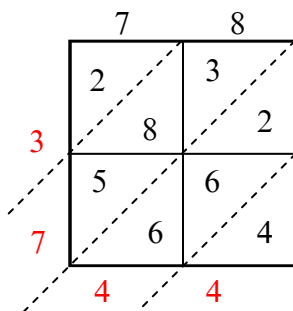
8) $15 \times 82 =$



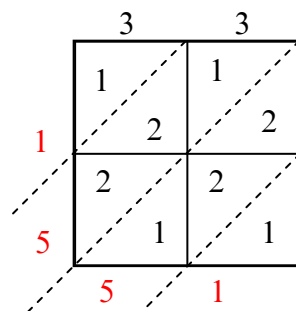
9) $86 \times 41 =$



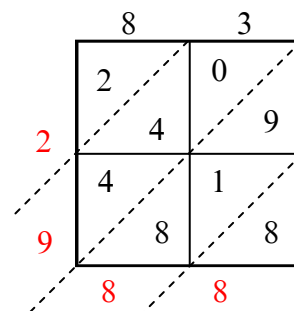
10) $78 \times 48 =$



11) $33 \times 47 =$



12) $83 \times 36 =$



Отвeты

1. 1 102

2. 1 215

3. 1 419

4. 1 872

5. 3 496

6. 1 260

7. 684

8. 1 230

9. 3 526

10. 3 744

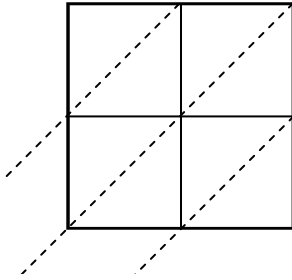
11. 1 551

12. 2 988

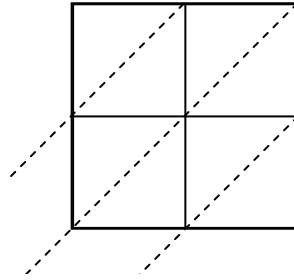


Используйте пространственную решетку для умножения, чтобы решить задачу.

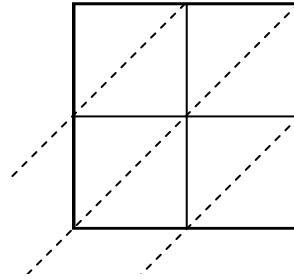
1) $26 \times 40 =$



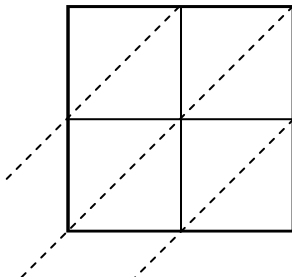
2) $66 \times 78 =$



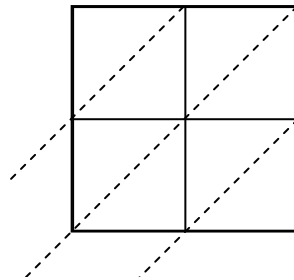
3) $84 \times 60 =$



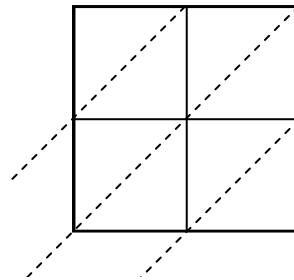
4) $90 \times 31 =$



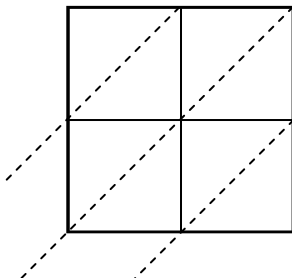
5) $89 \times 87 =$



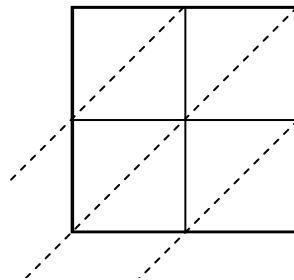
6) $64 \times 89 =$



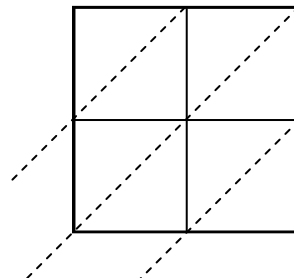
7) $37 \times 84 =$



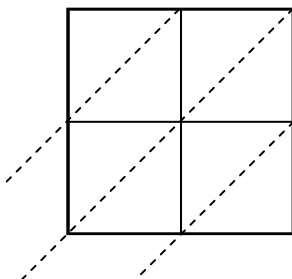
8) $53 \times 14 =$



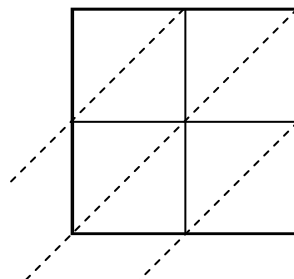
9) $61 \times 58 =$



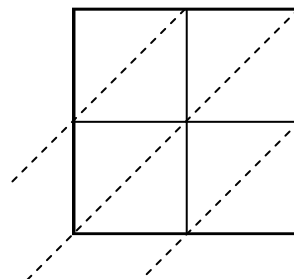
10) $77 \times 62 =$



11) $68 \times 64 =$



12) $21 \times 84 =$



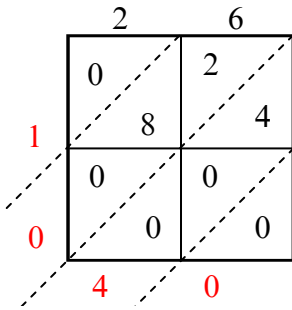
Ответы

1. _____
2. _____
3. _____
4. _____
5. _____
6. _____
7. _____
8. _____
9. _____
10. _____
11. _____
12. _____

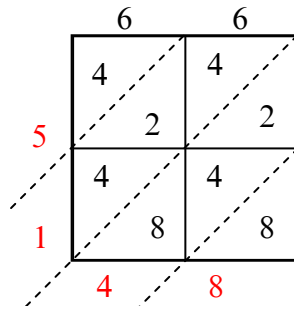


Используйте пространственную решетку для умножения, чтобы решить задачу.

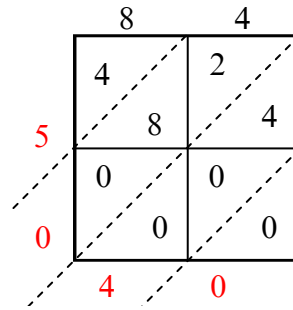
1) $26 \times 40 =$



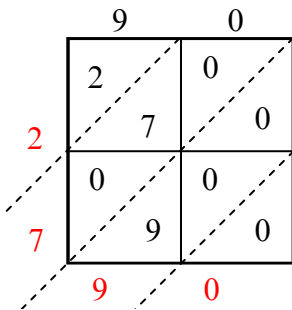
2) $66 \times 78 =$



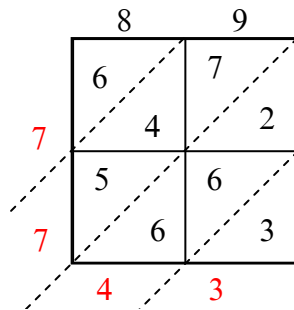
3) $84 \times 60 =$



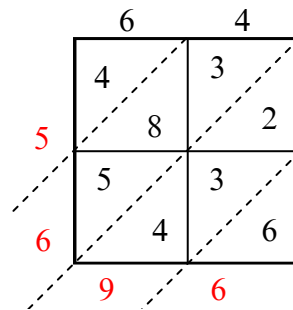
4) $90 \times 31 =$



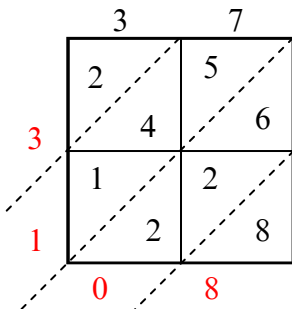
5) $89 \times 87 =$



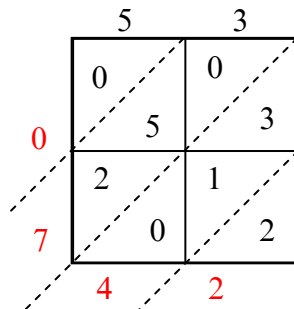
6) $64 \times 89 =$



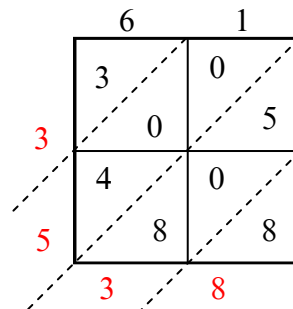
7) $37 \times 84 =$



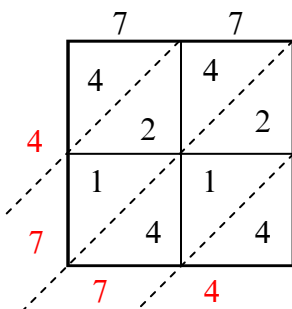
8) $53 \times 14 =$



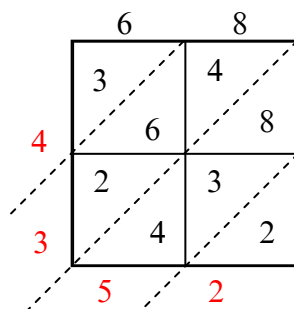
9) $61 \times 58 =$



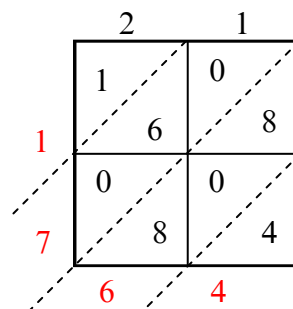
10) $77 \times 62 =$



11) $68 \times 64 =$



12) $21 \times 84 =$



Отвeты

1. 1 040

2. 5 148

3. 5 040

4. 2 790

5. 7 743

6. 5 696

7. 3 108

8. 742

9. 3 538

10. 4 774

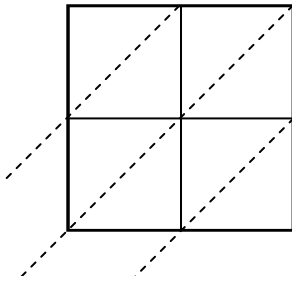
11. 4 352

12. 1 764

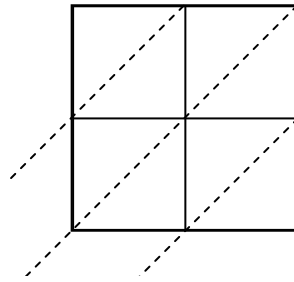


Используйте пространственную решетку для умножения, чтобы решить задачу.

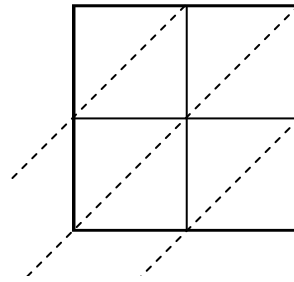
1) $25 \times 71 =$



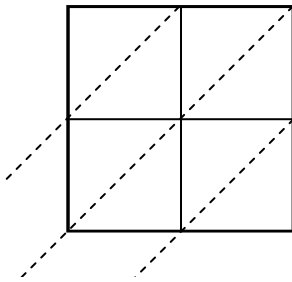
2) $28 \times 47 =$



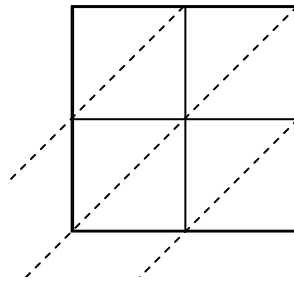
3) $86 \times 92 =$



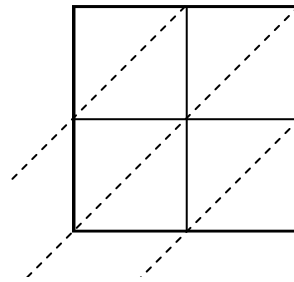
4) $41 \times 74 =$



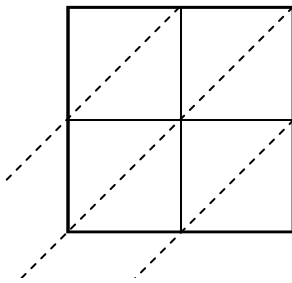
5) $27 \times 26 =$



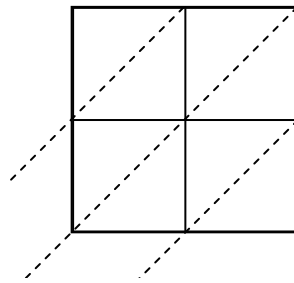
6) $85 \times 35 =$



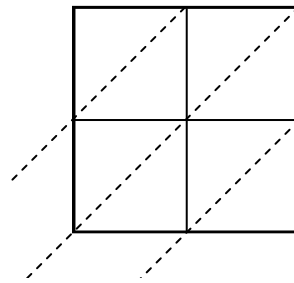
7) $49 \times 38 =$



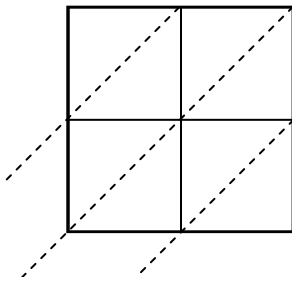
8) $67 \times 71 =$



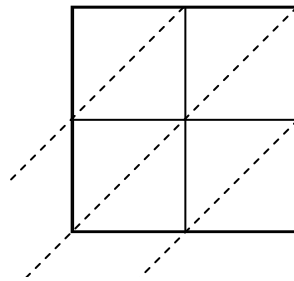
9) $35 \times 68 =$



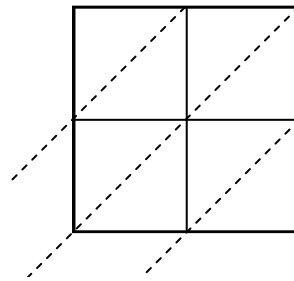
10) $29 \times 13 =$



11) $96 \times 13 =$



12) $58 \times 93 =$



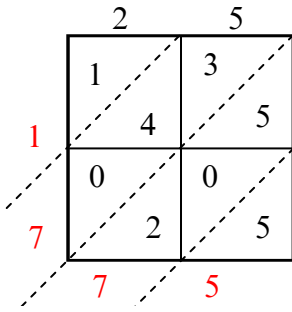
Ответы

1. _____
2. _____
3. _____
4. _____
5. _____
6. _____
7. _____
8. _____
9. _____
10. _____
11. _____
12. _____

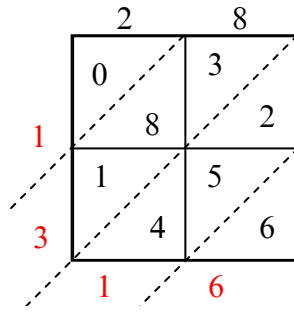


Используйте пространственную решетку для умножения, чтобы решить задачу.

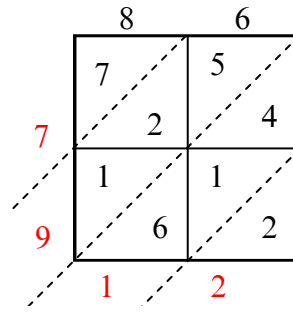
1) $25 \times 71 =$



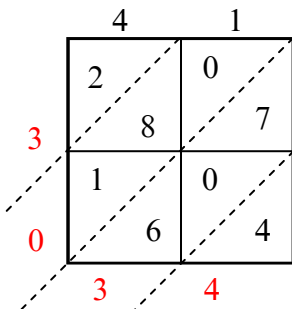
2) $28 \times 47 =$



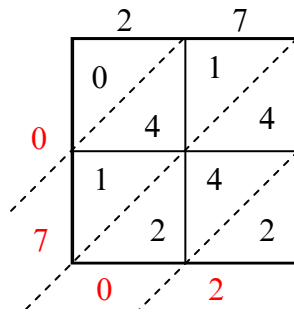
3) $86 \times 92 =$



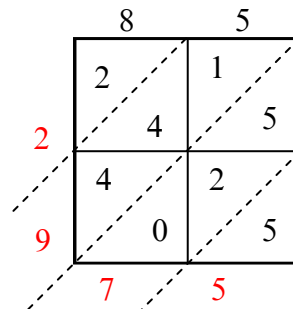
4) $41 \times 74 =$



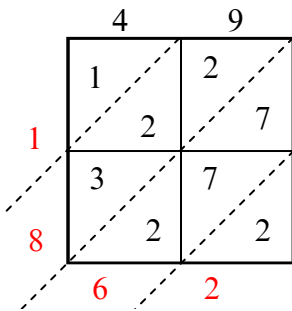
5) $27 \times 26 =$



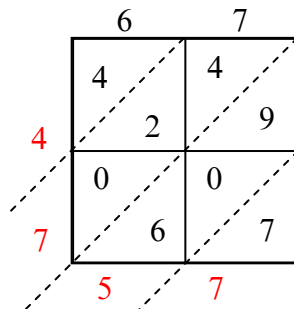
6) $85 \times 35 =$



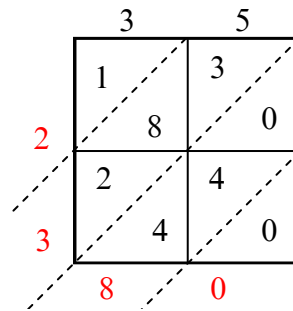
7) $49 \times 38 =$



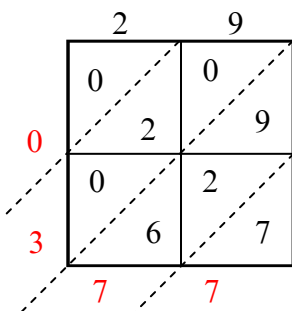
8) $67 \times 71 =$



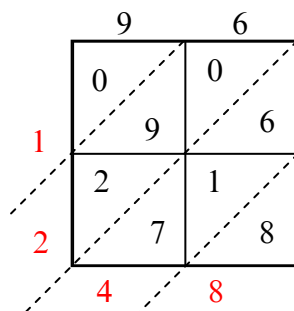
9) $35 \times 68 =$



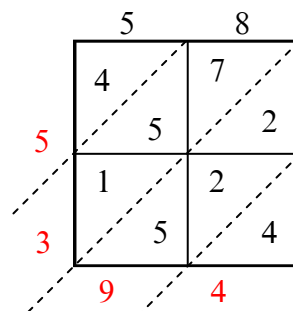
10) $29 \times 13 =$



11) $96 \times 13 =$



12) $58 \times 93 =$



Ответы

1. 1 775

2. 1 316

3. 7 912

4. 3 034

5. 702

6. 2 975

7. 1 862

8. 4 757

9. 2 380

10. 377

11. 1 248

12. 5 394