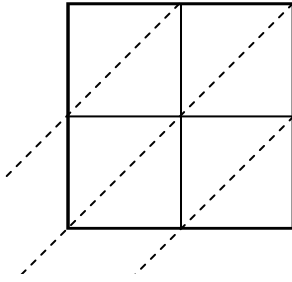


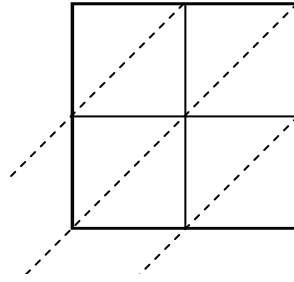


Используйте пространственную решетку для умножения, чтобы решить задачу.

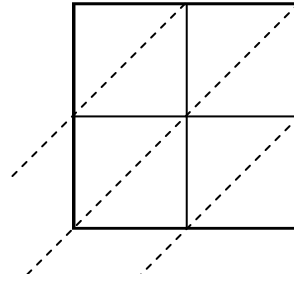
1) $26 \times 40 =$



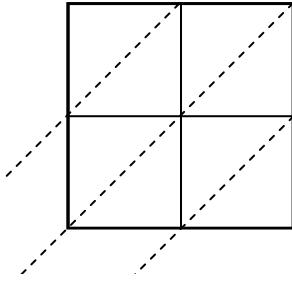
2) $66 \times 78 =$



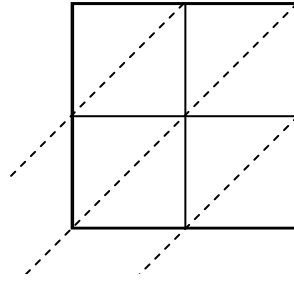
3) $84 \times 60 =$



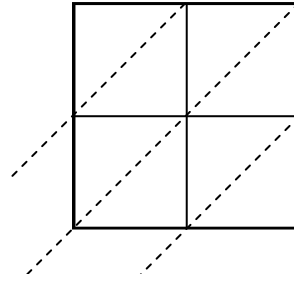
4) $90 \times 31 =$



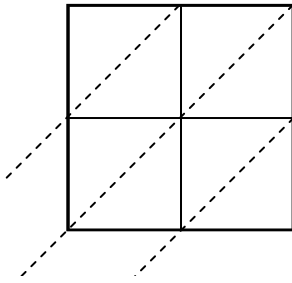
5) $89 \times 87 =$



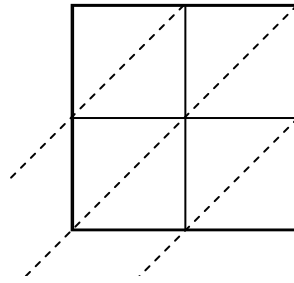
6) $64 \times 89 =$



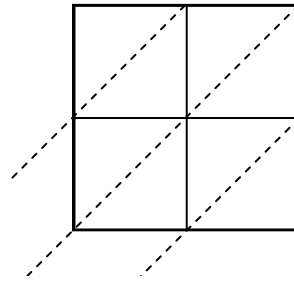
7) $37 \times 84 =$



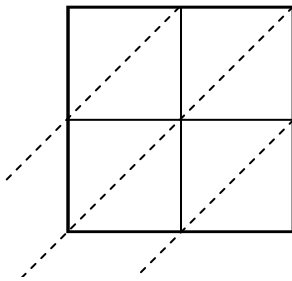
8) $53 \times 14 =$



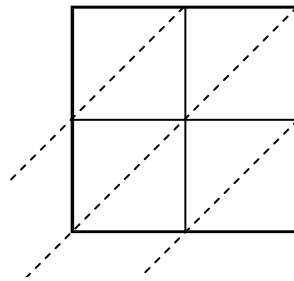
9) $61 \times 58 =$



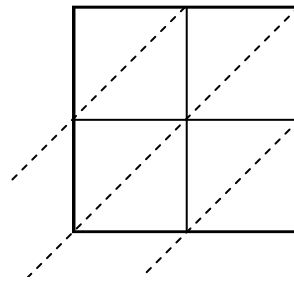
10) $77 \times 62 =$



11) $68 \times 64 =$



12) $21 \times 84 =$



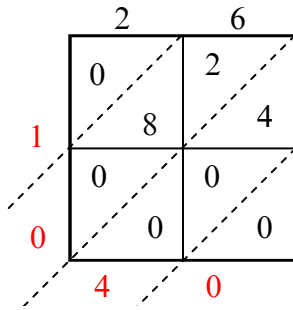
Ответы

1. _____
2. _____
3. _____
4. _____
5. _____
6. _____
7. _____
8. _____
9. _____
10. _____
11. _____
12. _____

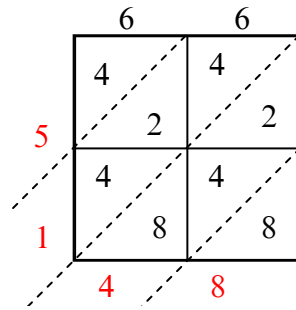


Используйте пространственную решетку для умножения, чтобы решить задачу.

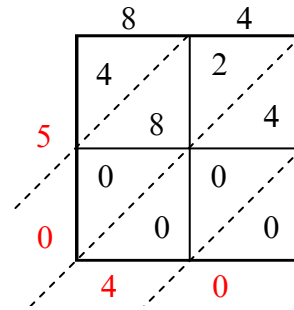
1) $26 \times 40 =$



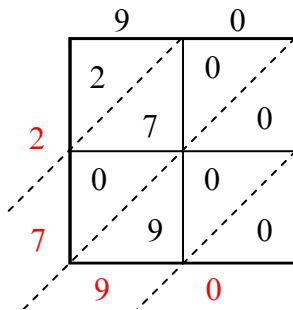
2) $66 \times 78 =$



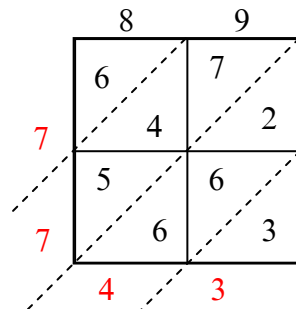
3) $84 \times 60 =$



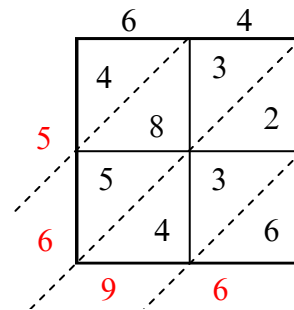
4) $90 \times 31 =$



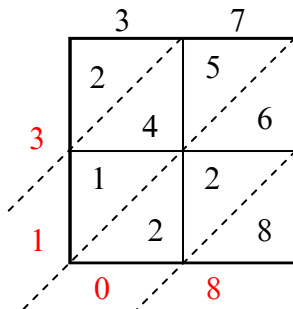
5) $89 \times 87 =$



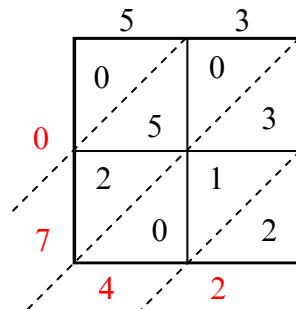
6) $64 \times 89 =$



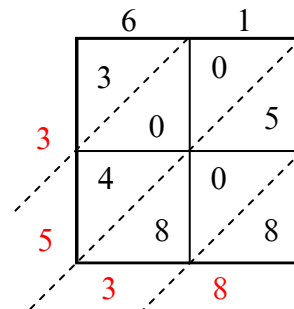
7) $37 \times 84 =$



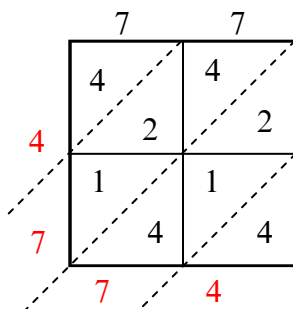
8) $53 \times 14 =$



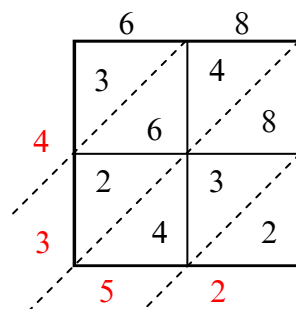
9) $61 \times 58 =$



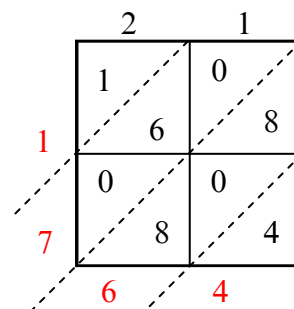
10) $77 \times 62 =$



11) $68 \times 64 =$



12) $21 \times 84 =$



Ответы

1. 1 040

2. 5 148

3. 5 040

4. 2 790

5. 7 743

6. 5 696

7. 3 108

8. 742

9. 3 538

10. 4 774

11. 4 352

12. 1 764