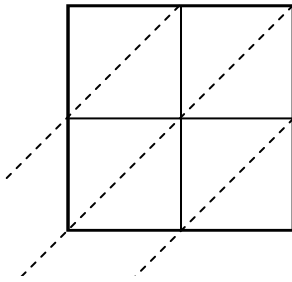


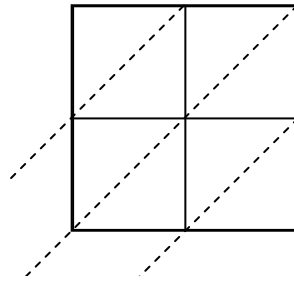


Используйте пространственную решетку для умножения, чтобы решить задачу.

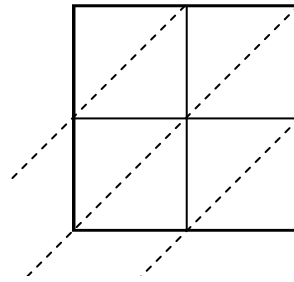
1)  $29 \times 38 =$



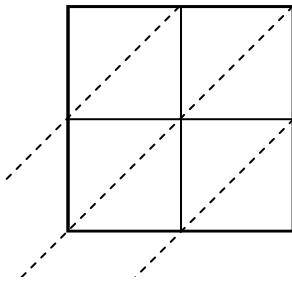
2)  $81 \times 15 =$



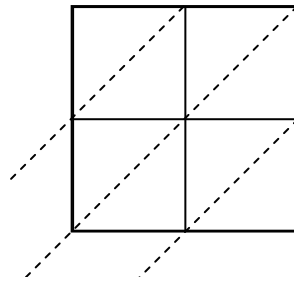
3)  $33 \times 43 =$



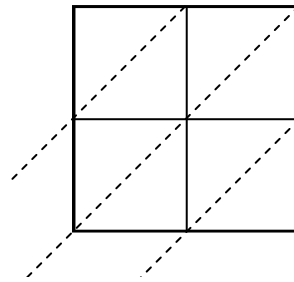
4)  $36 \times 52 =$



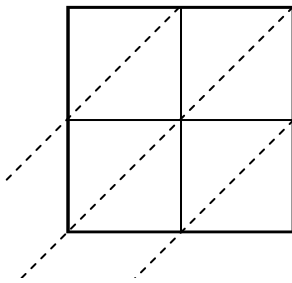
5)  $38 \times 92 =$



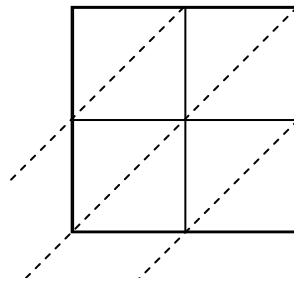
6)  $30 \times 42 =$



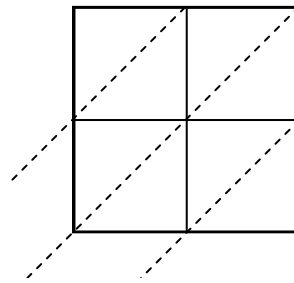
7)  $19 \times 36 =$



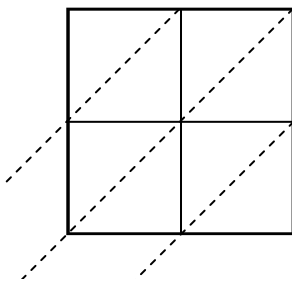
8)  $15 \times 82 =$



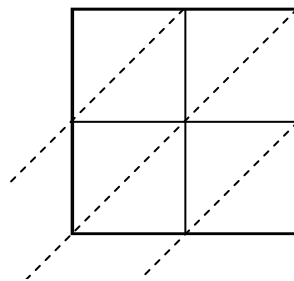
9)  $86 \times 41 =$



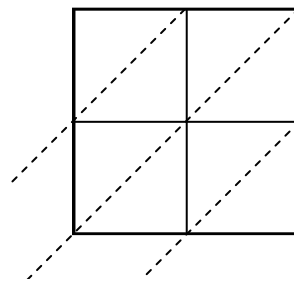
10)  $78 \times 48 =$



11)  $33 \times 47 =$



12)  $83 \times 36 =$



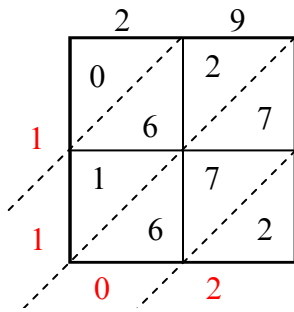
**Ответы**

1. \_\_\_\_\_
2. \_\_\_\_\_
3. \_\_\_\_\_
4. \_\_\_\_\_
5. \_\_\_\_\_
6. \_\_\_\_\_
7. \_\_\_\_\_
8. \_\_\_\_\_
9. \_\_\_\_\_
10. \_\_\_\_\_
11. \_\_\_\_\_
12. \_\_\_\_\_

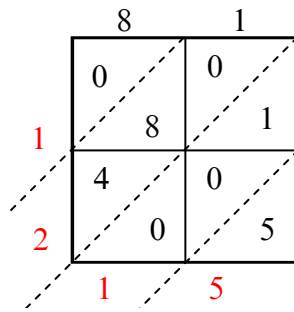


Используйте пространственную решетку для умножения, чтобы решить задачу.

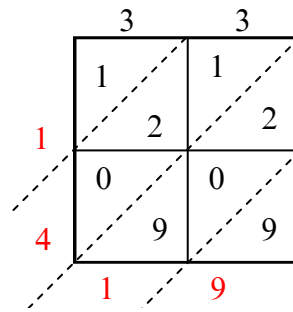
1)  $29 \times 38 =$



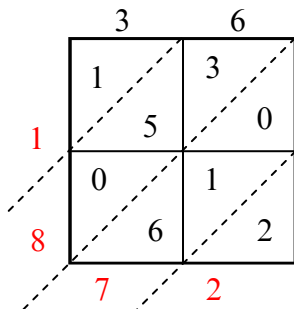
2)  $81 \times 15 =$



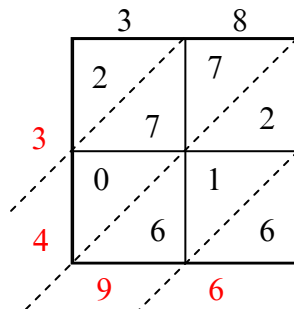
3)  $33 \times 43 =$



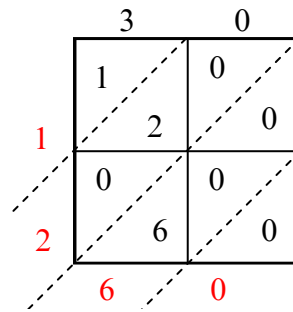
4)  $36 \times 52 =$



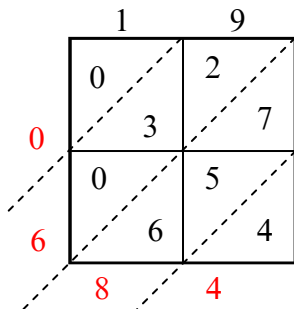
5)  $38 \times 92 =$



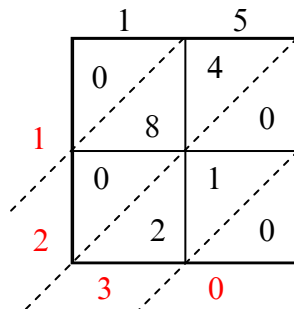
6)  $30 \times 42 =$



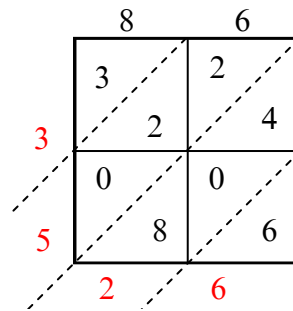
7)  $19 \times 36 =$



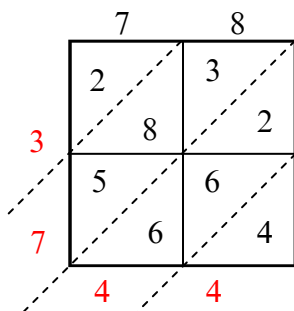
8)  $15 \times 82 =$



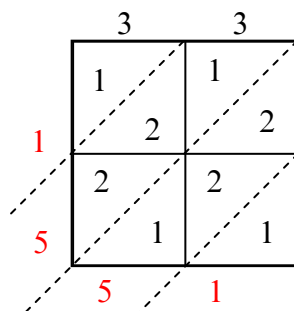
9)  $86 \times 41 =$



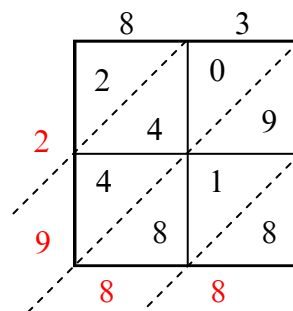
10)  $78 \times 48 =$



11)  $33 \times 47 =$



12)  $83 \times 36 =$



**Ответы**

1. 1 102

2. 1 215

3. 1 419

4. 1 872

5. 3 496

6. 1 260

7. 684

8. 1 230

9. 3 526

10. 3 744

11. 1 551

12. 2 988