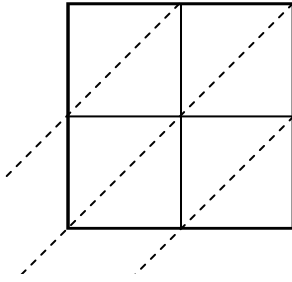


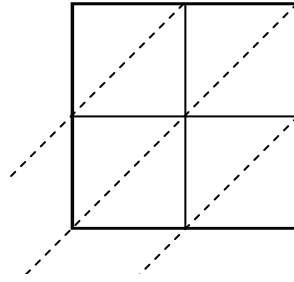


Используйте пространственную решетку для умножения, чтобы решить задачу.

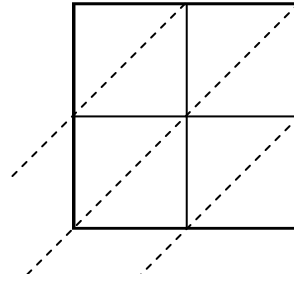
1) $55 \times 50 =$



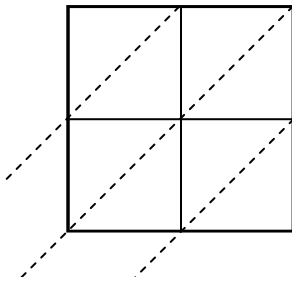
2) $60 \times 86 =$



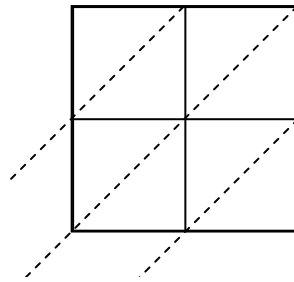
3) $38 \times 41 =$



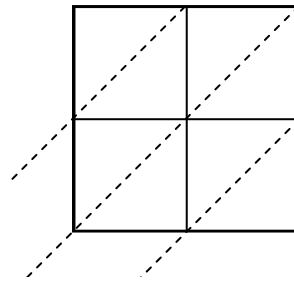
4) $85 \times 69 =$



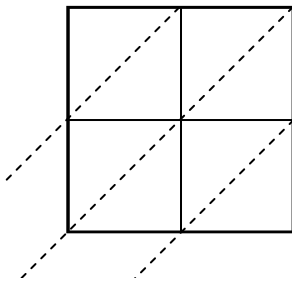
5) $66 \times 58 =$



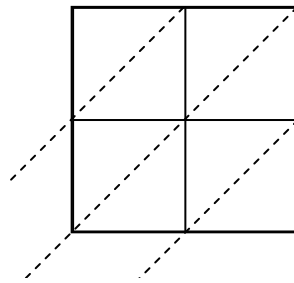
6) $47 \times 65 =$



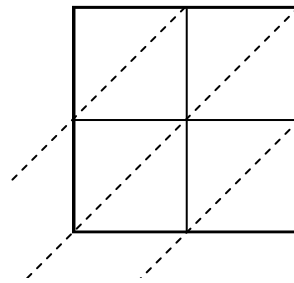
7) $91 \times 19 =$



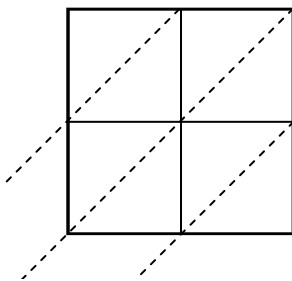
8) $55 \times 60 =$



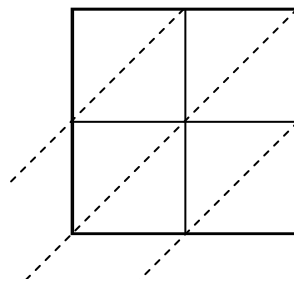
9) $20 \times 68 =$



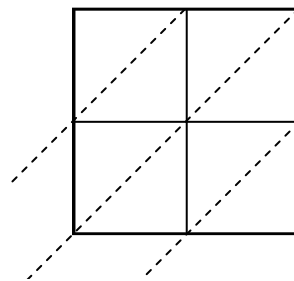
10) $84 \times 86 =$



11) $75 \times 33 =$



12) $64 \times 37 =$



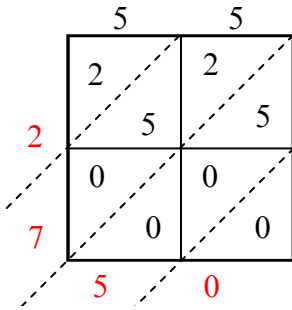
Ответы

1. _____
2. _____
3. _____
4. _____
5. _____
6. _____
7. _____
8. _____
9. _____
10. _____
11. _____
12. _____

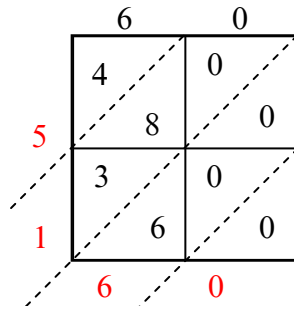


Используйте пространственную решетку для умножения, чтобы решить задачу.

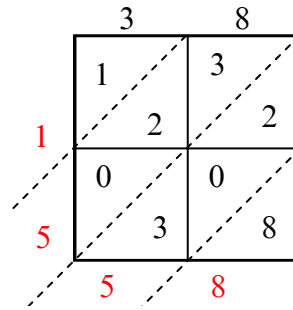
1) $55 \times 50 =$



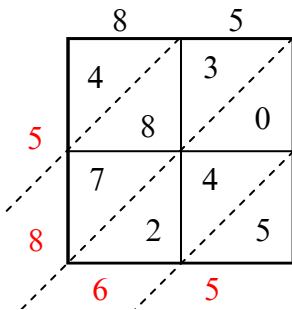
2) $60 \times 86 =$



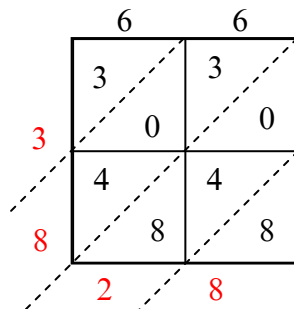
3) $38 \times 41 =$



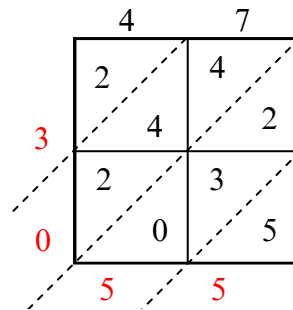
4) $85 \times 69 =$



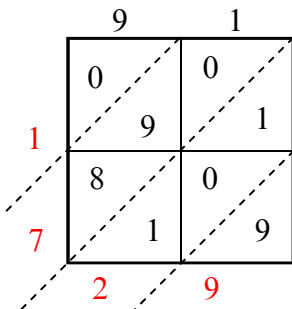
5) $66 \times 58 =$



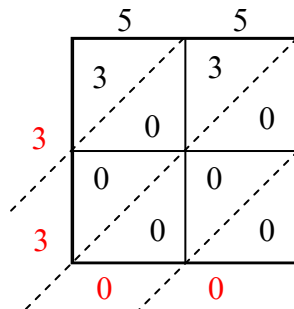
6) $47 \times 65 =$



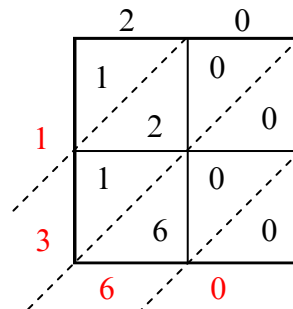
7) $91 \times 19 =$



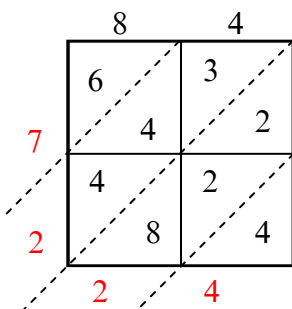
8) $55 \times 60 =$



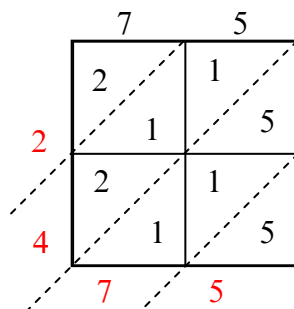
9) $20 \times 68 =$



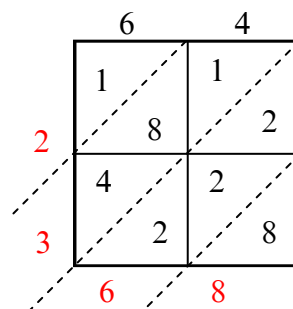
10) $84 \times 86 =$



11) $75 \times 33 =$



12) $64 \times 37 =$



Ответы

1. 2 750

2. 5 160

3. 1 558

4. 5 865

5. 3 828

6. 3 055

7. 1 729

8. 3 300

9. 1 360

10. 7 224

11. 2 475

12. 2 368