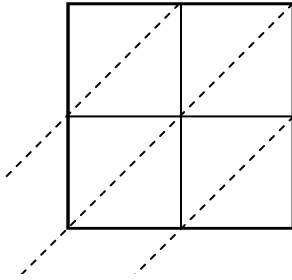


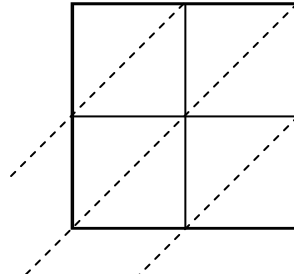


Используйте пространственную решетку для умножения, чтобы решить задачу.

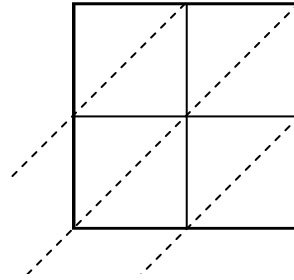
1) $13 \times 91 =$



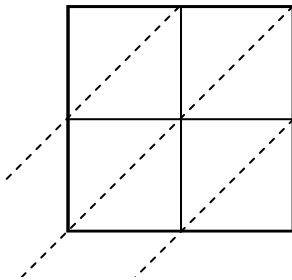
2) $29 \times 78 =$



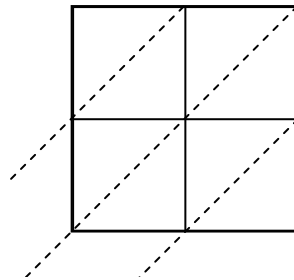
3) $47 \times 42 =$



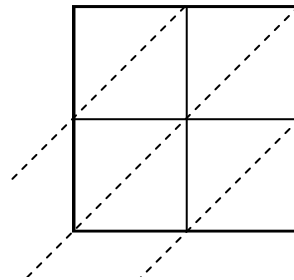
4) $79 \times 65 =$



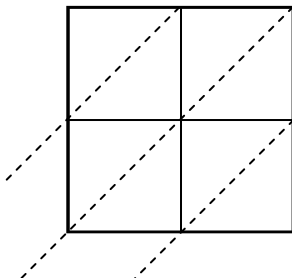
5) $68 \times 35 =$



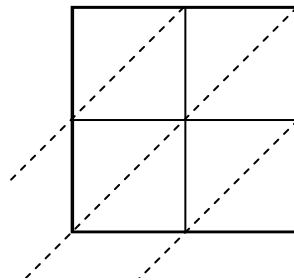
6) $43 \times 70 =$



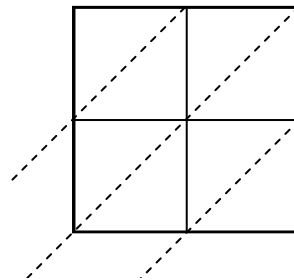
7) $97 \times 54 =$



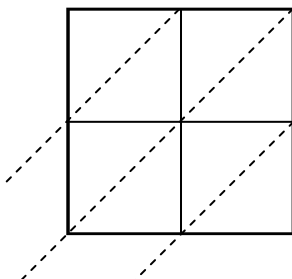
8) $96 \times 56 =$



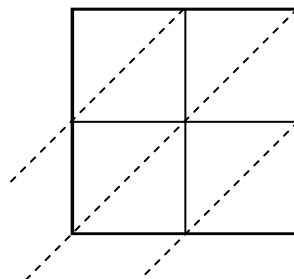
9) $16 \times 42 =$



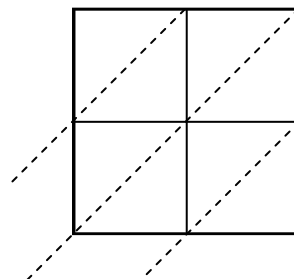
10) $11 \times 31 =$



11) $27 \times 74 =$



12) $55 \times 49 =$



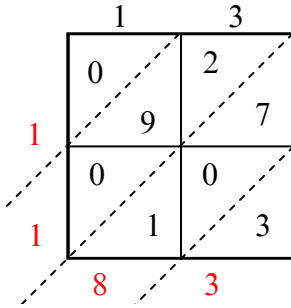
Ответы

1. _____
2. _____
3. _____
4. _____
5. _____
6. _____
7. _____
8. _____
9. _____
10. _____
11. _____
12. _____

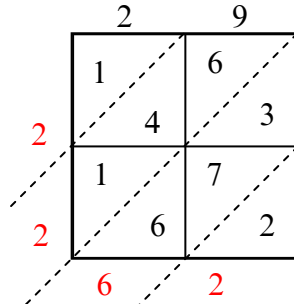


Используйте пространственную решетку для умножения, чтобы решить задачу.

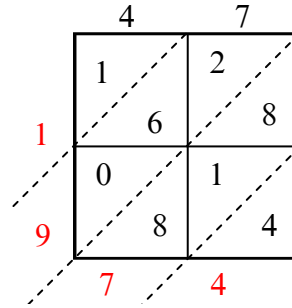
1) $13 \times 91 =$



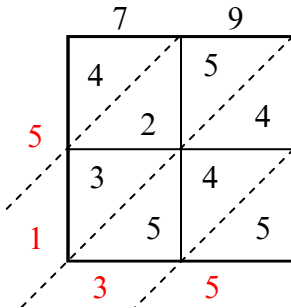
2) $29 \times 78 =$



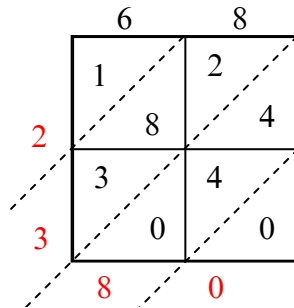
3) $47 \times 42 =$



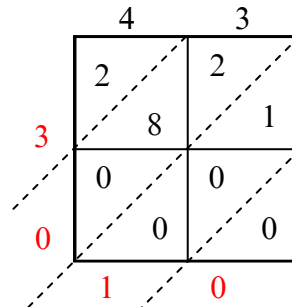
4) $79 \times 65 =$



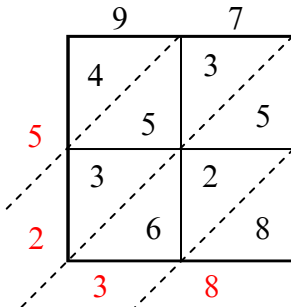
5) $68 \times 35 =$



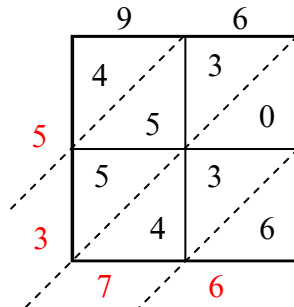
6) $43 \times 70 =$



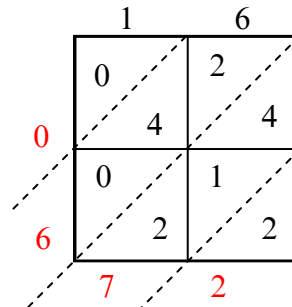
7) $97 \times 54 =$



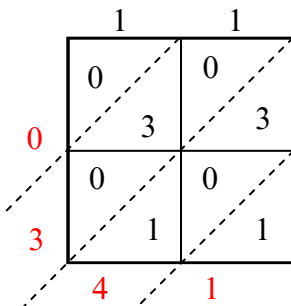
8) $96 \times 56 =$



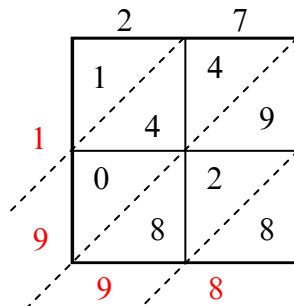
9) $16 \times 42 =$



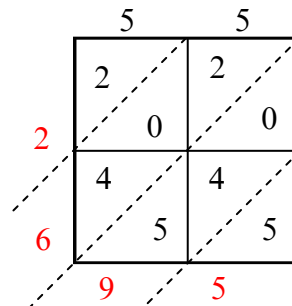
10) $11 \times 31 =$



11) $27 \times 74 =$



12) $55 \times 49 =$



Ответы

1. 1 183

2. 2 262

3. 1 974

4. 5 135

5. 2 380

6. 3 010

7. 5 238

8. 5 376

9. 672

10. 341

11. 1 998

12. 2 695