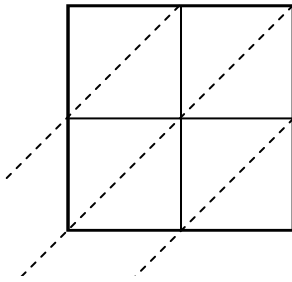


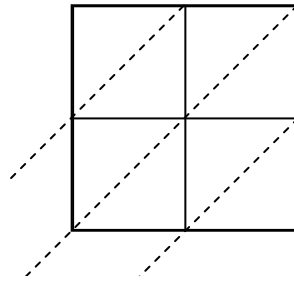


Используйте пространственную решетку для умножения, чтобы решить задачу.

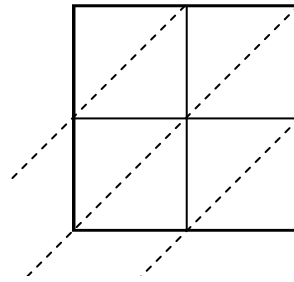
1) $30 \times 94 =$



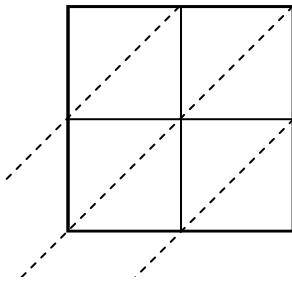
2) $36 \times 35 =$



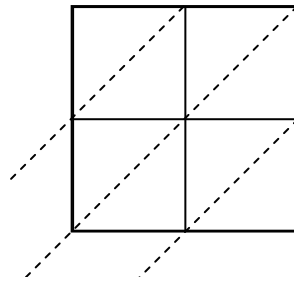
3) $92 \times 86 =$



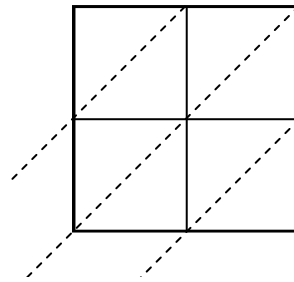
4) $16 \times 57 =$



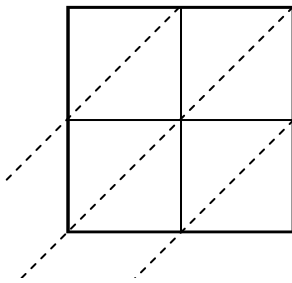
5) $73 \times 79 =$



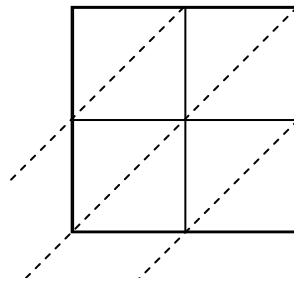
6) $53 \times 45 =$



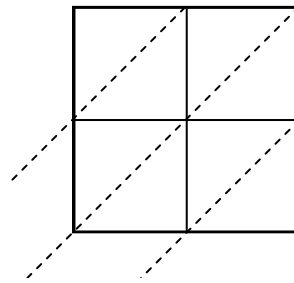
7) $59 \times 35 =$



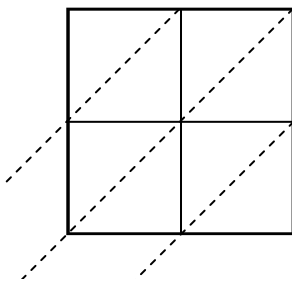
8) $32 \times 28 =$



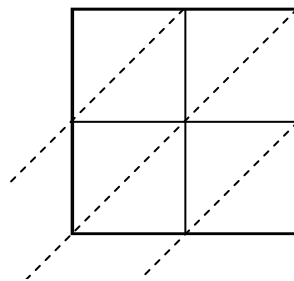
9) $92 \times 54 =$



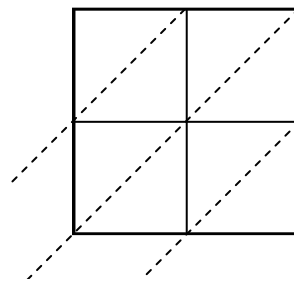
10) $63 \times 85 =$



11) $81 \times 99 =$



12) $31 \times 64 =$



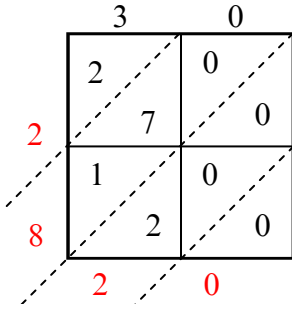
Ответы

1. _____
2. _____
3. _____
4. _____
5. _____
6. _____
7. _____
8. _____
9. _____
10. _____
11. _____
12. _____

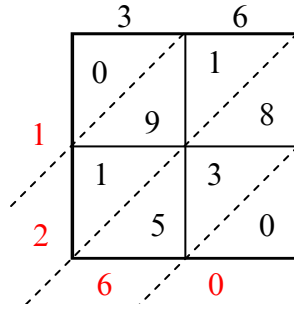


Используйте пространственную решетку для умножения, чтобы решить задачу.

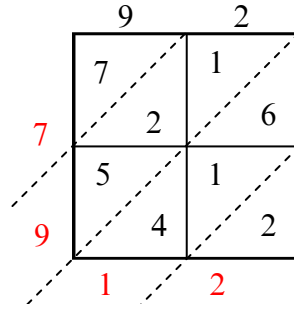
1) $30 \times 94 =$



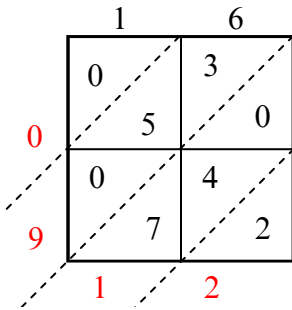
2) $36 \times 35 =$



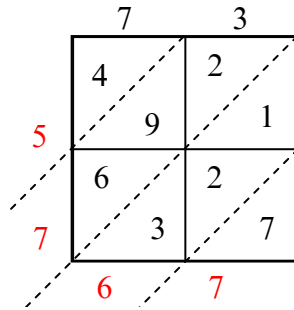
3) $92 \times 86 =$



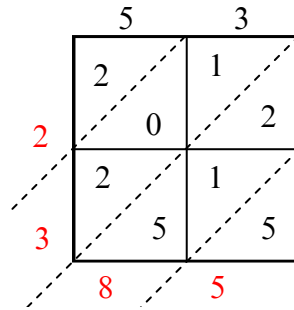
4) $16 \times 57 =$



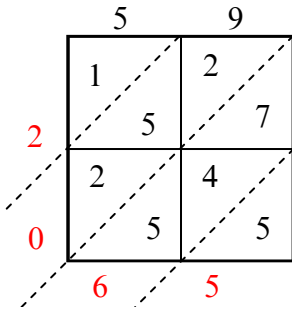
5) $73 \times 79 =$



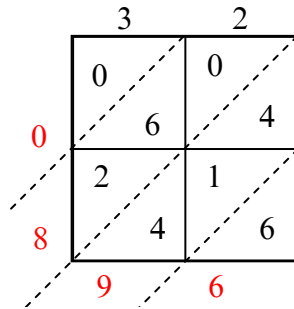
6) $53 \times 45 =$



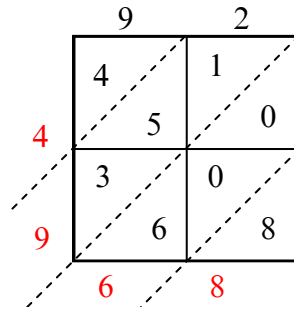
7) $59 \times 35 =$



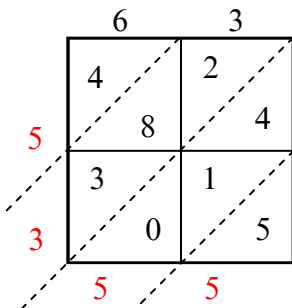
8) $32 \times 28 =$



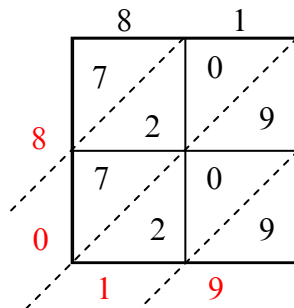
9) $92 \times 54 =$



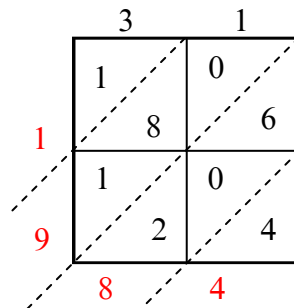
10) $63 \times 85 =$



11) $81 \times 99 =$



12) $31 \times 64 =$



Ответы

1. 2 820

2. 1 260

3. 7 912

4. 912

5. 5 767

6. 2 385

7. 2 065

8. 896

9. 4 968

10. 5 355

11. 8 019

12. 1 984