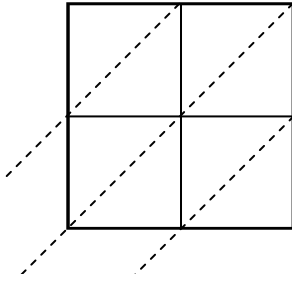


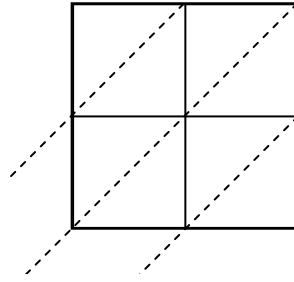


Используйте пространственную решетку для умножения, чтобы решить задачу.

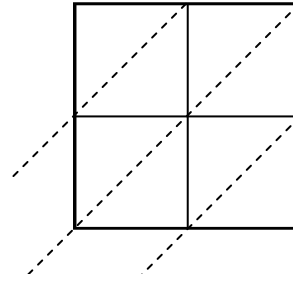
1) $76 \times 68 =$



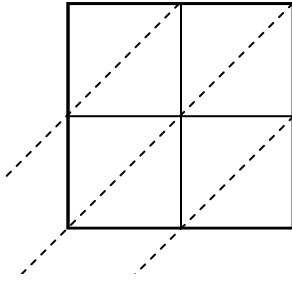
2) $37 \times 53 =$



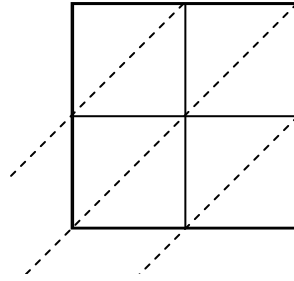
3) $92 \times 64 =$



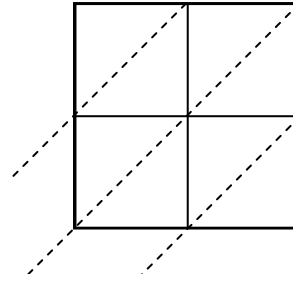
4) $23 \times 67 =$



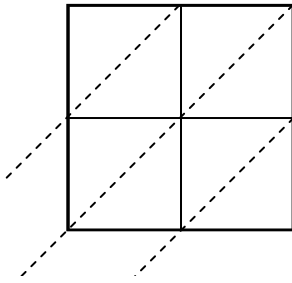
5) $36 \times 54 =$



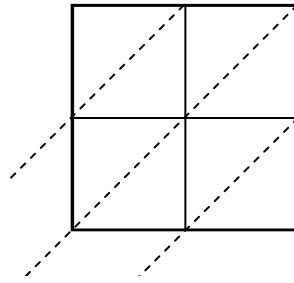
6) $21 \times 28 =$



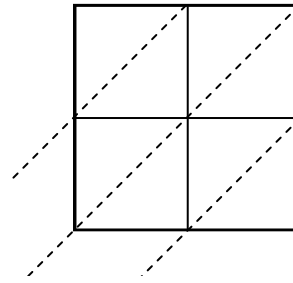
7) $64 \times 68 =$



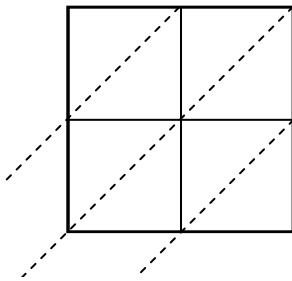
8) $71 \times 35 =$



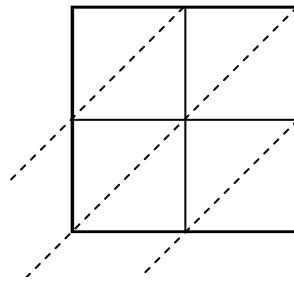
9) $14 \times 92 =$



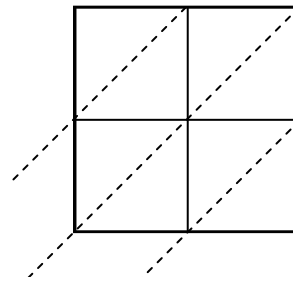
10) $83 \times 50 =$



11) $41 \times 67 =$



12) $97 \times 83 =$



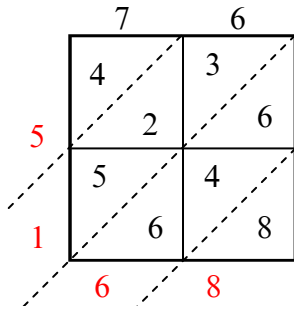
Ответы

1. _____
2. _____
3. _____
4. _____
5. _____
6. _____
7. _____
8. _____
9. _____
10. _____
11. _____
12. _____

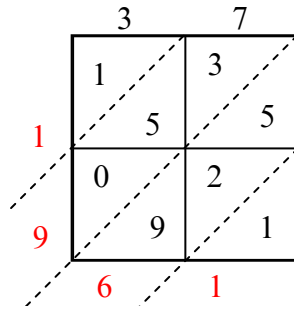


Используйте пространственную решетку для умножения, чтобы решить задачу.

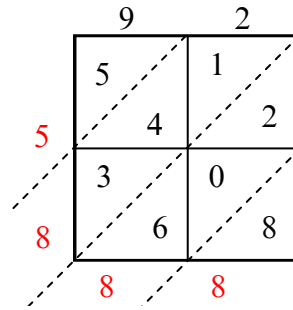
1) $76 \times 68 =$



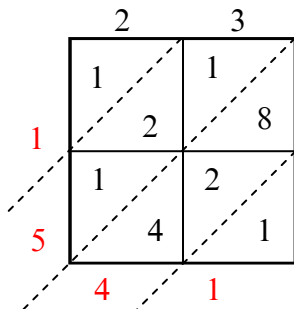
2) $37 \times 53 =$



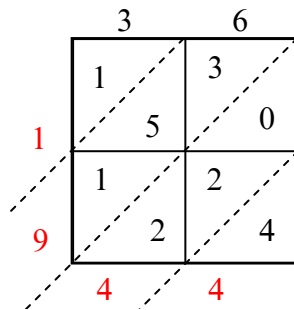
3) $92 \times 64 =$



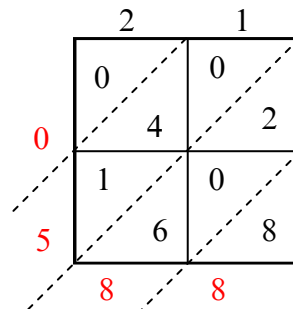
4) $23 \times 67 =$



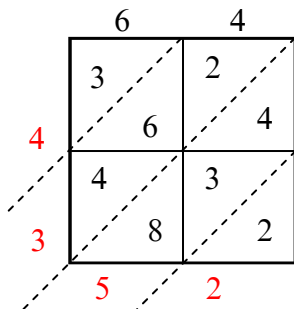
5) $36 \times 54 =$



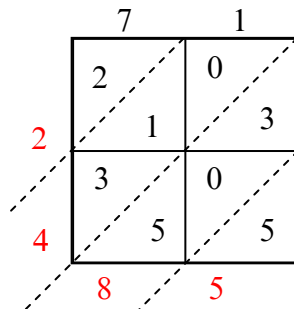
6) $21 \times 28 =$



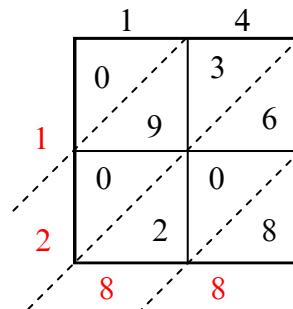
7) $64 \times 68 =$



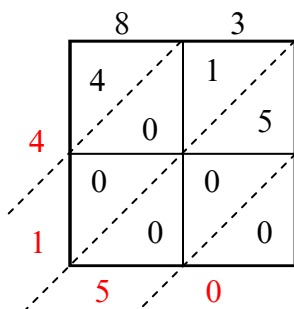
8) $71 \times 35 =$



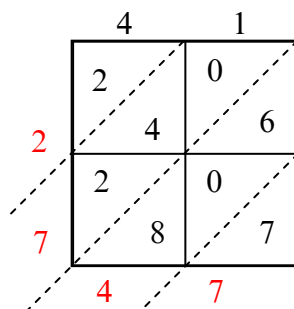
9) $14 \times 92 =$



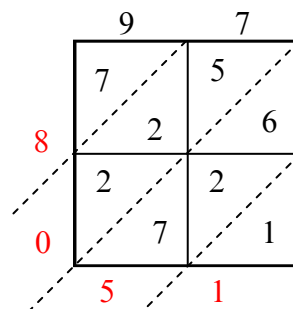
10) $83 \times 50 =$



11) $41 \times 67 =$



12) $97 \times 83 =$



Ответы

1. 5 168

2. 1 961

3. 5 888

4. 1 541

5. 1 944

6. 588

7. 4 352

8. 2 485

9. 1 288

10. 4 150

11. 2 747

12. 8 051