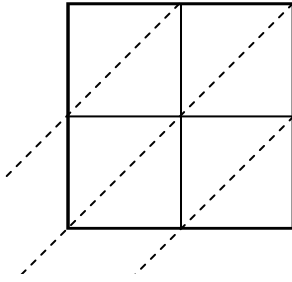


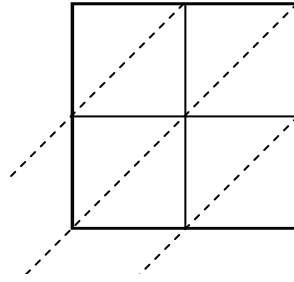


Используйте пространственную решетку для умножения, чтобы решить задачу.

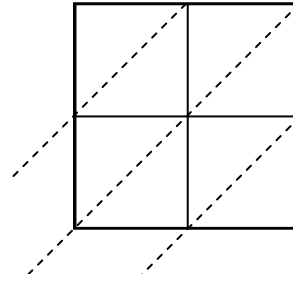
1) $25 \times 78 =$



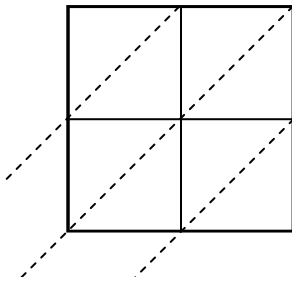
2) $49 \times 80 =$



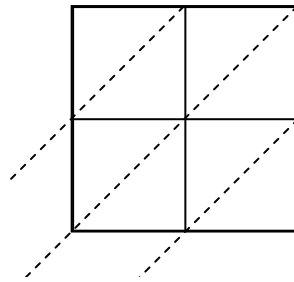
3) $97 \times 57 =$



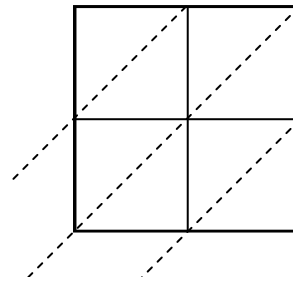
4) $70 \times 15 =$



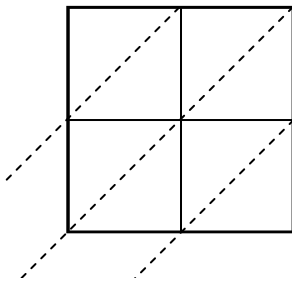
5) $94 \times 56 =$



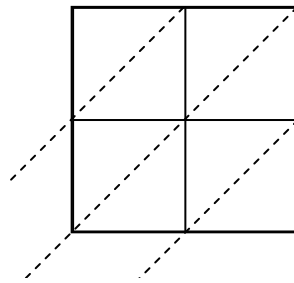
6) $44 \times 92 =$



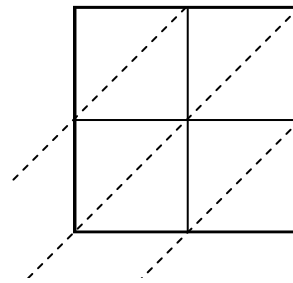
7) $61 \times 84 =$



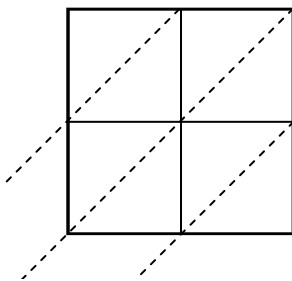
8) $82 \times 28 =$



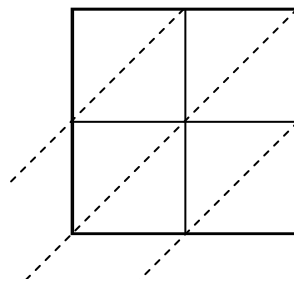
9) $84 \times 15 =$



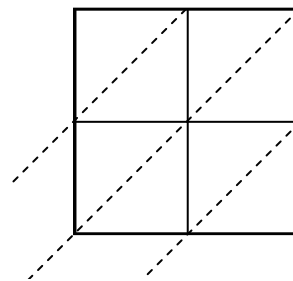
10) $67 \times 33 =$



11) $25 \times 36 =$



12) $19 \times 94 =$



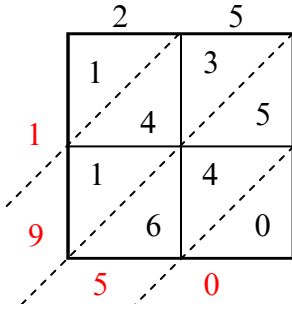
Ответы

1. _____
2. _____
3. _____
4. _____
5. _____
6. _____
7. _____
8. _____
9. _____
10. _____
11. _____
12. _____

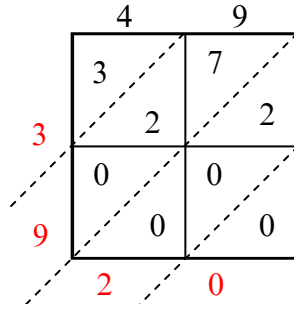


Используйте пространственную решетку для умножения, чтобы решить задачу.

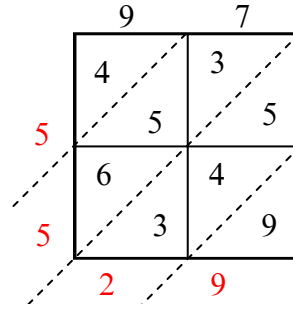
1) $25 \times 78 =$



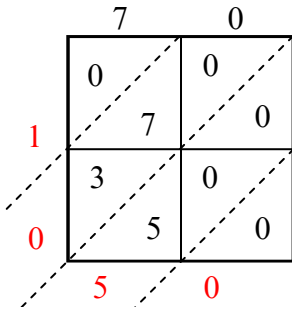
2) $49 \times 80 =$



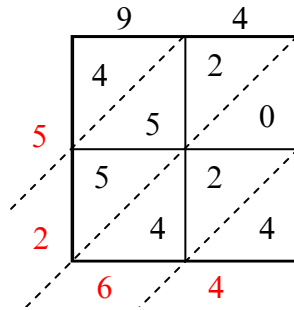
3) $97 \times 57 =$



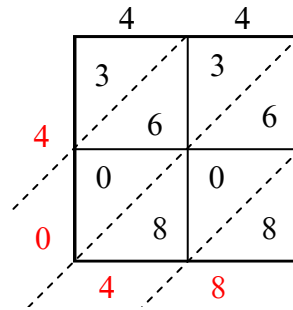
4) $70 \times 15 =$



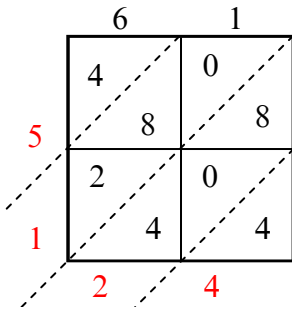
5) $94 \times 56 =$



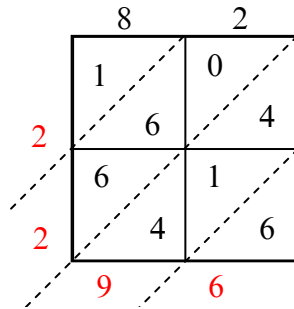
6) $44 \times 92 =$



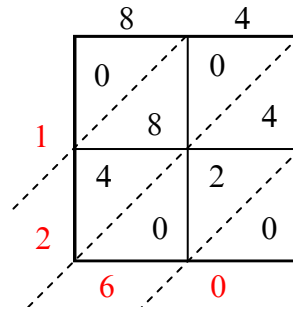
7) $61 \times 84 =$



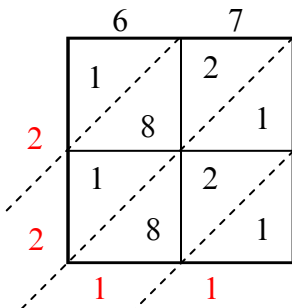
8) $82 \times 28 =$



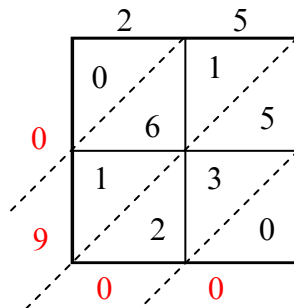
9) $84 \times 15 =$



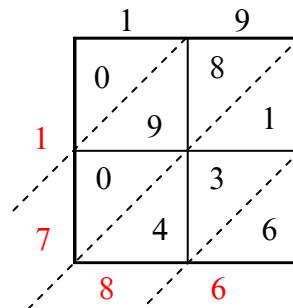
10) $67 \times 33 =$



11) $25 \times 36 =$



12) $19 \times 94 =$



Ответы

1. 1 950

2. 3 920

3. 5 529

4. 1 050

5. 5 264

6. 4 048

7. 5 124

8. 2 296

9. 1 260

10. 2 211

11. 900

12. 1 786