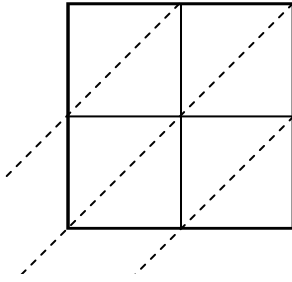


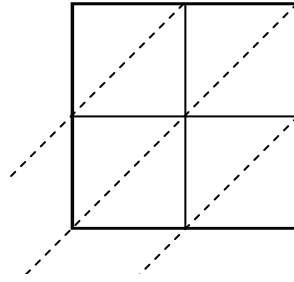


Используйте пространственную решетку для умножения, чтобы решить задачу.

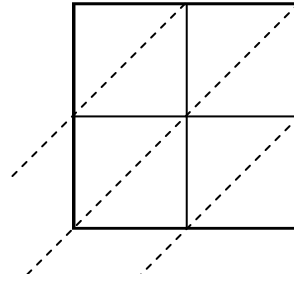
1) $90 \times 35 =$



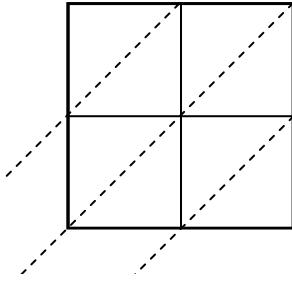
2) $46 \times 72 =$



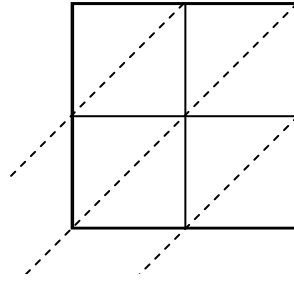
3) $86 \times 39 =$



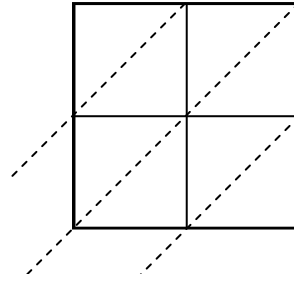
4) $33 \times 53 =$



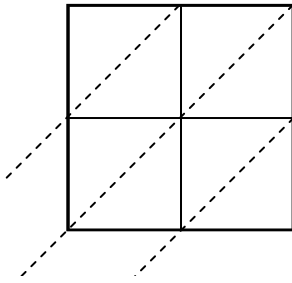
5) $86 \times 34 =$



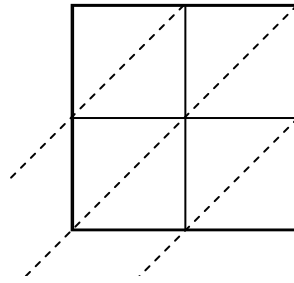
6) $84 \times 46 =$



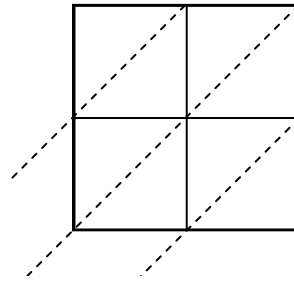
7) $20 \times 96 =$



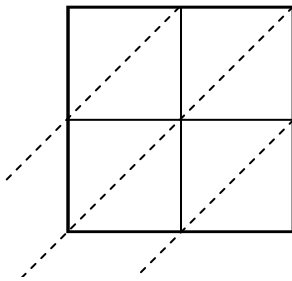
8) $17 \times 15 =$



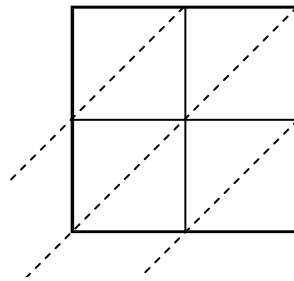
9) $42 \times 75 =$



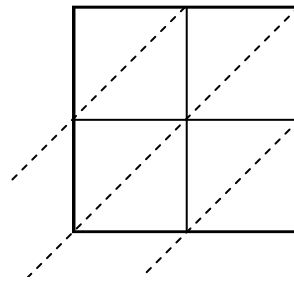
10) $54 \times 57 =$



11) $82 \times 47 =$



12) $13 \times 47 =$



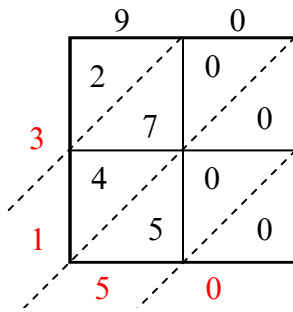
Ответы

1. _____
2. _____
3. _____
4. _____
5. _____
6. _____
7. _____
8. _____
9. _____
10. _____
11. _____
12. _____

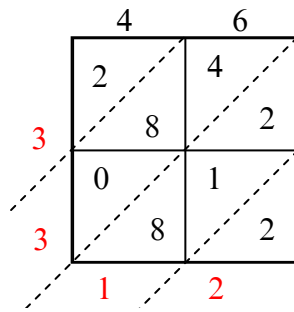


Используйте пространственную решетку для умножения, чтобы решить задачу.

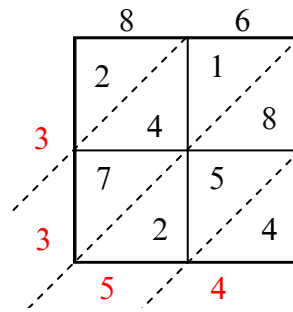
1) $90 \times 35 =$



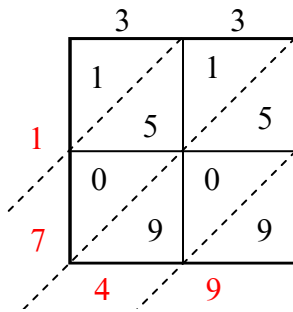
2) $46 \times 72 =$



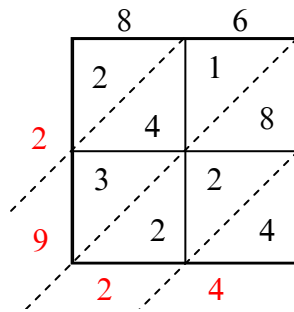
3) $86 \times 39 =$



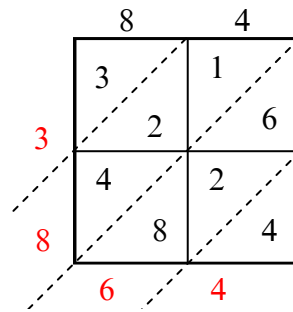
4) $33 \times 53 =$



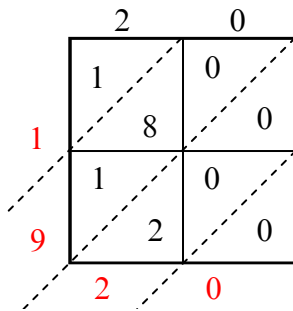
5) $86 \times 34 =$



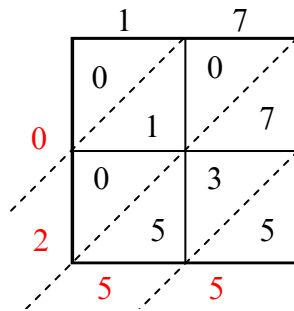
6) $84 \times 46 =$



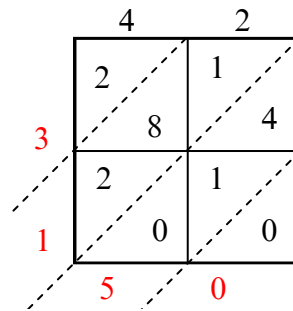
7) $20 \times 96 =$



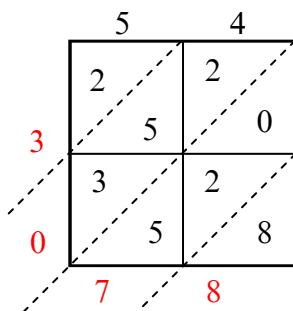
8) $17 \times 15 =$



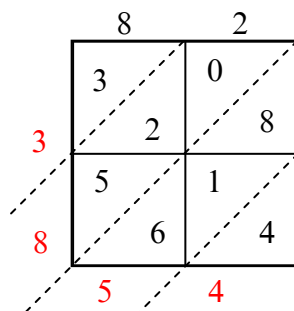
9) $42 \times 75 =$



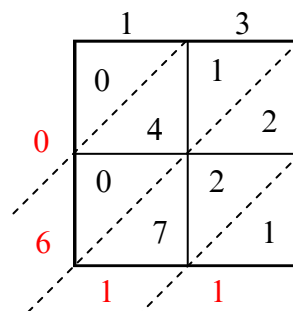
10) $54 \times 57 =$



11) $82 \times 47 =$



12) $13 \times 47 =$



Ответы

1. 3 150

2. 3 312

3. 3 354

4. 1 749

5. 2 924

6. 3 864

7. 1 920

8. 255

9. 3 150

10. 3 078

11. 3 854

12. 611