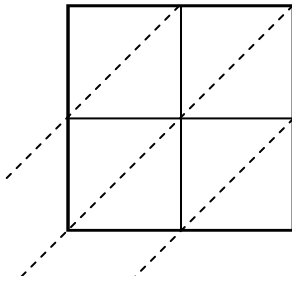


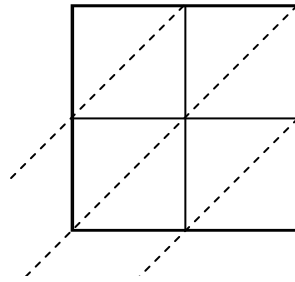


Используйте пространственную решетку для умножения, чтобы решить задачу.

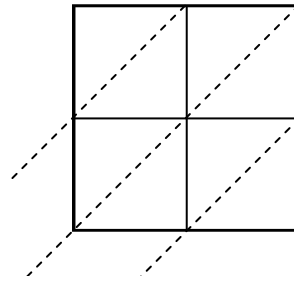
1) $25 \times 71 =$



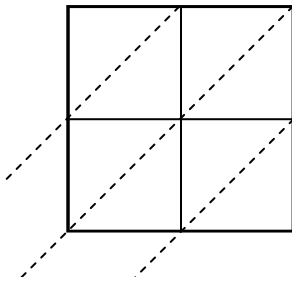
2) $28 \times 47 =$



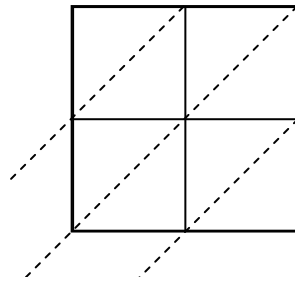
3) $86 \times 92 =$



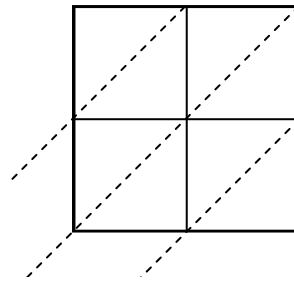
4) $41 \times 74 =$



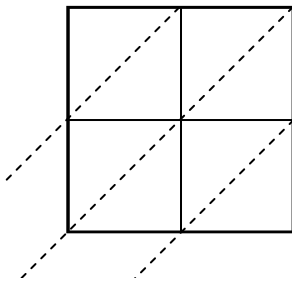
5) $27 \times 26 =$



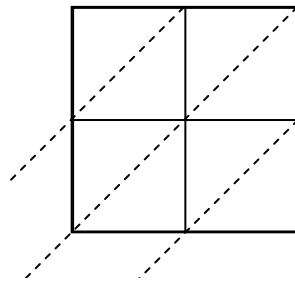
6) $85 \times 35 =$



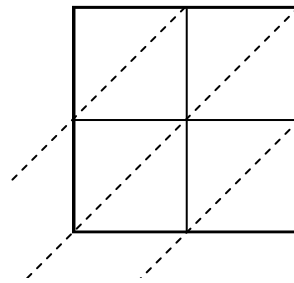
7) $49 \times 38 =$



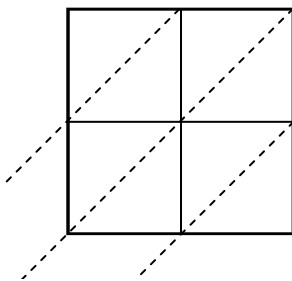
8) $67 \times 71 =$



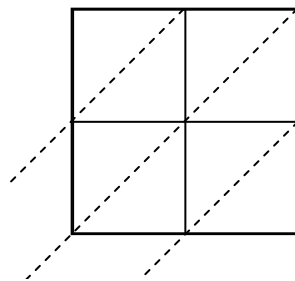
9) $35 \times 68 =$



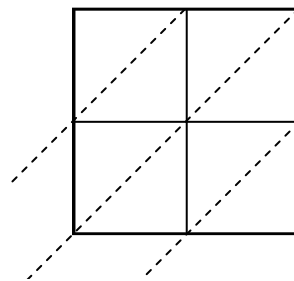
10) $29 \times 13 =$



11) $96 \times 13 =$



12) $58 \times 93 =$



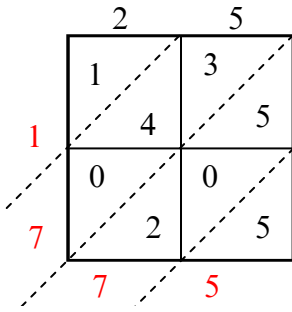
Ответы

1. _____
2. _____
3. _____
4. _____
5. _____
6. _____
7. _____
8. _____
9. _____
10. _____
11. _____
12. _____

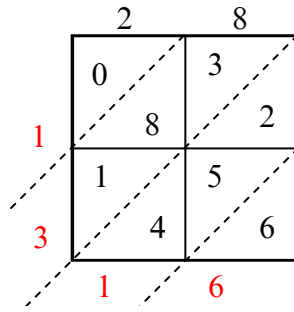


Используйте пространственную решетку для умножения, чтобы решить задачу.

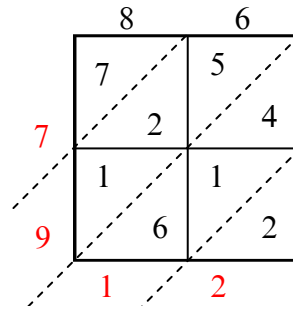
1) $25 \times 71 =$



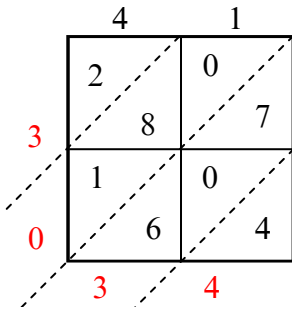
2) $28 \times 47 =$



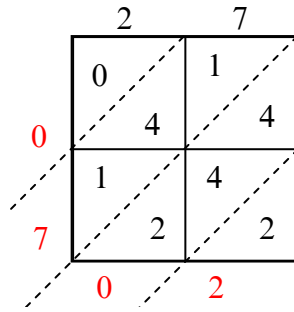
3) $86 \times 92 =$



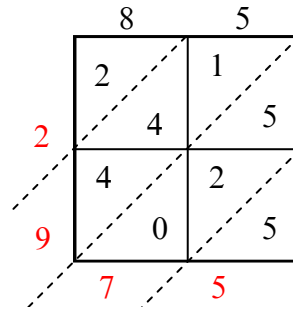
4) $41 \times 74 =$



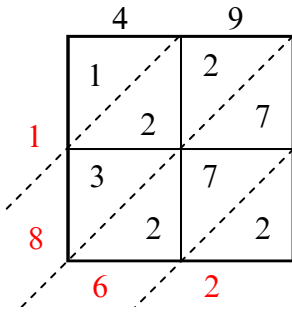
5) $27 \times 26 =$



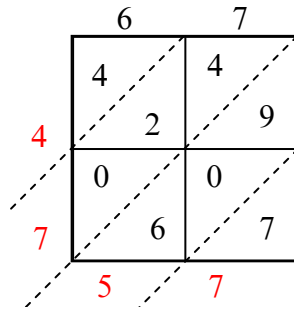
6) $85 \times 35 =$



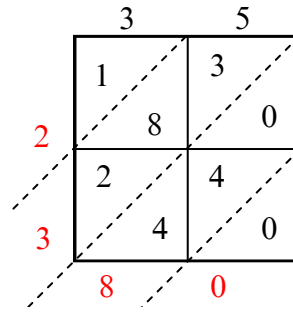
7) $49 \times 38 =$



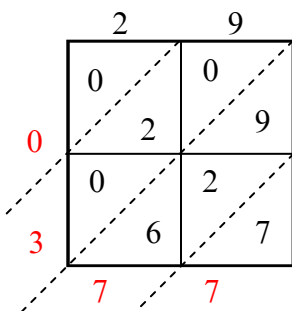
8) $67 \times 71 =$



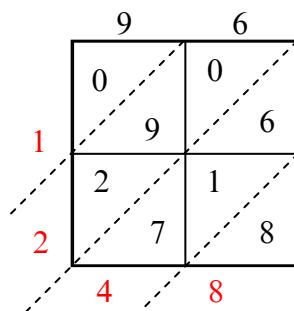
9) $35 \times 68 =$



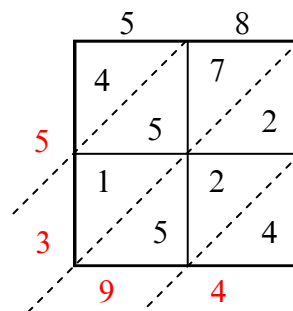
10) $29 \times 13 =$



11) $96 \times 13 =$



12) $58 \times 93 =$



Ответы

1. 1 775

2. 1 316

3. 7 912

4. 3 034

5. 702

6. 2 975

7. 1 862

8. 4 757

9. 2 380

10. 377

11. 1 248

12. 5 394