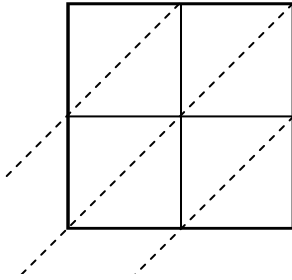


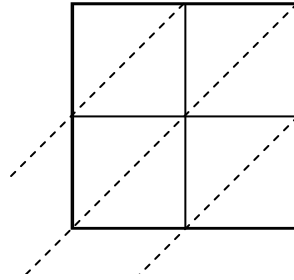


Используйте пространственную решетку для умножения, чтобы решить задачу.

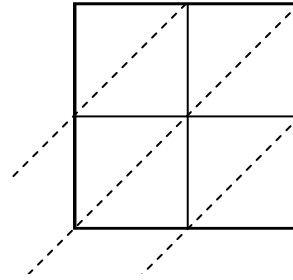
1) $73 \times 43 =$



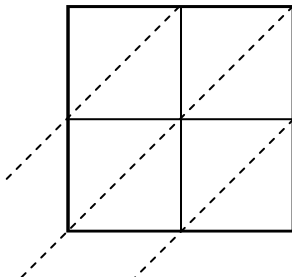
2) $17 \times 60 =$



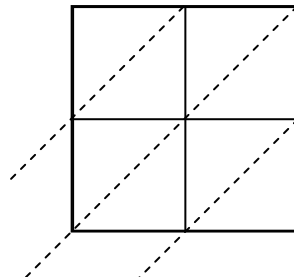
3) $38 \times 41 =$



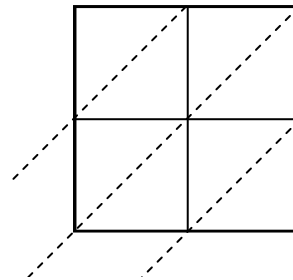
4) $31 \times 96 =$



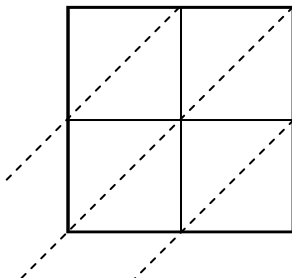
5) $73 \times 33 =$



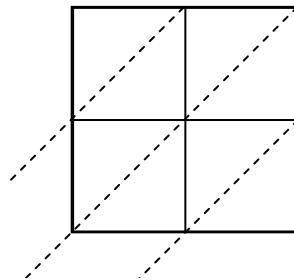
6) $30 \times 47 =$



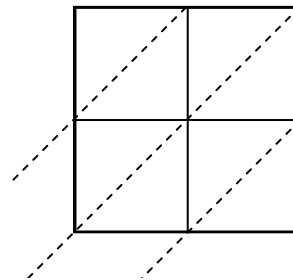
7) $85 \times 74 =$



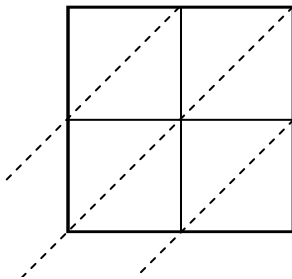
8) $78 \times 34 =$



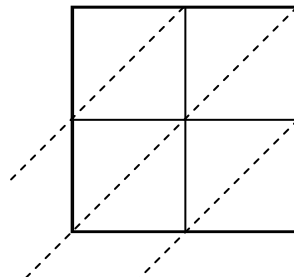
9) $27 \times 81 =$



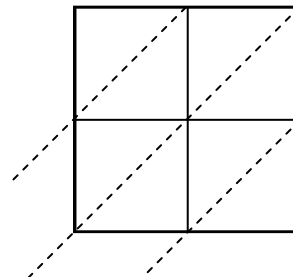
10) $14 \times 42 =$



11) $75 \times 19 =$



12) $84 \times 12 =$



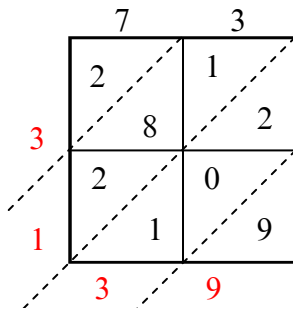
Ответы

1. _____
2. _____
3. _____
4. _____
5. _____
6. _____
7. _____
8. _____
9. _____
10. _____
11. _____
12. _____

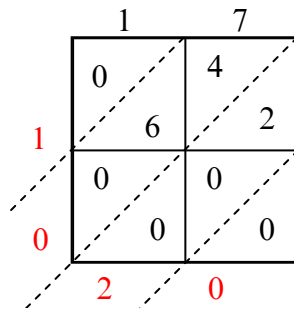


Используйте пространственную решетку для умножения, чтобы решить задачу.

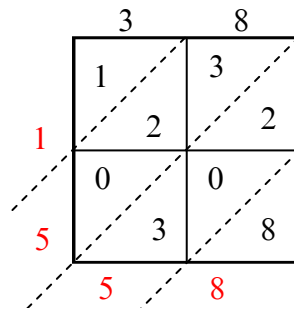
1) $73 \times 43 =$



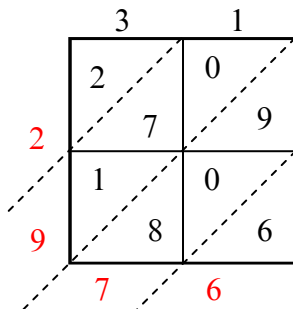
2) $17 \times 60 =$



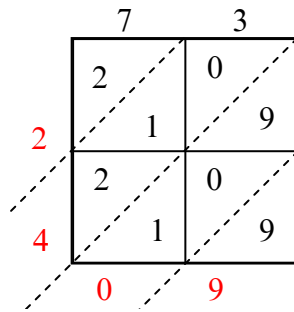
3) $38 \times 41 =$



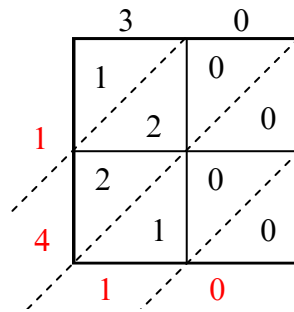
4) $31 \times 96 =$



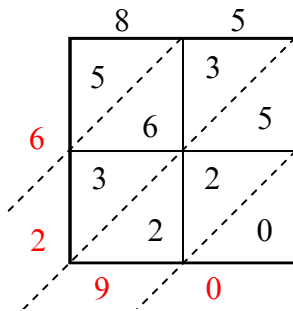
5) $73 \times 33 =$



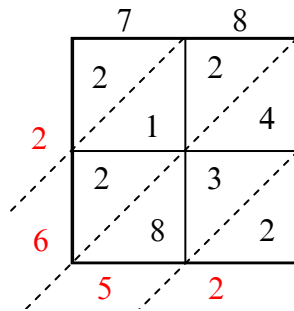
6) $30 \times 47 =$



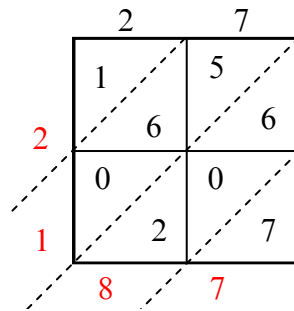
7) $85 \times 74 =$



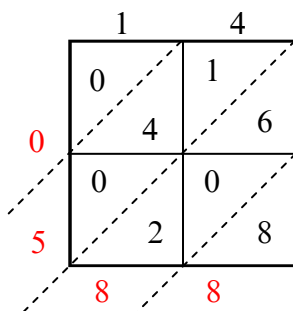
8) $78 \times 34 =$



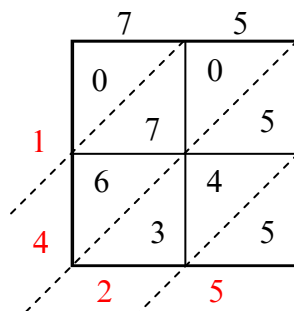
9) $27 \times 81 =$



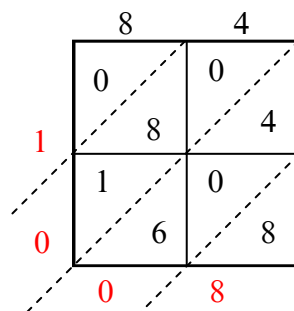
10) $14 \times 42 =$



11) $75 \times 19 =$



12) $84 \times 12 =$



Ответы

1. 3 139

2. 1 020

3. 1 558

4. 2 976

5. 2 409

6. 1 410

7. 6 290

8. 2 652

9. 2 187

10. 588

11. 1 425

12. 1 008