
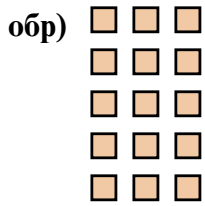




Запишите каждую совокупность в виде суммы и решите ее.

**ОТВЕТЫ**



обр 3+3+3+3+3=15

1. \_\_\_\_\_

2. \_\_\_\_\_

3. \_\_\_\_\_

4. \_\_\_\_\_

5. \_\_\_\_\_

6. \_\_\_\_\_

7. \_\_\_\_\_

8. \_\_\_\_\_

9. \_\_\_\_\_



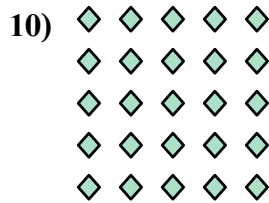
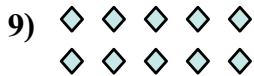


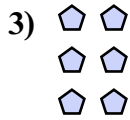
10. \_\_\_\_\_

11. \_\_\_\_\_

12. \_\_\_\_\_

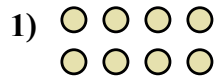
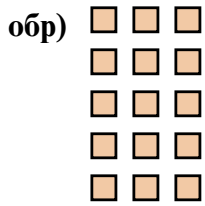
13. \_\_\_\_\_

14. \_\_\_\_\_





Запишите каждую совокупность в виде суммы и решите ее.

**Ответы**

обр)  $3+3+3+3+3=15$

1.  $4+4=8$

2.  $3+3+3=9$

3.  $2+2+2=6$

4.  $2+2+2+2+2=10$

5.  $3+3+3+3=12$

6.  $4+4+4+4=16$

7.  $4+4+4+4+4=20$

8.  $5+5+5+5=20$

9.  $5+5=10$

10.  $5+5+5+5+5=25$

11.  $5+5+5=15$

12.  $4+4+4=12$

13.  $3+3=6$

14.  $2+2=4$

