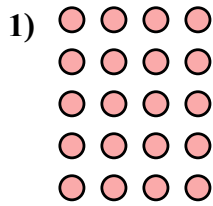
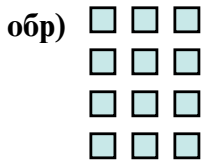




Запишите каждую совокупность в виде суммы и решите ее.

ОТВЕТЫ



обр 3+3+3+3=12

1. _____

2. _____

3. _____

4. _____

5. _____

6. _____

7. _____

8. _____

9. _____

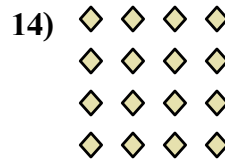


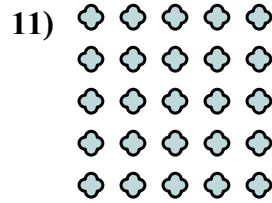


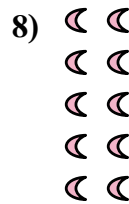
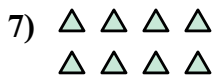

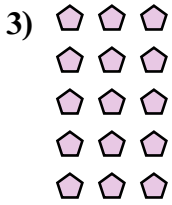
10. _____

11. _____

12. _____

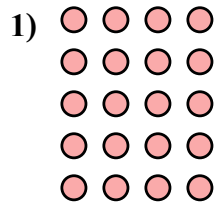
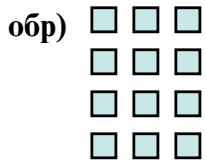
13. _____

14. _____





Запишите каждую совокупность в виде суммы и решите ее.



ОТВЕТЫ

обр	$4+4+4+4+4=20$
1.	$3+3=6$
2.	$4+4=8$
3.	$3+3+3+3+3=15$
4.	$2+2+2+2=8$
5.	$3+3+3+3=12$
6.	$4+4+4+4=16$
7.	$3+3+3=9$
8.	$5+5+5=15$
9.	$2+2+2=6$
10.	$5+5+5+5+5=25$
11.	$5+5+5+5=20$
12.	$4+4+4=12$
13.	$2+2=4$
14.	$2+2+2+2+2=10$

