
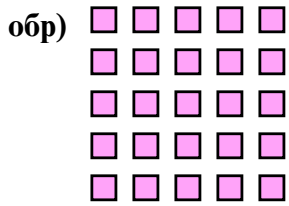




Запишите каждую совокупность в виде суммы и решите ее.



ОТВЕТЫ

обр 5+5+5+5+5=25

1. _____

2. _____

3. _____

4. _____

5. _____

6. _____

7. _____

8. _____

9. _____

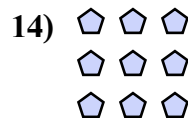

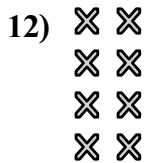
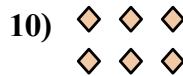
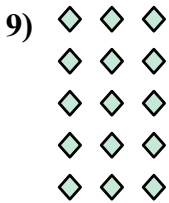
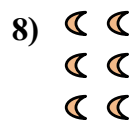
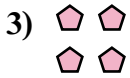
10. _____

11. _____

12. _____


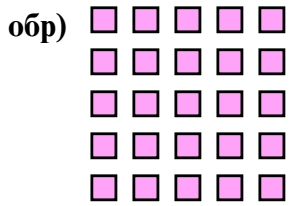
13. _____

14. _____





Запишите каждую совокупность в виде суммы и решите ее.

**ОТВЕТЫ**

обр $4+4+4+4+4=20$

1. $3+3=6$

2. $4+4=8$

3. $3+3+3+3+3=15$

4. $2+2+2+2=8$

5. $3+3+3+3=12$

6. $4+4+4+4=16$

7. $3+3+3=9$

8. $5+5+5=15$

9. $2+2+2=6$

10. $5+5+5+5+5=25$

11. $5+5+5+5=20$

12. $4+4+4=12$

13. $2+2=4$

14. $2+2+2+2+2=10$

