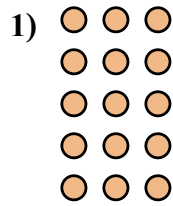





Запишите каждую совокупность в виде суммы и решите ее.

ОТВЕТЫ



обр 4+4=8

1. _____

2. _____

3. _____

4. _____

5. _____

6. _____

7. _____

8. _____

9. _____


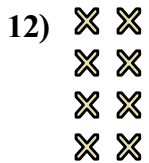
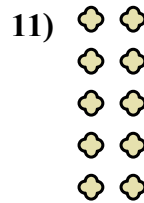
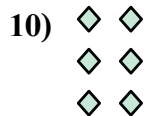
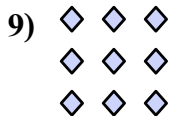

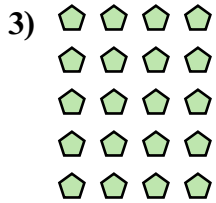
10. _____

11. _____

12. _____

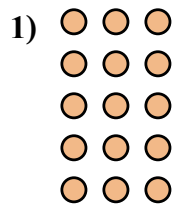
13. _____

14. _____





Запишите каждую совокупность в виде суммы и решите ее.



| ОТВЕТЫ | |
|--------|----------------------------------|
| обр | <u>$4+4+4+4+4=20$</u> |
| 1. | <u>$3+3=6$</u> |
| 2. | <u>$4+4=8$</u> |
| 3. | <u>$3+3+3+3+3=15$</u> |
| 4. | <u>$2+2+2+2=8$</u> |
| 5. | <u>$3+3+3+3=12$</u> |
| 6. | <u>$4+4+4+4=16$</u> |
| 7. | <u>$3+3+3=9$</u> |
| 8. | <u>$5+5+5=15$</u> |
| 9. | <u>$2+2+2=6$</u> |
| 10. | <u>$5+5+5+5+5=25$</u> |
| 11. | <u>$5+5+5+5=20$</u> |
| 12. | <u>$4+4+4=12$</u> |
| 13. | <u>$2+2=4$</u> |
| 14. | <u>$2+2+2+2+2=10$</u> |

