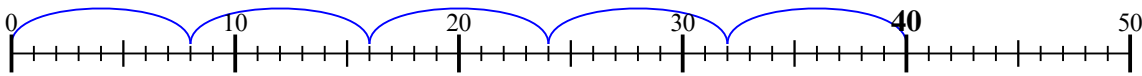




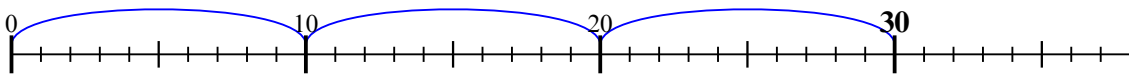


Используйте числовую прямую для решения задачи.

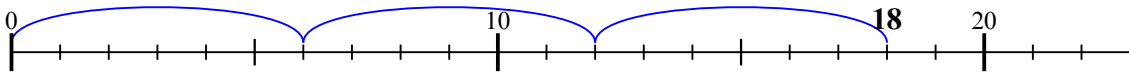
1)  $40 : 8 =$



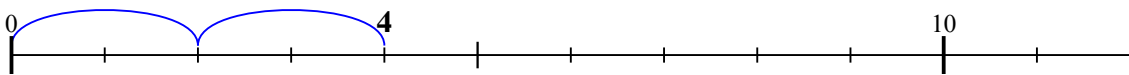
2)  $30 : 10 =$



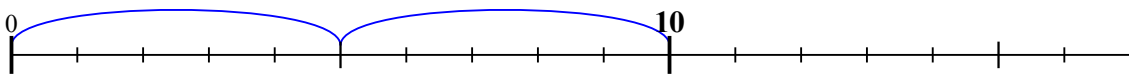
3)  $18 : 6 =$



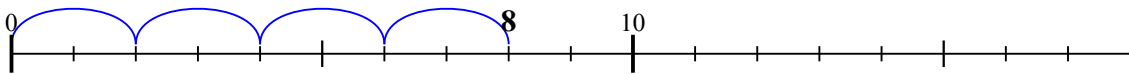
4)  $4 : 2 =$



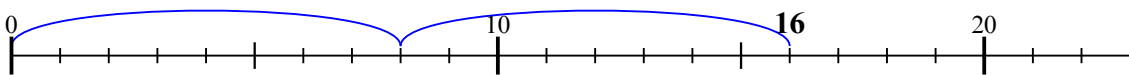
5)  $10 : 5 =$



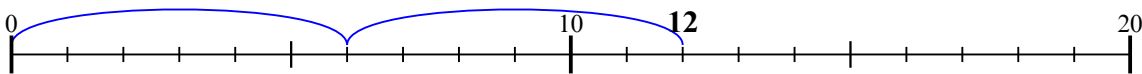
6)  $8 : 2 =$



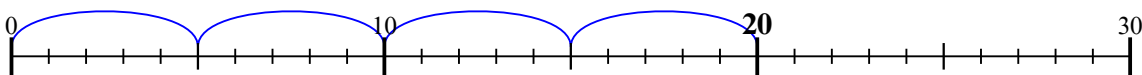
7)  $16 : 8 =$



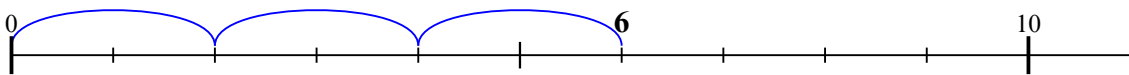
8)  $12 : 6 =$



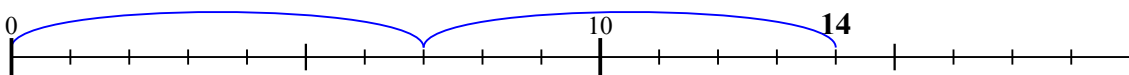
9)  $20 : 5 =$



10)  $6 : 2 =$



11)  $14 : 7 =$



**ОТВЕТЫ**

1. 5

2. 3

3. 3

4. 2

5. 2

6. 4

7. 2

8. 2

9. 4

10. 3

11. 2